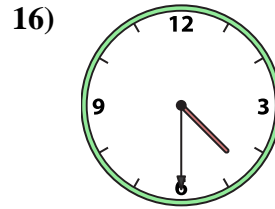
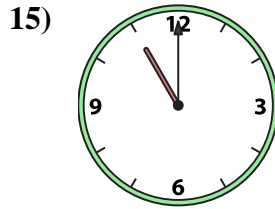
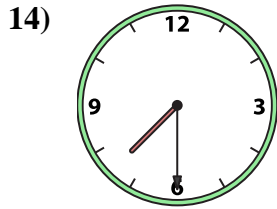
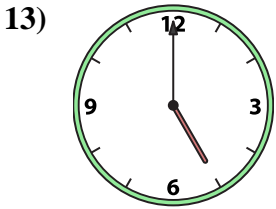
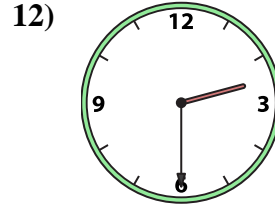
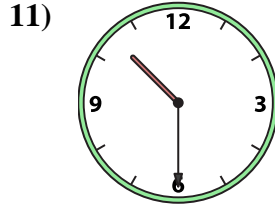
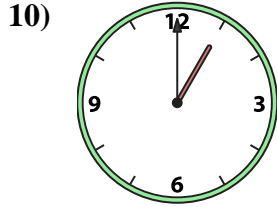
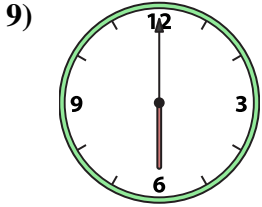
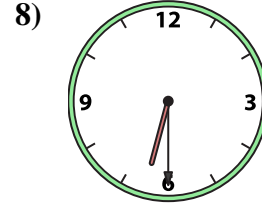
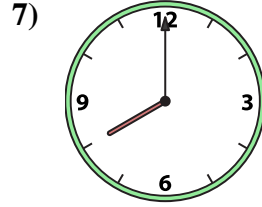
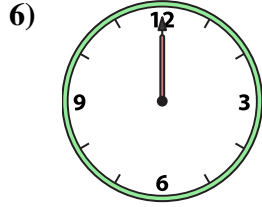

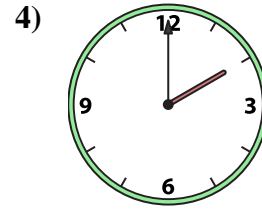
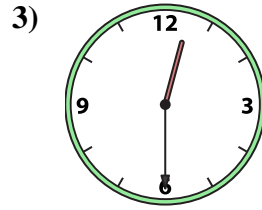
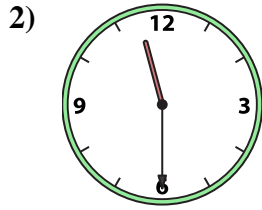
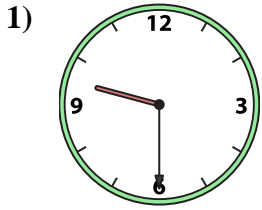




Match the analog clock to the digital clock.

Answers



A. **4:30**

B. **10:30**

C. **8:00**

D. **1:00**

E. **3:30**

F. **5:00**

G. **2:30**

H. **7:30**

I. **12:00**

J. **2:00**

K. **6:30**

L. **11:30**

M. **9:30**

N. **12:30**

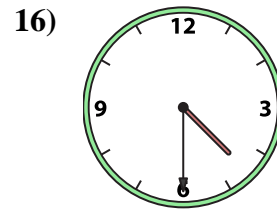
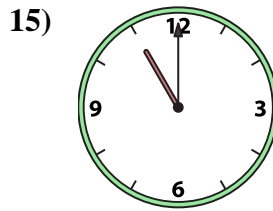
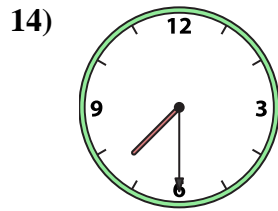
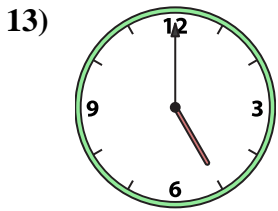
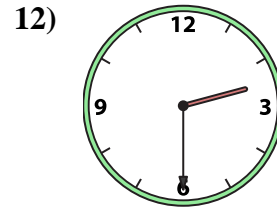
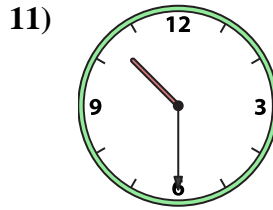
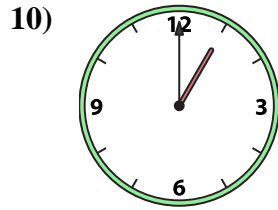
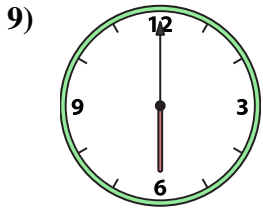
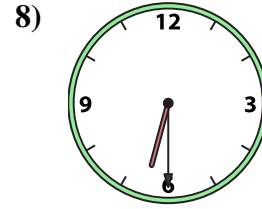
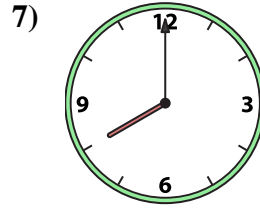
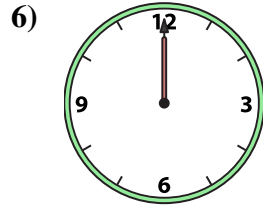
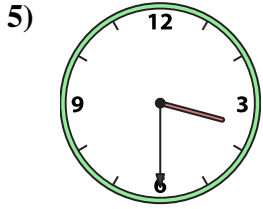
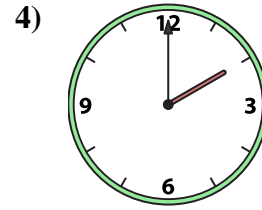
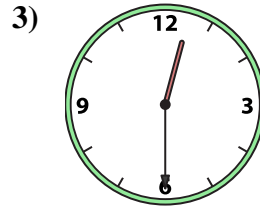
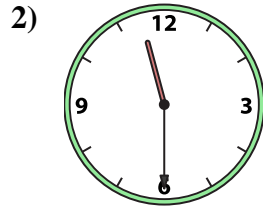
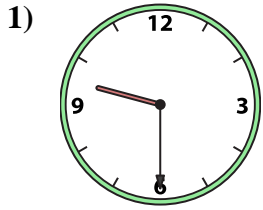
O. **6:00**

P. **11:00**

1. _____
2. _____
3. _____
4. _____
5. _____
6. _____
7. _____
8. _____
9. _____
10. _____
11. _____
12. _____
13. _____
14. _____
15. _____
16. _____



Match the analog clock to the digital clock.



A. **4:30**

B. **10:30**

C. **8:00**

D. **1:00**

E. **3:30**

F. **5:00**

G. **2:30**

H. **7:30**

I. **12:00**

J. **2:00**

K. **6:30**

L. **11:30**

M. **9:30**

N. **12:30**

O. **6:00**

P. **11:00**

Answers

1. **M**

2. **L**

3. **N**

4. **J**

5. **E**

6. **I**

7. **C**

8. **K**

9. **O**

10. **D**

11. **B**

12. **G**

13. **F**

14. **H**

15. **P**

16. **A**