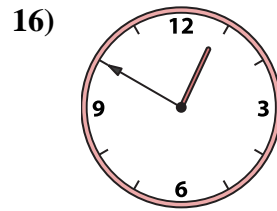
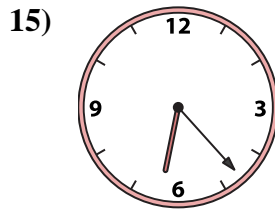
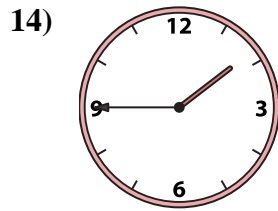
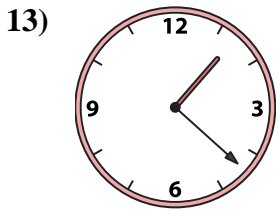
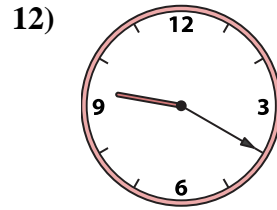
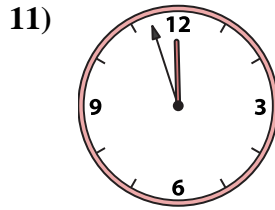
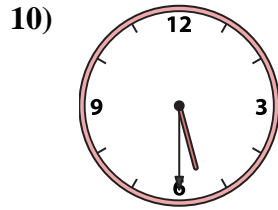
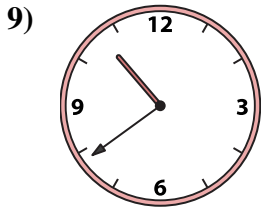
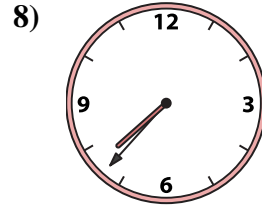
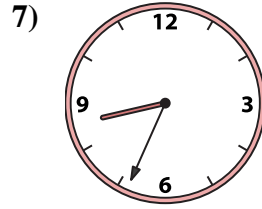
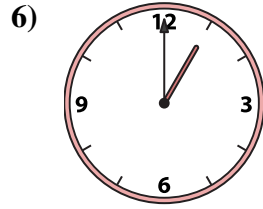
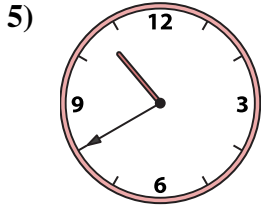
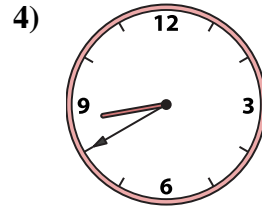
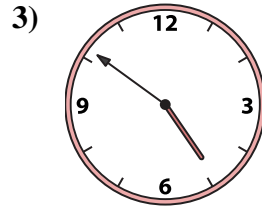
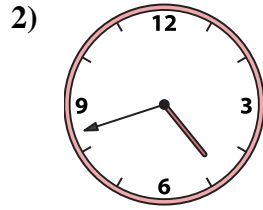
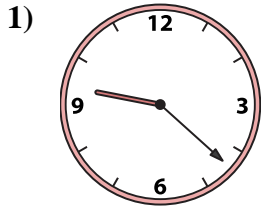




Match the analog clock to the digital clock.

**Answers**



A. **7:37**

B. **10:40**

C. **1:00**

D. **11:57**

E. **10:39**

F. **5:30**

G. **1:45**

H. **9:20**

I. **6:23**

J. **1:22**

K. **4:51**

L. **12:50**

M. **4:42**

N. **8:34**

O. **8:40**

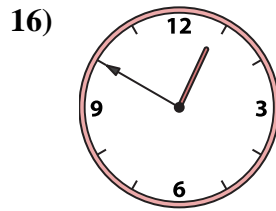
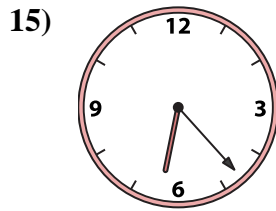
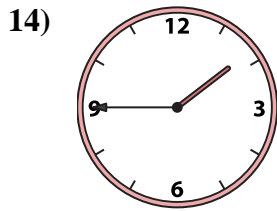
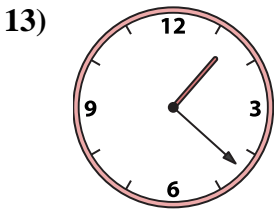
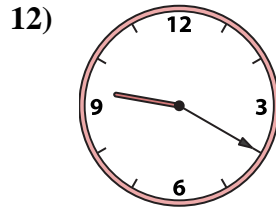
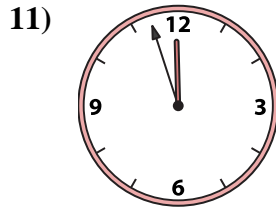
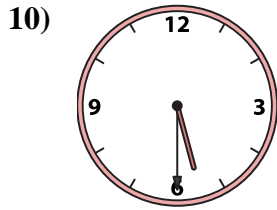
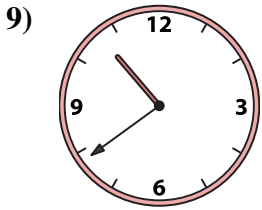
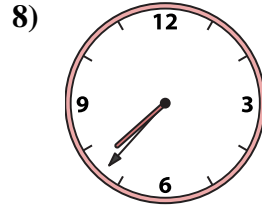
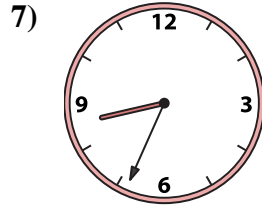
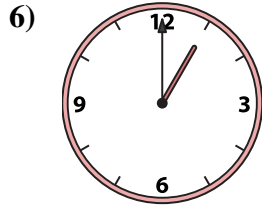
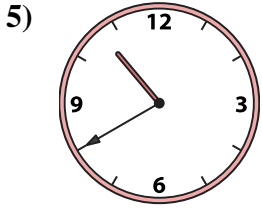
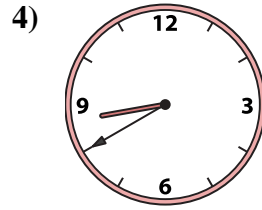
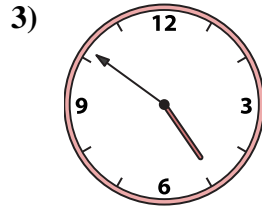
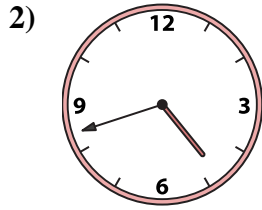
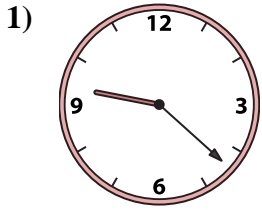
P. **9:22**

1. \_\_\_\_\_
2. \_\_\_\_\_
3. \_\_\_\_\_
4. \_\_\_\_\_
5. \_\_\_\_\_
6. \_\_\_\_\_
7. \_\_\_\_\_
8. \_\_\_\_\_
9. \_\_\_\_\_
10. \_\_\_\_\_
11. \_\_\_\_\_
12. \_\_\_\_\_
13. \_\_\_\_\_
14. \_\_\_\_\_
15. \_\_\_\_\_
16. \_\_\_\_\_



Match the analog clock to the digital clock.

**Answers**



A. **7:37**

B. **10:40**

C. **1:00**

D. **11:57**

E. **10:39**

F. **5:30**

G. **1:45**

H. **9:20**

I. **6:23**

J. **1:22**

K. **4:51**

L. **12:50**

M. **4:42**

N. **8:34**

O. **8:40**

P. **9:22**

1. **P**

2. **M**

3. **K**

4. **O**

5. **B**

6. **C**

7. **N**

8. **A**

9. **E**

10. **F**

11. **D**

12. **H**

13. **J**

14. **G**

15. **I**

16. **L**