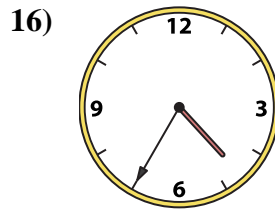
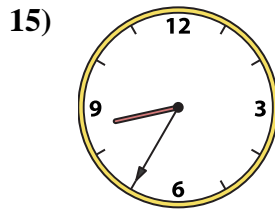
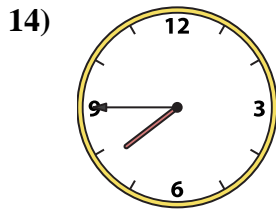
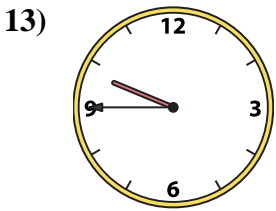
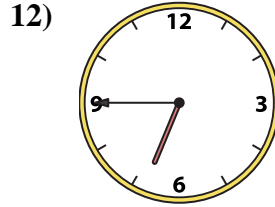
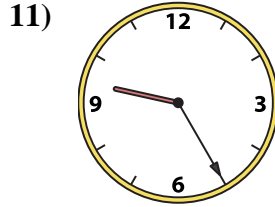
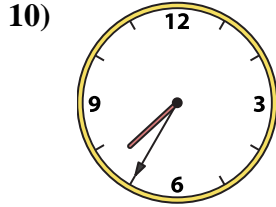

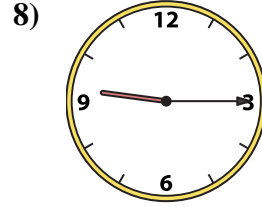
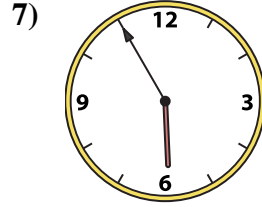


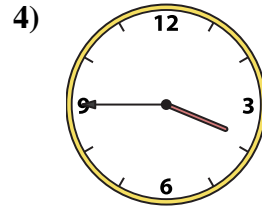
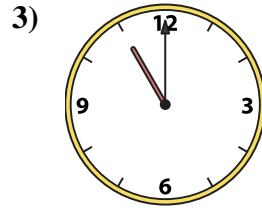
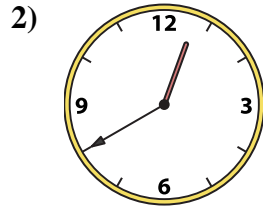





Match the analog clock to the digital clock.

**Answers**



A. **11:40**

B. **12:40**

C. **5:55**

D. **12:50**

E. **3:45**

F. **9:25**

G. **8:35**

H. **4:35**

I. **7:35**

J. **11:30**

K. **7:45**

L. **11:00**

M. **6:45**

N. **12:20**

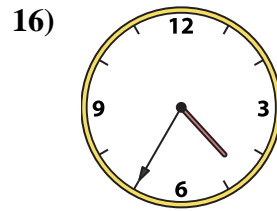
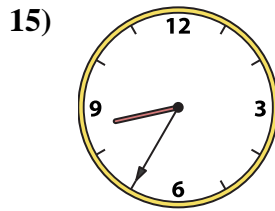
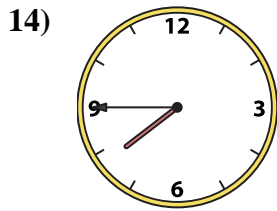
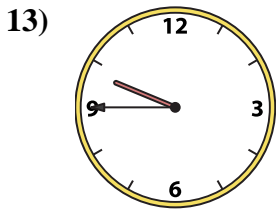
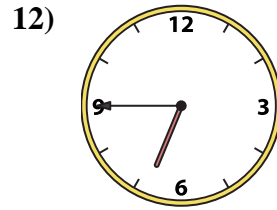
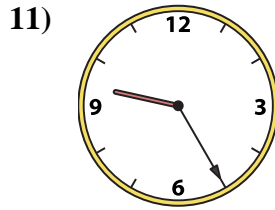
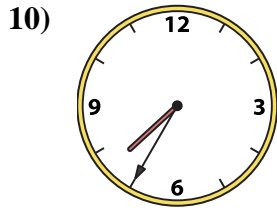
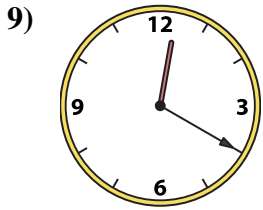
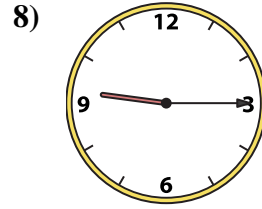
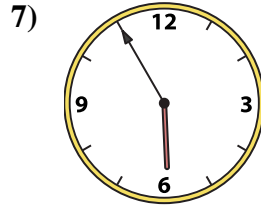
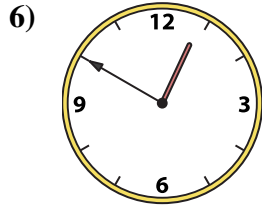
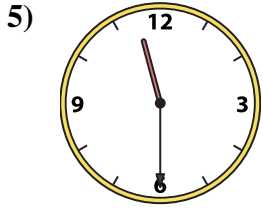
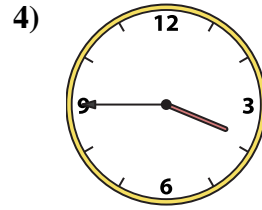
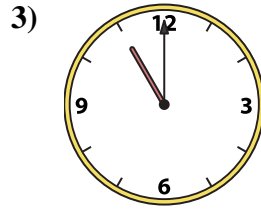


O. **9:45**

P. **9:15**

1. \_\_\_\_\_
2. \_\_\_\_\_
3. \_\_\_\_\_
4. \_\_\_\_\_
5. \_\_\_\_\_
6. \_\_\_\_\_
7. \_\_\_\_\_
8. \_\_\_\_\_
9. \_\_\_\_\_
10. \_\_\_\_\_
11. \_\_\_\_\_
12. \_\_\_\_\_
13. \_\_\_\_\_
14. \_\_\_\_\_
15. \_\_\_\_\_
16. \_\_\_\_\_



Match the analog clock to the digital clock.



A. **11:40**

B. **12:40**

C. **5:55**

D. **12:50**

E. **3:45**

F. **9:25**

G. **8:35**

H. **4:35**

I. **7:35**

J. **11:30**

K. **7:45**

L. **11:00**

M. **6:45**

N. **12:20**

O. **9:45**

P. **9:15**

**Answers**

1. **A**

2. **B**

3. **L**

4. **E**

5. **J**

6. **D**

7. **C**

8. **P**

9. **N**

10. **I**

11. **F**

12. **M**

13. **O**

14. **K**

15. **G**

16. **H**