



Solve each problem.

Answers

1) $2 + 2 = \underline{\quad}$

2) $3 + 2 = \underline{\quad}$

3) $5 + 0 = \underline{\quad}$

4) $4 + 1 = \underline{\quad}$

5) $4 + 0 = \underline{\quad}$

6) $2 + 3 = \underline{\quad}$

7) $2 + 1 = \underline{\quad}$

8) $3 + 0 = \underline{\quad}$

9) $3 + 1 = \underline{\quad}$

10) $1 + 3 = \underline{\quad}$

11) $4 - 4 = \underline{\quad}$

12) $3 - 3 = \underline{\quad}$

13) $5 - 4 = \underline{\quad}$

14) $5 - 5 = \underline{\quad}$

15) $4 - 2 = \underline{\quad}$

16) $4 - 3 = \underline{\quad}$

17) $3 - 1 = \underline{\quad}$

18) $5 - 3 = \underline{\quad}$

19) $2 - 1 = \underline{\quad}$

20) $1 - 1 = \underline{\quad}$

1. _____
2. _____
3. _____
4. _____
5. _____
6. _____
7. _____
8. _____
9. _____
10. _____
11. _____
12. _____
13. _____
14. _____
15. _____
16. _____
17. _____
18. _____
19. _____
20. _____



Solve each problem.

1) $2 + 2 = \underline{4}$

2) $3 + 2 = \underline{5}$

3) $5 + 0 = \underline{5}$

4) $4 + 1 = \underline{5}$

5) $4 + 0 = \underline{4}$

6) $2 + 3 = \underline{5}$

7) $2 + 1 = \underline{3}$

8) $3 + 0 = \underline{3}$

9) $3 + 1 = \underline{4}$

10) $1 + 3 = \underline{4}$

11) $4 - 4 = \underline{0}$

12) $3 - 3 = \underline{0}$

13) $5 - 4 = \underline{1}$

14) $5 - 5 = \underline{0}$

15) $4 - 2 = \underline{2}$

16) $4 - 3 = \underline{1}$

17) $3 - 1 = \underline{2}$

18) $5 - 3 = \underline{2}$

19) $2 - 1 = \underline{1}$

20) $1 - 1 = \underline{0}$

Answers

1. 4

2. 5

3. 5

4. 5

5. 4

6. 5

7. 3

8. 3

9. 4

10. 4

11. 0

12. 0

13. 1

14. 0

15. 2

16. 1

17. 2



18. 2



19. 1


20. 0






Solve each problem.



1) 2 + 2 = _____
 



2) 3 + 2 = _____
 


3) 5 + 0 = _____




4) 4 + 1 = _____
 



5) 4 + 0 = _____



6) 2 + 3 = _____
 


7) 2 + 1 = _____
 


8) 3 + 0 = _____



9) 3 + 1 = _____
 


10) 1 + 3 = _____
 


11) 4 - 4 = _____


12) 3 - 3 = _____


13) 5 - 4 = _____


14) 5 - 5 = _____


15) 4 - 2 = _____


16) 4 - 3 = _____


Answers

1. _____
2. _____
3. _____
4. _____
5. _____
6. _____
7. _____
8. _____
9. _____
10. _____
11. _____
12. _____
13. _____
14. _____
15. _____
16. _____