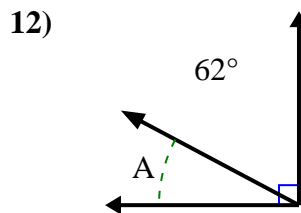
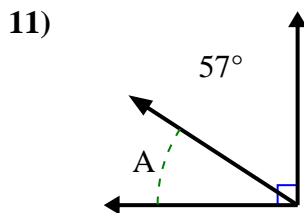
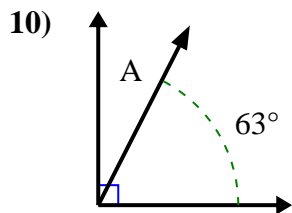
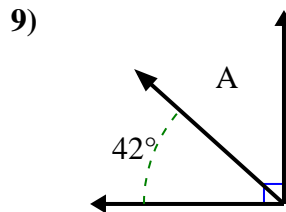
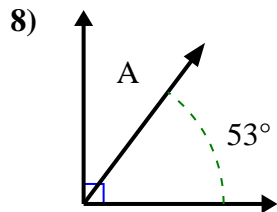
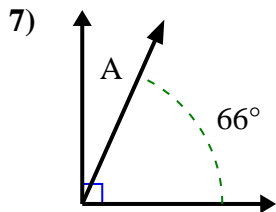
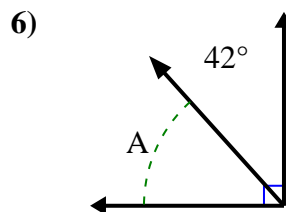
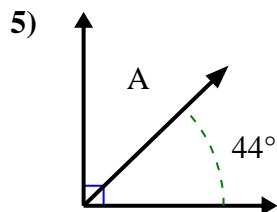
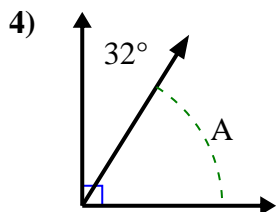
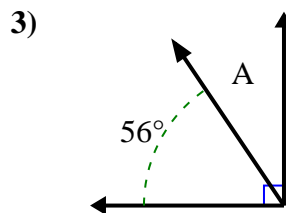
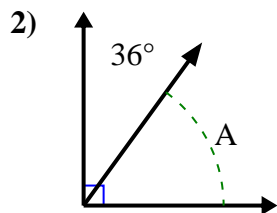
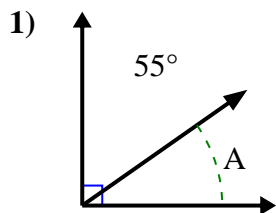




Find the value of 'A' in the set of complementary angles.

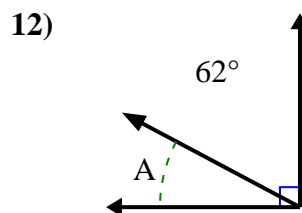
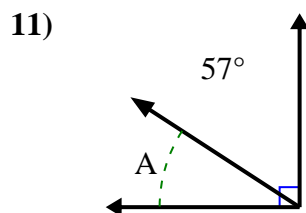
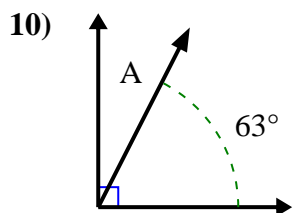
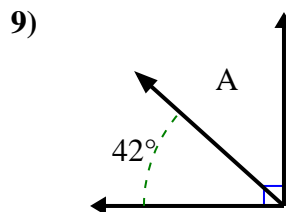
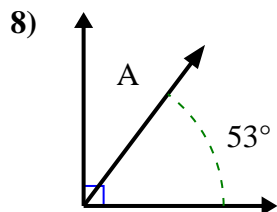
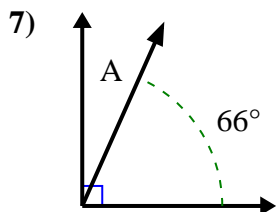
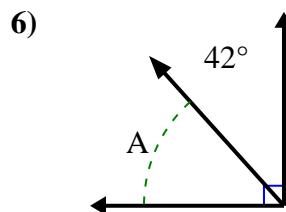
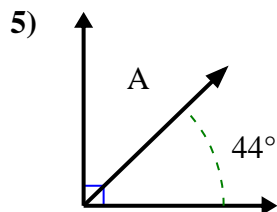
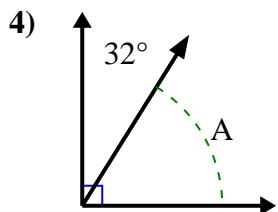
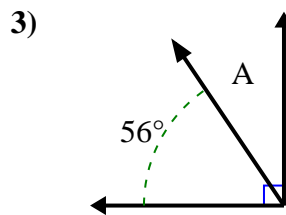
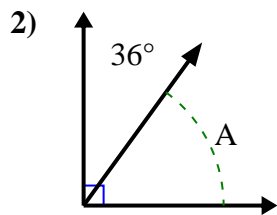
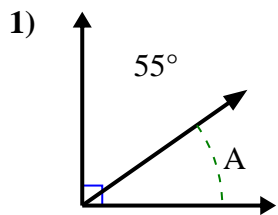


Answers

1. \_\_\_\_\_
2. \_\_\_\_\_
3. \_\_\_\_\_
4. \_\_\_\_\_
5. \_\_\_\_\_
6. \_\_\_\_\_
7. \_\_\_\_\_
8. \_\_\_\_\_
9. \_\_\_\_\_
10. \_\_\_\_\_
11. \_\_\_\_\_
12. \_\_\_\_\_



Find the value of 'A' in the set of complementary angles.



Answers

1. 35°

2. 54°

3. 34°

4. 58°

5. 46°

6. 48°

7. 24°

8. 37°

9. 48°

10. 27°

11. 33°

12. 28°