



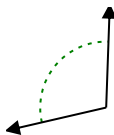
Determine if the angle shown is acute, obtuse, right or straight.

**Answers**

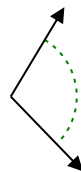
Ex)



1)



2)

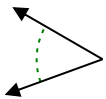


Ex. **right**

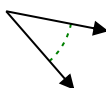
1. \_\_\_\_\_

2. \_\_\_\_\_

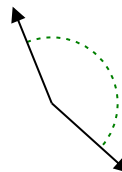
3)



4)



5)

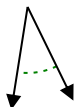


3. \_\_\_\_\_

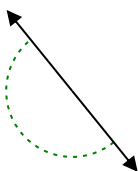
4. \_\_\_\_\_

5. \_\_\_\_\_

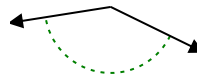
6)



7)



8)

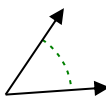


6. \_\_\_\_\_

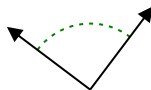
7. \_\_\_\_\_

8. \_\_\_\_\_

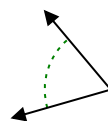
9)



10)



11)



9. \_\_\_\_\_

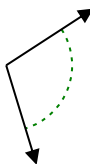
10. \_\_\_\_\_

11. \_\_\_\_\_

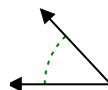
12)



13)



14)



12. \_\_\_\_\_

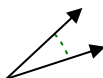
13. \_\_\_\_\_

14. \_\_\_\_\_

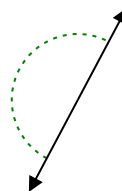
15)



16)



17)

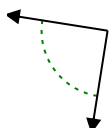


15. \_\_\_\_\_

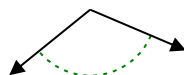
16. \_\_\_\_\_

17. \_\_\_\_\_

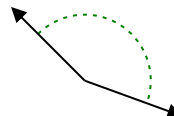
18)



19)



20)



18. \_\_\_\_\_

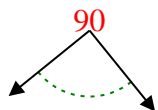
19. \_\_\_\_\_

20. \_\_\_\_\_

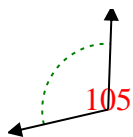


Determine if the angle shown is acute, obtuse, right or straight.

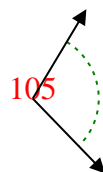
Ex)



1)



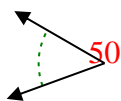
2)



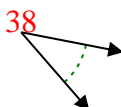
Answers

Ex. right

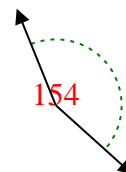
3)



4)



5)



1. obtuse

2. obtuse

3. acute

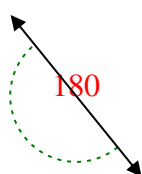
4. acute

5. obtuse

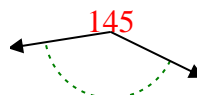
6)



7)



8)

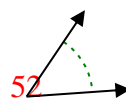


6. acute

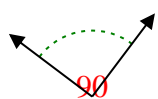
7. straight

8. obtuse

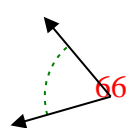
9)



10)



11)

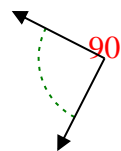


9. acute

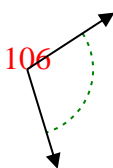
10. right

11. acute

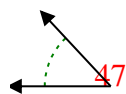
12)



13)



14)



12. right

13. obtuse

14. acute

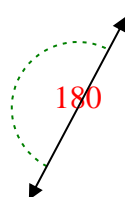
15)



16)



17)

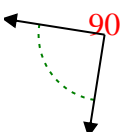


15. acute

16. acute

17. straight

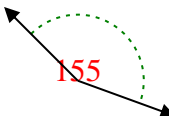
18)



19)



20)



18. right

19. obtuse

20. obtuse

1-10	95	90	85	80	75	70	65	60	55	50
11-20	45	40	35	30	25	20	15	10	5	0



Determine if the angle shown is acute, obtuse, right or straight.

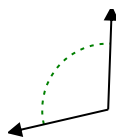
**Answers**

Ex)



Ex. **right**

1)



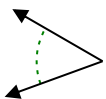
2)



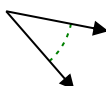
1. \_\_\_\_\_

2. \_\_\_\_\_

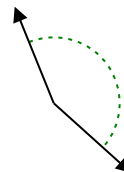
3)



4)



5)



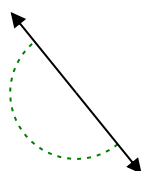
3. \_\_\_\_\_

4. \_\_\_\_\_

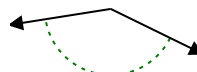
6)



7)



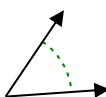
8)



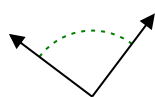
6. \_\_\_\_\_

7. \_\_\_\_\_

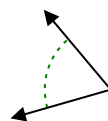
9)



10)



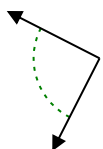
11)



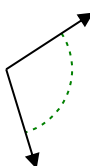
9. \_\_\_\_\_

10. \_\_\_\_\_

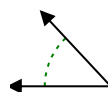
12)



13)




14)



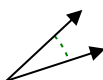
12. \_\_\_\_\_

13. \_\_\_\_\_

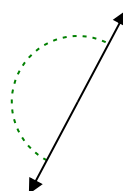
15)



16)



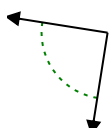
17)



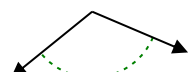
15. \_\_\_\_\_

16. \_\_\_\_\_

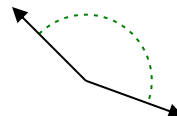
18)



19)



20)



18. \_\_\_\_\_

19. \_\_\_\_\_

20. \_\_\_\_\_