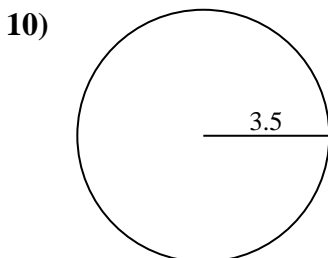
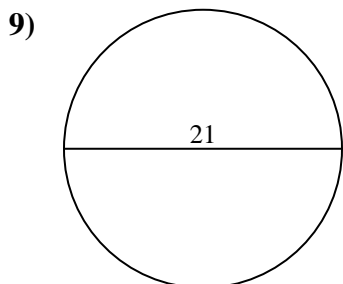
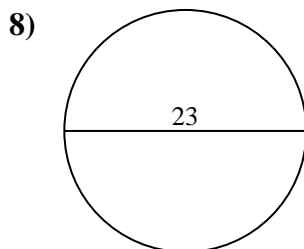
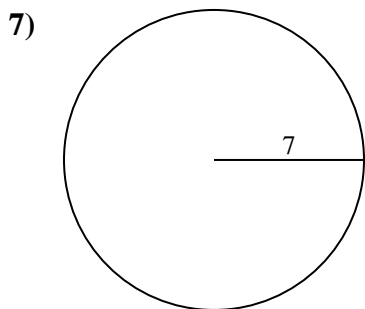
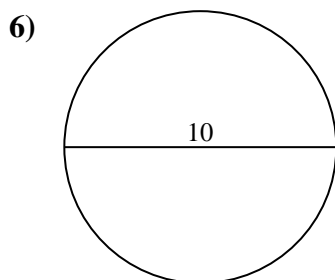
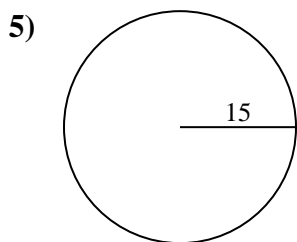
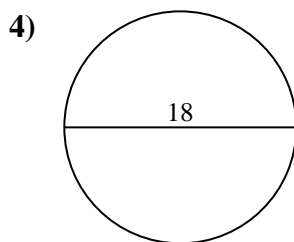
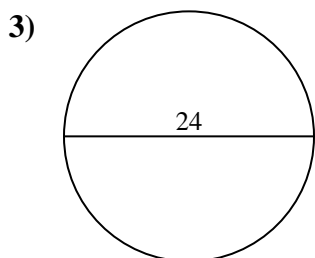
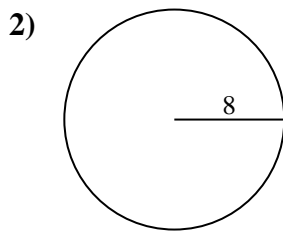
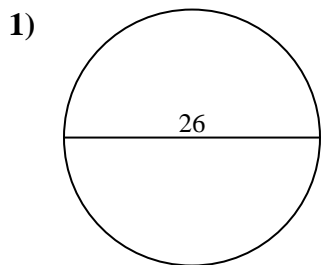




Find the area of the circle. Round to the nearest 10th.

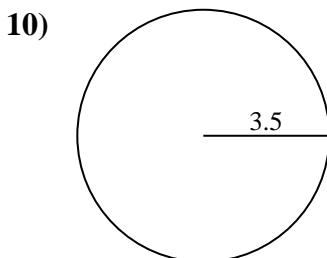
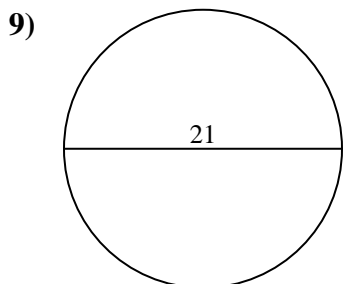
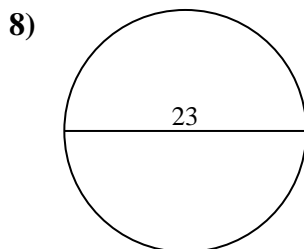
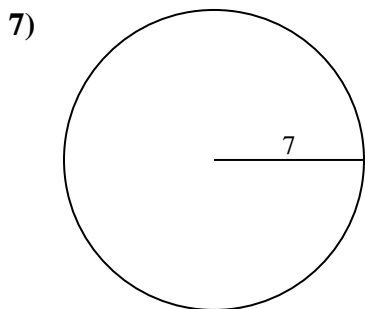
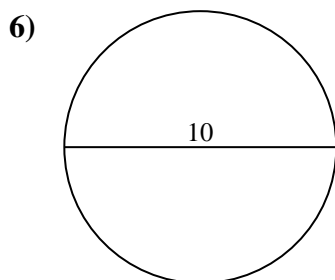
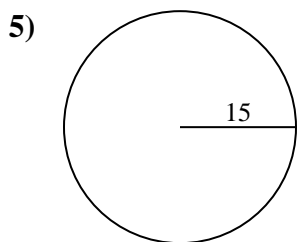
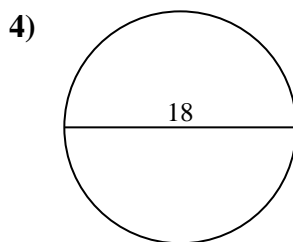
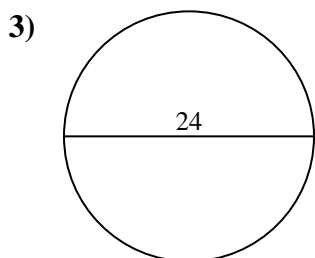
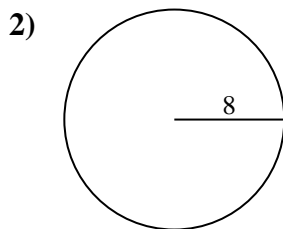
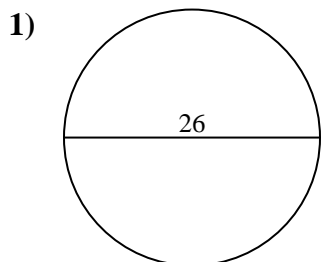
Answers



- 1. _____
- 2. _____
- 3. _____
- 4. _____
- 5. _____
- 6. _____
- 7. _____
- 8. _____
- 9. _____
- 10. _____



Find the area of the circle. Round to the nearest 10th.



Answers

- 1. 530.9
- 2. 201.1
- 3. 452.4
- 4. 254.5
- 5. 706.9
- 6. 78.5
- 7. 153.9
- 8. 415.5
- 9. 346.4
- 10. 38.5



Find the area of the circle. Round to the nearest 10th.

452.4

78.5

415.5

346.4

530.9

153.9

201.1

706.9

254.5

Answers

1. _____

2. _____

3. _____

4. _____

5. _____

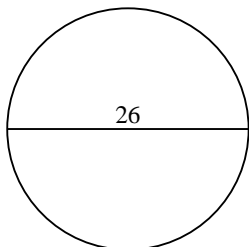
6. _____

7. _____

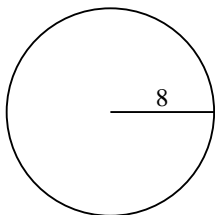
8. _____

9. _____

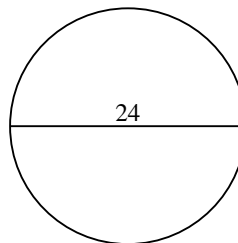
1)



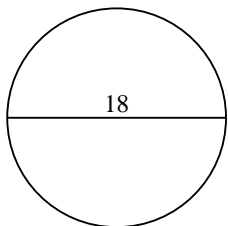
2)



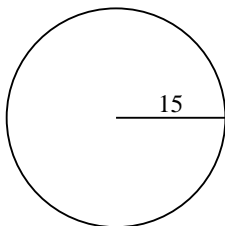
3)



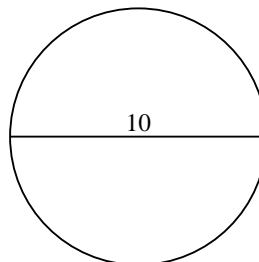
4)



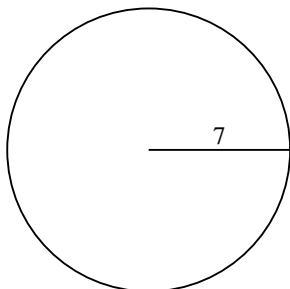
5)



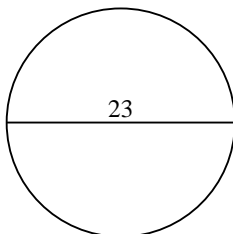
6)



7)



8)



9)

