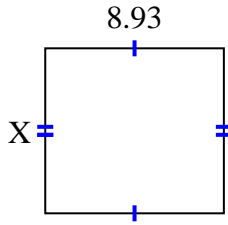


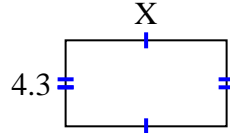


Find the value of X for each figure. Each figure is in centimeters (cm). Not to scale.

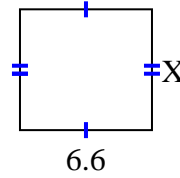
1) area =  $73.6725 \text{ cm}^2$



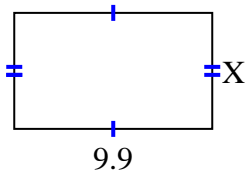
2) area =  $34.615 \text{ cm}^2$



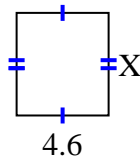
3) area =  $39.864 \text{ cm}^2$



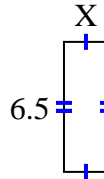
4) area =  $57.42 \text{ cm}^2$



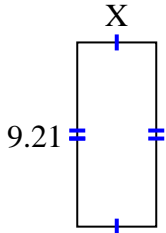
5) area =  $23.598 \text{ cm}^2$



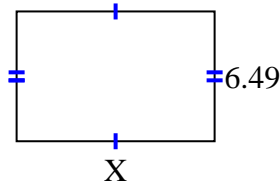
6) area =  $14.3 \text{ cm}^2$



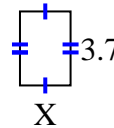
7) area =  $36.3795 \text{ cm}^2$



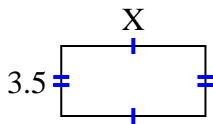
8) area =  $64.251 \text{ cm}^2$



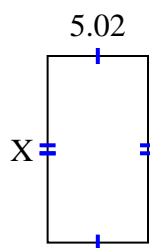
9) area =  $9.361 \text{ cm}^2$



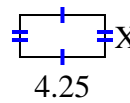
10) area =  $25.235 \text{ cm}^2$



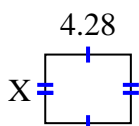
11) area =  $46.8366 \text{ cm}^2$



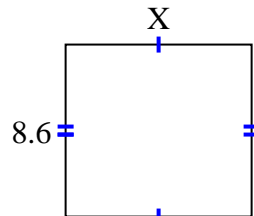
12) area =  $8.925 \text{ cm}^2$



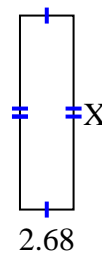
13) area =  $14.6804 \text{ cm}^2$



14) area =  $79.98 \text{ cm}^2$



15) area =  $25.996 \text{ cm}^2$



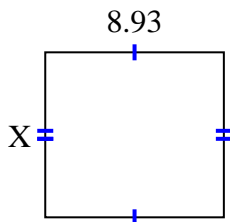
**Answers**

1. \_\_\_\_\_
2. \_\_\_\_\_
3. \_\_\_\_\_
4. \_\_\_\_\_
5. \_\_\_\_\_
6. \_\_\_\_\_
7. \_\_\_\_\_
8. \_\_\_\_\_
9. \_\_\_\_\_
10. \_\_\_\_\_
11. \_\_\_\_\_
12. \_\_\_\_\_
13. \_\_\_\_\_
14. \_\_\_\_\_
15. \_\_\_\_\_

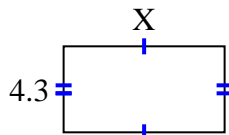


Find the value of X for each figure. Each figure is in centimeters (cm). Not to scale.

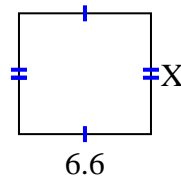
1) area =  $73.6725 \text{ cm}^2$



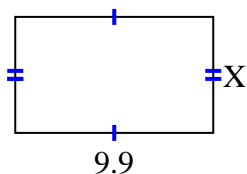
2) area =  $34.615 \text{ cm}^2$



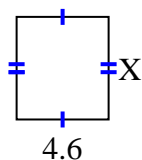
3) area =  $39.864 \text{ cm}^2$



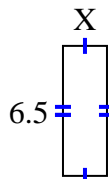
4) area =  $57.42 \text{ cm}^2$



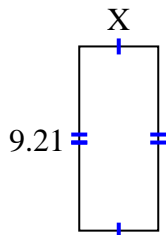
5) area =  $23.598 \text{ cm}^2$



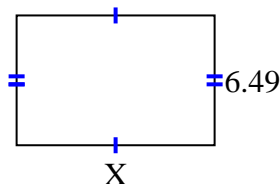
6) area =  $14.3 \text{ cm}^2$



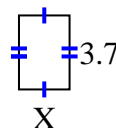
7) area =  $36.3795 \text{ cm}^2$



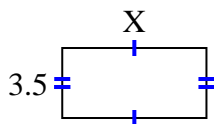
8) area =  $64.251 \text{ cm}^2$



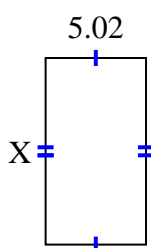
9) area =  $9.361 \text{ cm}^2$



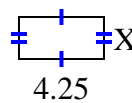
10) area =  $25.235 \text{ cm}^2$



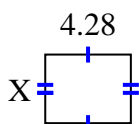
11) area =  $46.8366 \text{ cm}^2$



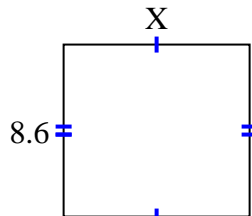
12) area =  $8.925 \text{ cm}^2$



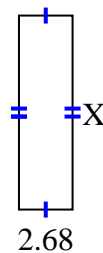
13) area =  $14.6804 \text{ cm}^2$



14) area =  $79.98 \text{ cm}^2$



15) area =  $25.996 \text{ cm}^2$



Answers

1. 8.25

2. 8.05

3. 6.04

4. 5.8

5. 5.13

6. 2.2

7. 3.95

8. 9.9

9. 2.53

10. 7.21

11. 9.33

12. 2.1

13. 3.43

14. 9.3

15. 9.7