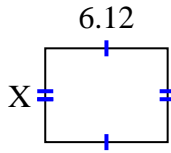


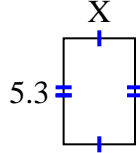


Find the value of X for each figure. Each figure is in centimeters (cm). Not to scale.

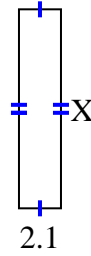
1) area = 28.7028 cm^2



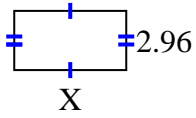
2) area = 18.921 cm^2



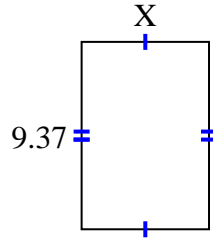
3) area = 20.895 cm^2



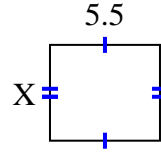
4) area = 16.576 cm^2



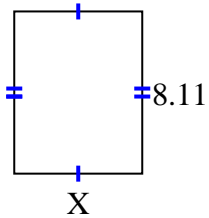
5) area = 59.6869 cm^2



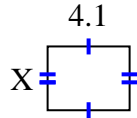
6) area = 26.345 cm^2



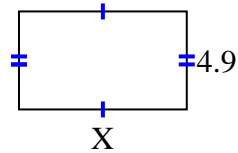
7) area = 51.904 cm^2



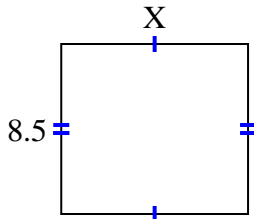
8) area = 13.079 cm^2



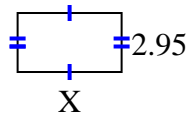
9) area = 41.111 cm^2



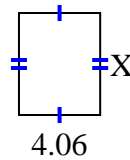
10) area = 79.39 cm^2



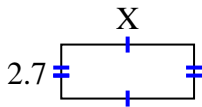
11) area = 15.34 cm^2



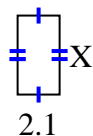
12) area = 20.706 cm^2



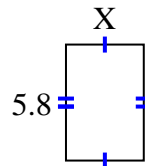
13) area = 17.928 cm^2



14) area = 8.295 cm^2



15) area = 22.562 cm^2



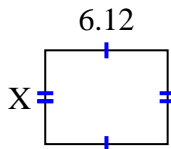
Answers

1. _____
2. _____
3. _____
4. _____
5. _____
6. _____
7. _____
8. _____
9. _____
10. _____
11. _____
12. _____
13. _____
14. _____
15. _____

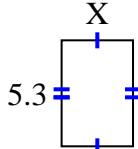


Find the value of X for each figure. Each figure is in centimeters (cm). Not to scale.

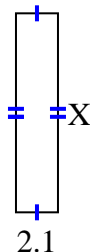
1) area = 28.7028 cm^2



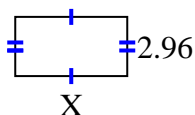
2) area = 18.921 cm^2



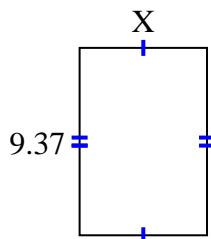
3) area = 20.895 cm^2



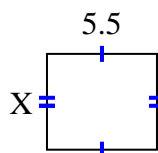
4) area = 16.576 cm^2



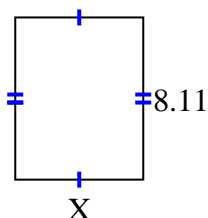
5) area = 59.6869 cm^2



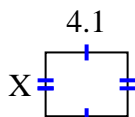
6) area = 26.345 cm^2



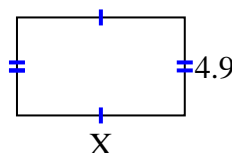
7) area = 51.904 cm^2



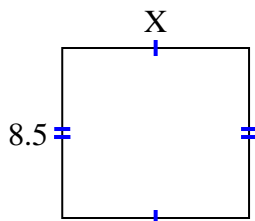
8) area = 13.079 cm^2



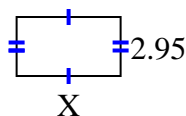
9) area = 41.111 cm^2



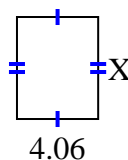
10) area = 79.39 cm^2



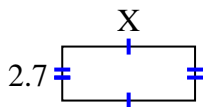
11) area = 15.34 cm^2



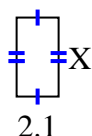
12) area = 20.706 cm^2



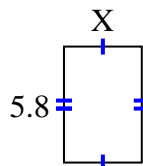
13) area = 17.928 cm^2



14) area = 8.295 cm^2



15) area = 22.562 cm^2



Answers

1. 4.69

2. 3.57

3. 9.95

4. 5.6

5. 6.37

6. 4.79

7. 6.4

8. 3.19

9. 8.39

10. 9.34

11. 5.2

12. 5.1

13. 6.64

14. 3.95

15. 3.89