

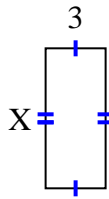


Find the value of X for each figure. Each figure is in centimeters (cm). Not to scale.

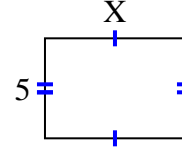
1) area = 4 cm^2



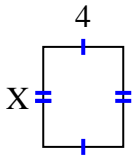
2) area = 21 cm^2



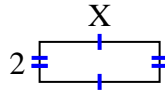
3) area = 35 cm^2



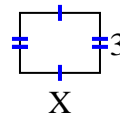
4) area = 20 cm^2



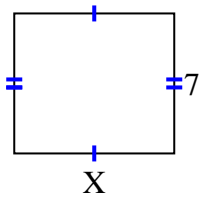
5) area = 12 cm^2



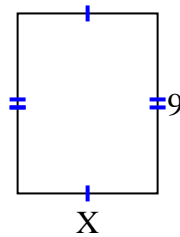
6) area = 12 cm^2



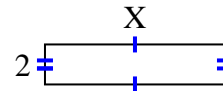
7) area = 56 cm^2



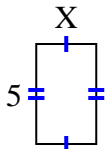
8) area = 63 cm^2



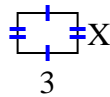
9) area = 18 cm^2



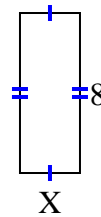
10) area = 15 cm^2



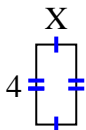
11) area = 6 cm^2



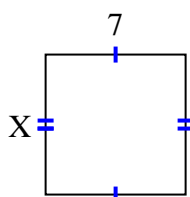
12) area = 24 cm^2



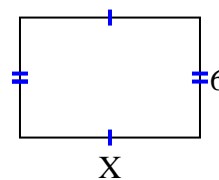
13) area = 8 cm^2



14) area = 49 cm^2



15) area = 54 cm^2



Answers

1. _____
2. _____
3. _____
4. _____
5. _____
6. _____
7. _____
8. _____
9. _____
10. _____
11. _____
12. _____
13. _____
14. _____
15. _____

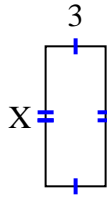


Find the value of X for each figure. Each figure is in centimeters (cm). Not to scale.

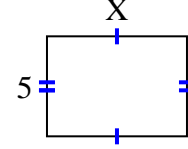
1) area = 4 cm^2



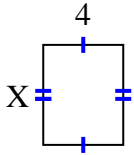
2) area = 21 cm^2



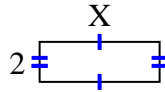
3) area = 35 cm^2



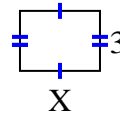
4) area = 20 cm^2



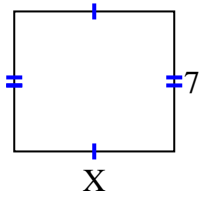
5) area = 12 cm^2



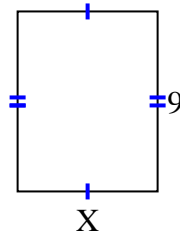
6) area = 12 cm^2



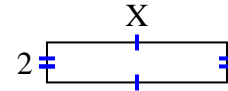
7) area = 56 cm^2



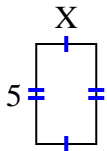
8) area = 63 cm^2



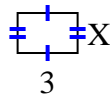
9) area = 18 cm^2



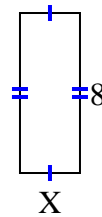
10) area = 15 cm^2



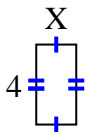
11) area = 6 cm^2



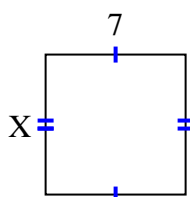
12) area = 24 cm^2



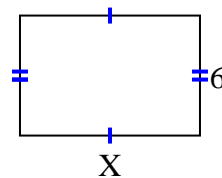
13) area = 8 cm^2



14) area = 49 cm^2



15) area = 54 cm^2



Answers

1. 2
2. 7
3. 7
4. 5
5. 6
6. 4
7. 8
8. 7
9. 9
10. 3
11. 2
12. 3
13. 2
14. 7
15. 9

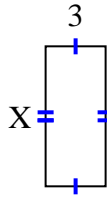


Find the value of X for each figure. Each figure is in centimeters (cm). Not to scale.

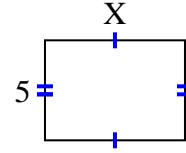
1) area = 4 cm^2



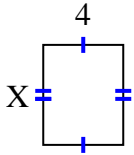
2) area = 21 cm^2



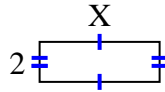
3) area = 35 cm^2



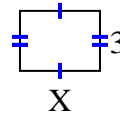
4) area = 20 cm^2



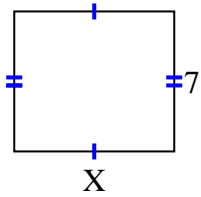
5) area = 12 cm^2



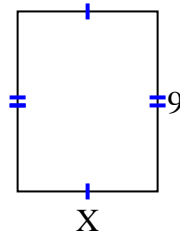
6) area = 12 cm^2



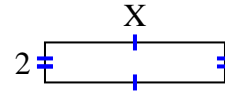
7) area = 56 cm^2



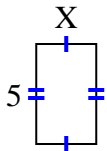
8) area = 63 cm^2



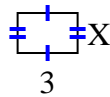
9) area = 18 cm^2



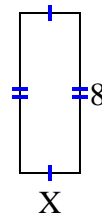
10) area = 15 cm^2



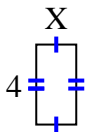
11) area = 6 cm^2



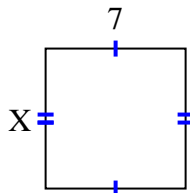
12) area = 24 cm^2



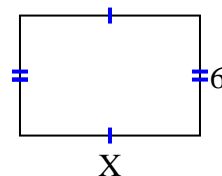
13) area = 8 cm^2



14) area = 49 cm^2



15) area = 54 cm^2



Answers

1. _____
2. _____
3. _____
4. _____
5. _____
6. _____
7. _____
8. _____
9. _____
10. _____
11. _____
12. _____
13. _____
14. _____
15. _____