

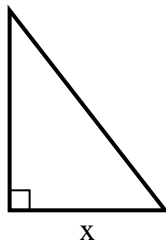


Find the value of X.

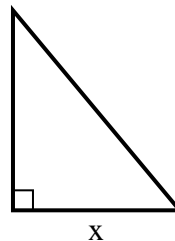
1) area =  $9 u^2$



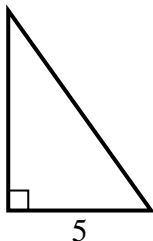
2) area =  $31.5 u^2$



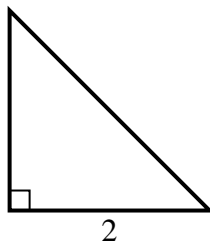
3) area =  $15 u^2$



4) area =  $17.5 u^2$



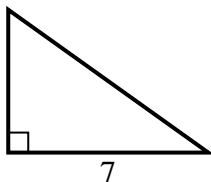
5) area =  $2 u^2$



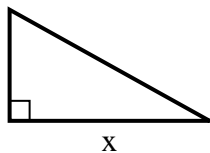
6) area =  $10.5 u^2$



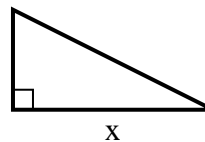
7) area =  $17.5 u^2$



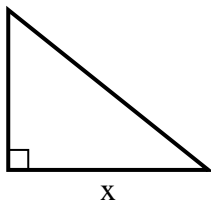
8) area =  $22.5 u^2$



9) area =  $4 u^2$



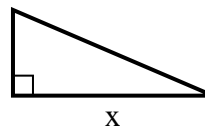
10) area =  $10 u^2$



11) area =  $7 u^2$



12) area =  $10.5 u^2$



**Answers**

1. \_\_\_\_\_
2. \_\_\_\_\_
3. \_\_\_\_\_
4. \_\_\_\_\_
5. \_\_\_\_\_
6. \_\_\_\_\_
7. \_\_\_\_\_
8. \_\_\_\_\_
9. \_\_\_\_\_
10. \_\_\_\_\_
11. \_\_\_\_\_
12. \_\_\_\_\_

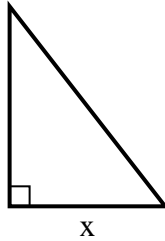


Find the value of X.

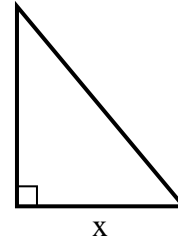
1) area =  $9 u^2$



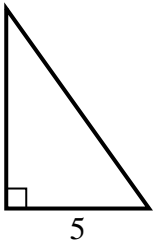
2) area =  $31.5 u^2$



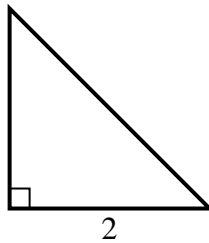
3) area =  $15 u^2$



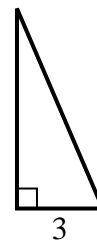
4) area =  $17.5 u^2$



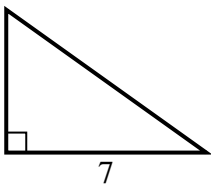
5) area =  $2 u^2$



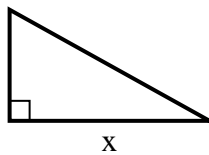
6) area =  $10.5 u^2$



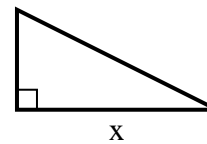
7) area =  $17.5 u^2$



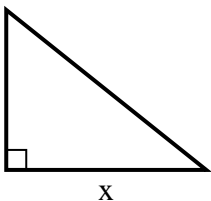
8) area =  $22.5 u^2$



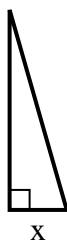
9) area =  $4 u^2$



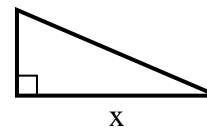
10) area =  $10 u^2$



11) area =  $7 u^2$



12) area =  $10.5 u^2$



Answers

1. 9

2. 7

3. 5

4. 7

5. 2

6. 7

7. 5

8. 9

9. 4

10. 5

11. 2

12. 7

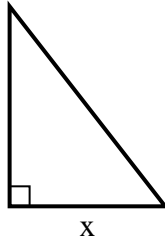


Find the value of X.

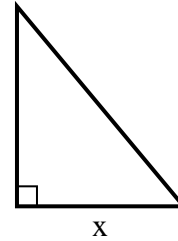
1) area =  $9 u^2$



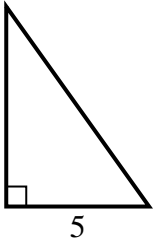
2) area =  $31.5 u^2$



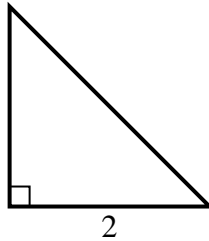
3) area =  $15 u^2$



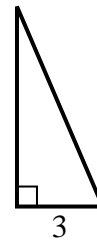
4) area =  $17.5 u^2$



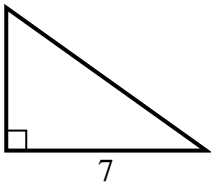
5) area =  $2 u^2$



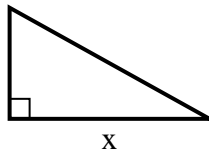
6) area =  $10.5 u^2$



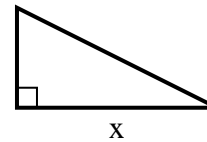
7) area =  $17.5 u^2$



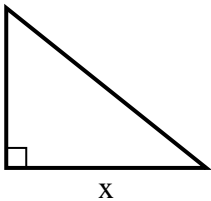
8) area =  $22.5 u^2$



9) area =  $4 u^2$



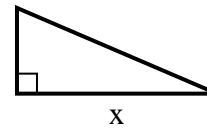
10) area =  $10 u^2$



11) area =  $7 u^2$



12) area =  $10.5 u^2$



**Answers**

1. \_\_\_\_\_
2. \_\_\_\_\_
3. \_\_\_\_\_
4. \_\_\_\_\_
5. \_\_\_\_\_
6. \_\_\_\_\_
7. \_\_\_\_\_
8. \_\_\_\_\_
9. \_\_\_\_\_
10. \_\_\_\_\_
11. \_\_\_\_\_
12. \_\_\_\_\_