


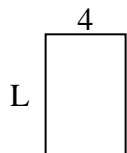


Determine the value of 'L'.

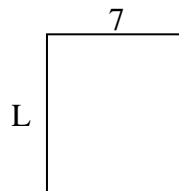
1) Area =  $30u^2$



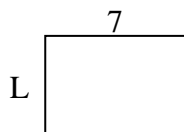
2) Area =  $24u^2$



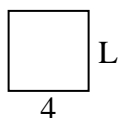
3) Area =  $56u^2$



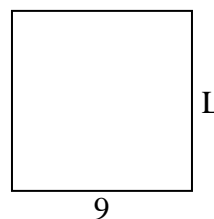
4) Area =  $35u^2$



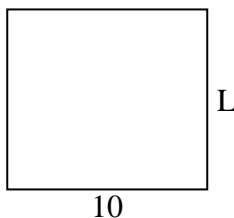
5) Area =  $16u^2$



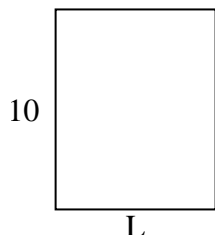
6) Area =  $81u^2$



7) Area =  $90u^2$




8) Area =  $80u^2$



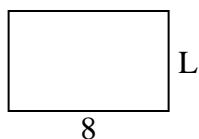
9) Area =  $27u^2$



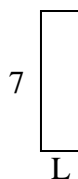
10) Area =  $32u^2$



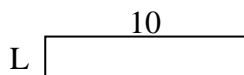
11) Area =  $40u^2$



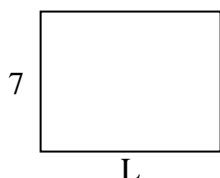
12) Area =  $14u^2$



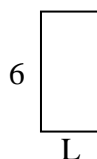
13) Area =  $20u^2$



14) Area =  $63u^2$



15) Area =  $18u^2$



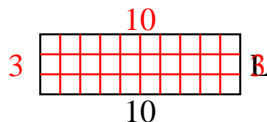
**Answers**

1. \_\_\_\_\_
2. \_\_\_\_\_
3. \_\_\_\_\_
4. \_\_\_\_\_
5. \_\_\_\_\_
6. \_\_\_\_\_
7. \_\_\_\_\_
8. \_\_\_\_\_
9. \_\_\_\_\_
10. \_\_\_\_\_
11. \_\_\_\_\_
12. \_\_\_\_\_
13. \_\_\_\_\_
14. \_\_\_\_\_
15. \_\_\_\_\_

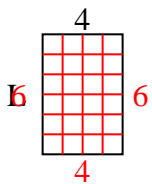


Determine the value of 'L'.

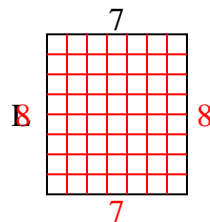
1) Area =  $30u^2$



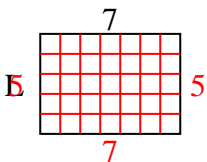
2) Area =  $24u^2$



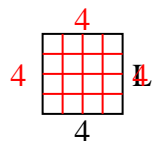
3) Area =  $56u^2$



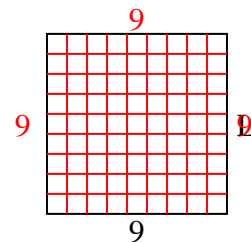
4) Area =  $35u^2$



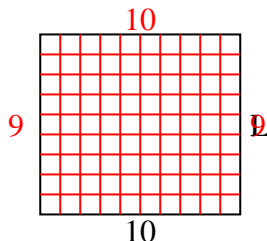
5) Area =  $16u^2$



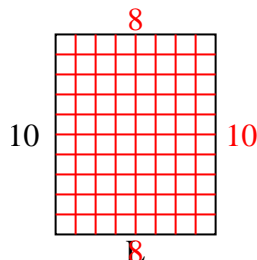
6) Area =  $81u^2$



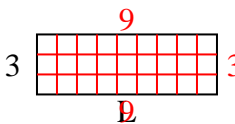
7) Area =  $90u^2$



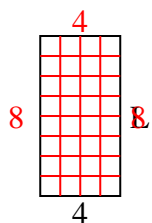
8) Area =  $80u^2$



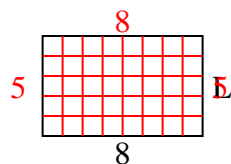
9) Area =  $27u^2$



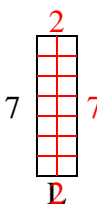
10) Area =  $32u^2$



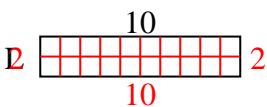
11) Area =  $40u^2$



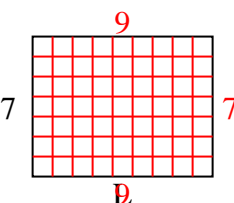
12) Area =  $14u^2$



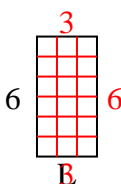
13) Area =  $20u^2$



14) Area =  $63u^2$



15) Area =  $18u^2$



Answers

1. 3

2. 6

3. 8

4. 5

5. 4

6. 9

7. 9

8. 8

9. 9

10. 8

11. 5

12. 2

13. 2

14. 9

15. 3