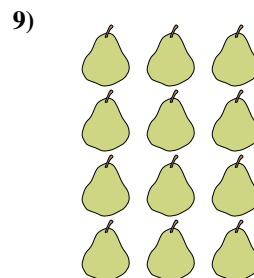

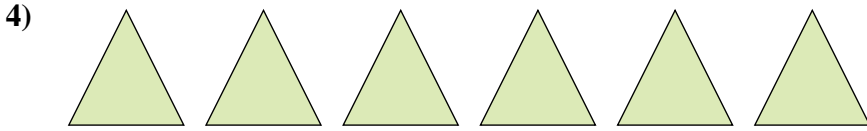
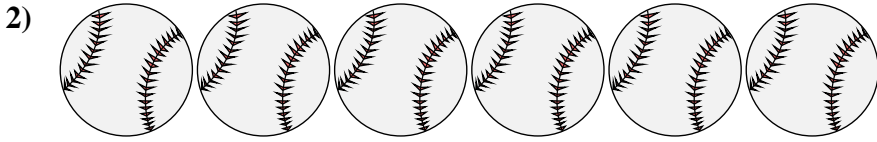




Count the amount of each of the different objects.




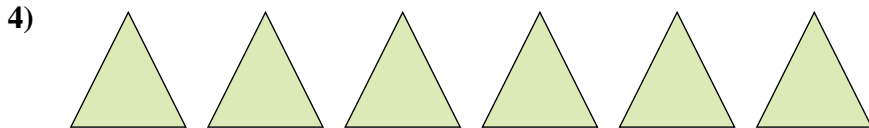
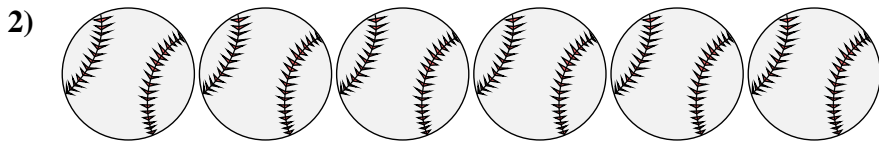


Answers

- 1. _____
- 2. _____
- 3. _____
- 4. _____
- 5. _____
- 6. _____
- 7. _____
- 8. _____
- 9. _____



Count the amount of each of the different objects.



Answers

1. 20

2. 6

3. 5

4. 6

5. 16

6. 4

7. 8

8. 4

9. 12