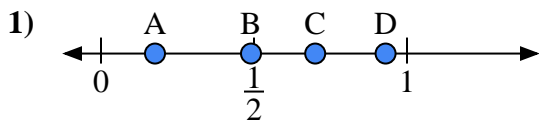


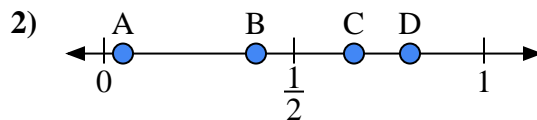


Use the number lines to answer the questions.

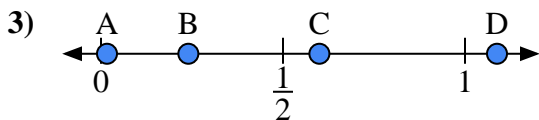
Answers



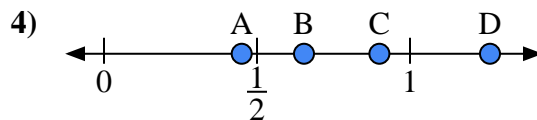
- a) Which letter best represents the location of 0.7?
- b) Which letter best represents the location of 0.93?



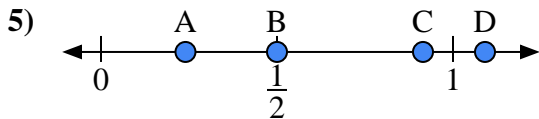
- a) Which letter best represents the location of 0.40?
- b) Which letter best represents the location of 0.05?



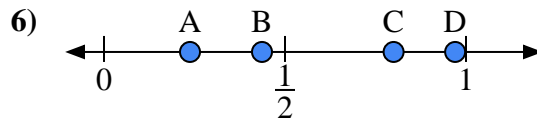
- a) Which letter best represents the location of 0.60?
- b) Which letter best represents the location of 0.24?



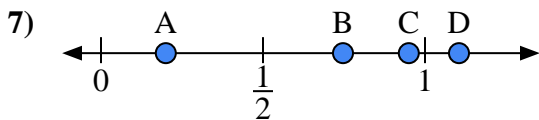
- a) Which letter best represents the location of 0.90?
- b) Which letter best represents the location of 0.45?



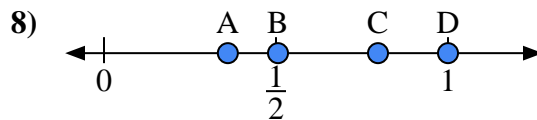
- a) Which letter best represents the location of 0.50?
- b) Which letter best represents the location of 0.24?



- a) Which letter best represents the location of 0.80?
- b) Which letter best represents the location of 0.97?



- a) Which letter best represents the location of 0.20?
- b) Which letter best represents the location of 0.95?



- a) Which letter best represents the location of 1.0?
- b) Which letter best represents the location of 0.36?

1a. _____

1b. _____

2a. _____

2b. _____

3a. _____

3b. _____

4a. _____

4b. _____

5a. _____

5b. _____

6a. _____

6b. _____

7a. _____

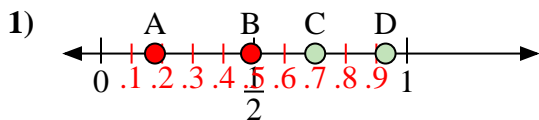
7b. _____

8a. _____

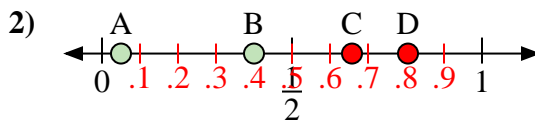
8b. _____



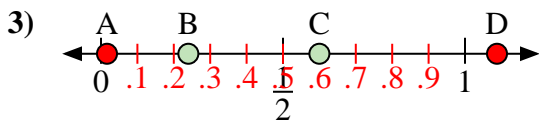
Use the number lines to answer the questions.



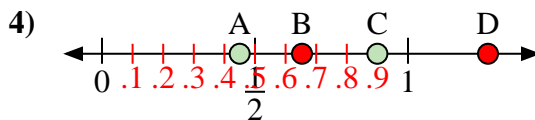
- a) Which letter best represents the location of 0.7?
- b) Which letter best represents the location of 0.93?



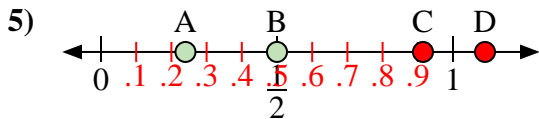
- a) Which letter best represents the location of 0.40?
- b) Which letter best represents the location of 0.05?



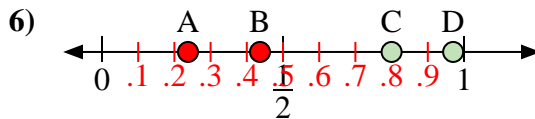
- a) Which letter best represents the location of 0.60?
- b) Which letter best represents the location of 0.24?



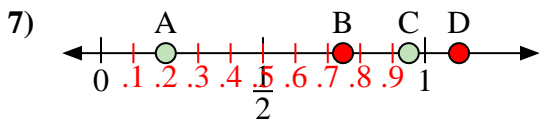
- a) Which letter best represents the location of 0.90?
- b) Which letter best represents the location of 0.45?



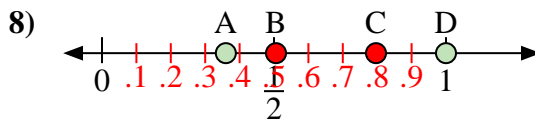
- a) Which letter best represents the location of 0.50?
- b) Which letter best represents the location of 0.24?



- a) Which letter best represents the location of 0.80?
- b) Which letter best represents the location of 0.97?



- a) Which letter best represents the location of 0.20?
- b) Which letter best represents the location of 0.95?



- a) Which letter best represents the location of 1.0?
- b) Which letter best represents the location of 0.36?

Answers

1a. **C**

1b. **D**

2a. **B**

2b. **A**

3a. **C**

3b. **B**

4a. **C**

4b. **A**

5a. **B**

5b. **A**

6a. **C**

6b. **D**

7a. **A**

7b. **C**

8a. **D**

8b. **A**