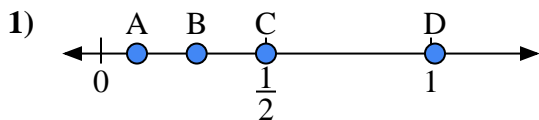


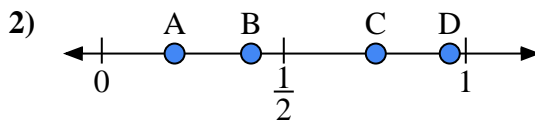


Use the number lines to answer the questions.

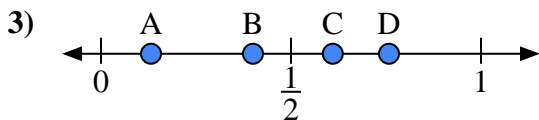
**Answers**



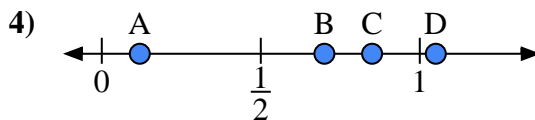
- a) Which letter best represents the location of 0.5?
- b) Which letter best represents the location of 0.29?



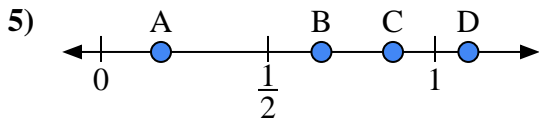
- a) Which letter best represents the location of 0.20?
- b) Which letter best represents the location of 0.41?



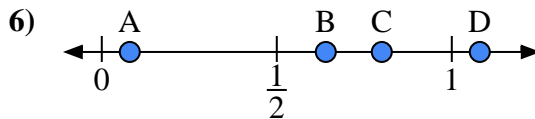
- a) Which letter best represents the location of 0.40?
- b) Which letter best represents the location of 0.61?



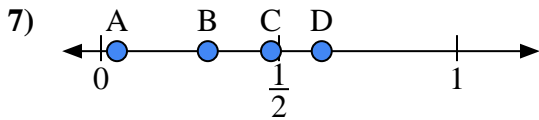
- a) Which letter best represents the location of 0.70?
- b) Which letter best represents the location of 0.85?



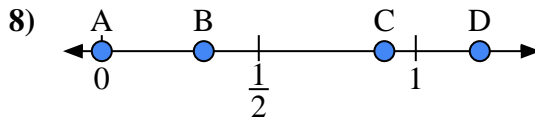
- a) Which letter best represents the location of 1.1?
- b) Which letter best represents the location of 0.66?



- a) Which letter best represents the location of 0.8?
- b) Which letter best represents the location of 0.08?



- a) Which letter best represents the location of 0.30?
- b) Which letter best represents the location of 0.62?



- a) Which letter best represents the location of 0.00?
- b) Which letter best represents the location of 0.90?

1a. \_\_\_\_\_

1b. \_\_\_\_\_

2a. \_\_\_\_\_

2b. \_\_\_\_\_

3a. \_\_\_\_\_

3b. \_\_\_\_\_

4a. \_\_\_\_\_

4b. \_\_\_\_\_

5a. \_\_\_\_\_

5b. \_\_\_\_\_

6a. \_\_\_\_\_

6b. \_\_\_\_\_

7a. \_\_\_\_\_

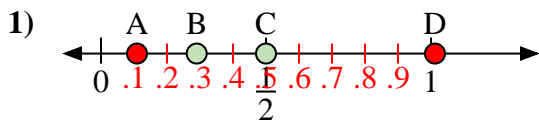
7b. \_\_\_\_\_

8a. \_\_\_\_\_

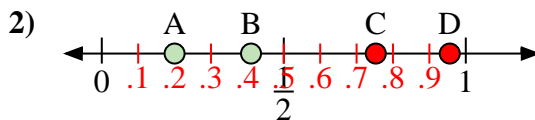
8b. \_\_\_\_\_



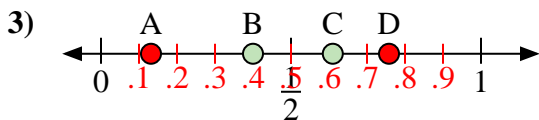
Use the number lines to answer the questions.



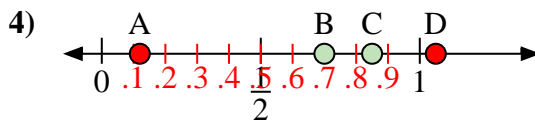
- a) Which letter best represents the location of 0.5?
- b) Which letter best represents the location of 0.29?



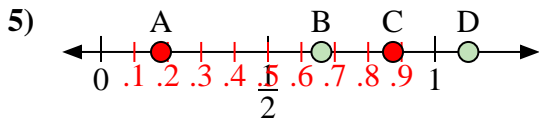
- a) Which letter best represents the location of 0.20?
- b) Which letter best represents the location of 0.41?



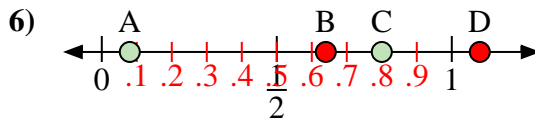
- a) Which letter best represents the location of 0.40?
- b) Which letter best represents the location of 0.61?



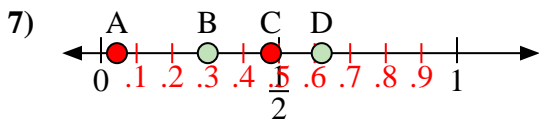
- a) Which letter best represents the location of 0.70?
- b) Which letter best represents the location of 0.85?



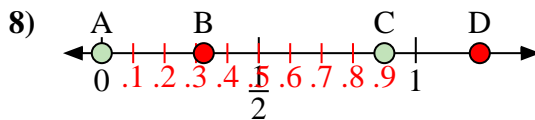
- a) Which letter best represents the location of 1.1?
- b) Which letter best represents the location of 0.66?



- a) Which letter best represents the location of 0.8?
- b) Which letter best represents the location of 0.08?



- a) Which letter best represents the location of 0.30?
- b) Which letter best represents the location of 0.62?



- a) Which letter best represents the location of 0.00?
- b) Which letter best represents the location of 0.90?

**Answers**

1a. **C**

1b. **B**

2a. **A**

2b. **B**

3a. **B**

3b. **C**

4a. **B**

4b. **C**

5a. **D**

5b. **B**

6a. **C**

6b. **A**

7a. **B**

7b. **D**

8a. **A**

8b. **C**