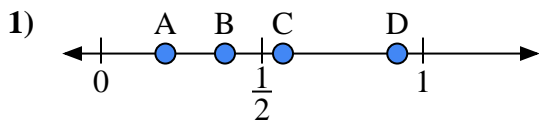


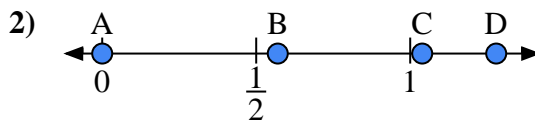


Use the number lines to answer the questions.

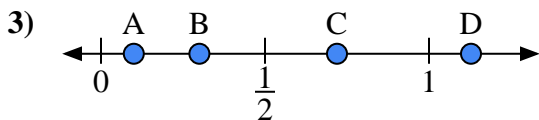
Answers



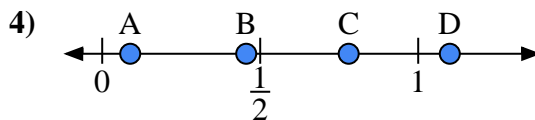
- a) Which letter best represents the location of 0.2?
- b) Which letter best represents the location of 0.92?



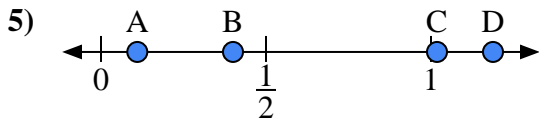
- a) Which letter best represents the location of 0.00?
- b) Which letter best represents the location of 0.57?



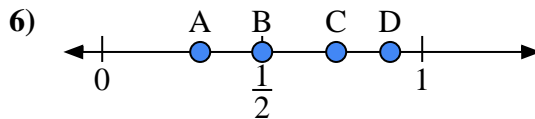
- a) Which letter best represents the location of 0.30?
- b) Which letter best represents the location of 0.10?



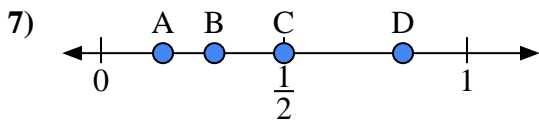
- a) Which letter best represents the location of 1.1?
- b) Which letter best represents the location of 0.78?



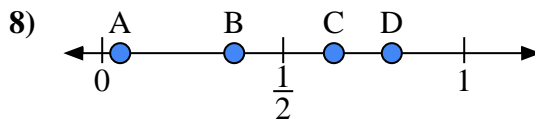
- a) Which letter best represents the location of 0.40?
- b) Which letter best represents the location of 0.11?



- a) Which letter best represents the location of 0.9?
- b) Which letter best represents the location of 0.50?



- a) Which letter best represents the location of 0.5?
- b) Which letter best represents the location of 0.31?



- a) Which letter best represents the location of 0.8?
- b) Which letter best represents the location of 0.64?

1a. _____

1b. _____

2a. _____

2b. _____

3a. _____

3b. _____

4a. _____

4b. _____

5a. _____

5b. _____

6a. _____

6b. _____

7a. _____

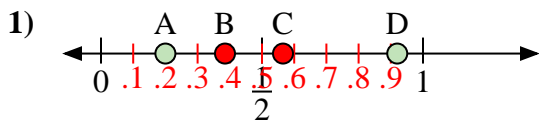
7b. _____

8a. _____

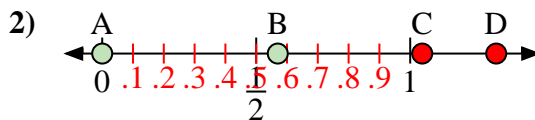
8b. _____



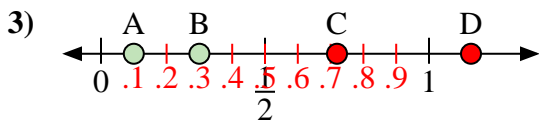
Use the number lines to answer the questions.



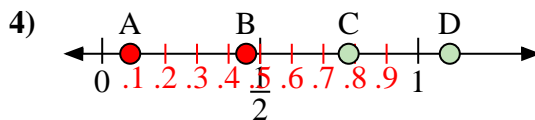
- a) Which letter best represents the location of 0.2?
- b) Which letter best represents the location of 0.92?



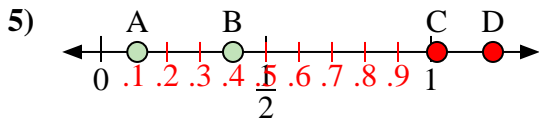
- a) Which letter best represents the location of 0.00?
- b) Which letter best represents the location of 0.57?



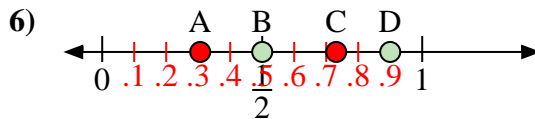
- a) Which letter best represents the location of 0.30?
- b) Which letter best represents the location of 0.10?



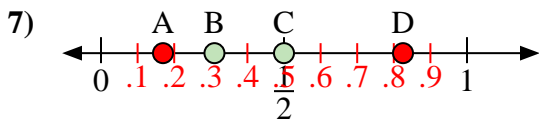
- a) Which letter best represents the location of 1.1?
- b) Which letter best represents the location of 0.78?



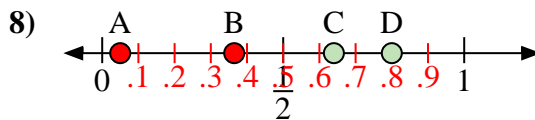
- a) Which letter best represents the location of 0.40?
- b) Which letter best represents the location of 0.11?



- a) Which letter best represents the location of 0.9?
- b) Which letter best represents the location of 0.50?



- a) Which letter best represents the location of 0.5?
- b) Which letter best represents the location of 0.31?



- a) Which letter best represents the location of 0.8?
- b) Which letter best represents the location of 0.64?

Answers

1a. **A**

1b. **D**

2a. **A**

2b. **B**

3a. **B**

3b. **A**

4a. **D**

4b. **C**

5a. **B**

5b. **A**

6a. **D**

6b. **B**

7a. **C**

7b. **B**

8a. **D**

8b. **C**