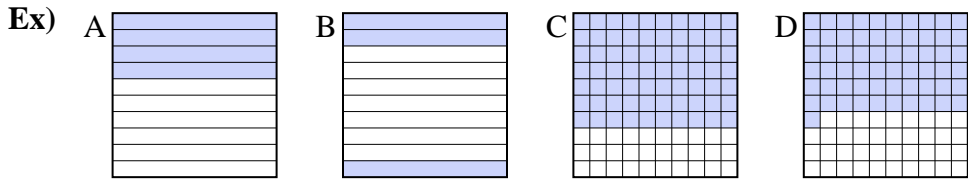




Put the boxes in order from least to greatest based on the shaded amount.

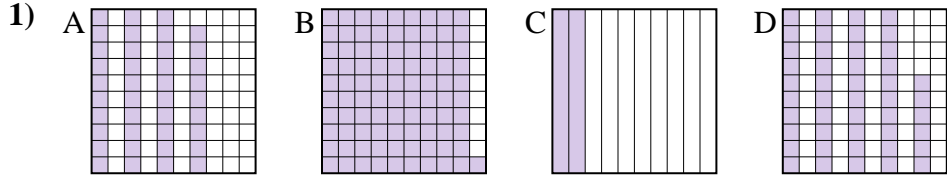
Answers



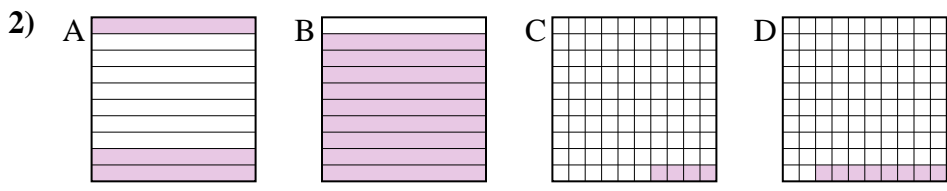
small 0.3 - B
0.4 - A
0.61 - D
 large 0.7 - C

Ex. B,A,D,C

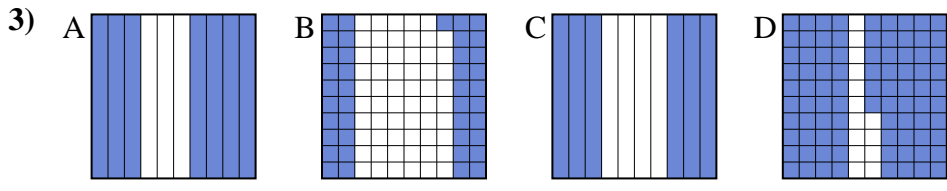
1. _____
2. _____
3. _____
4. _____
5. _____
6. _____
7. _____
8. _____



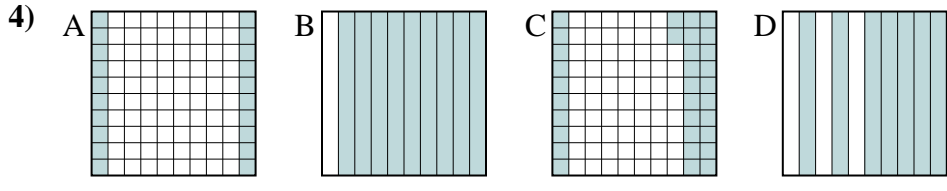
small _____
 large _____



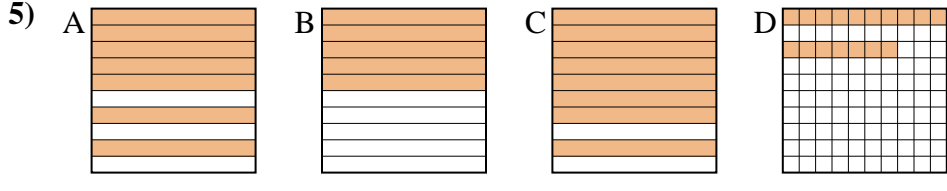
small _____
 large _____



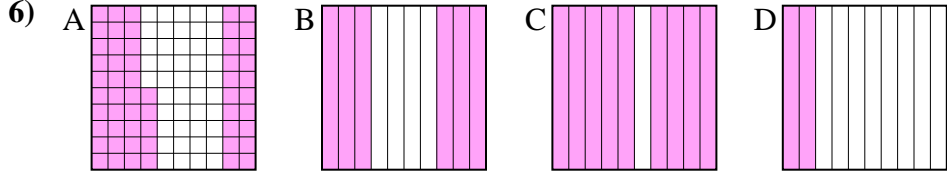
small _____
 large _____



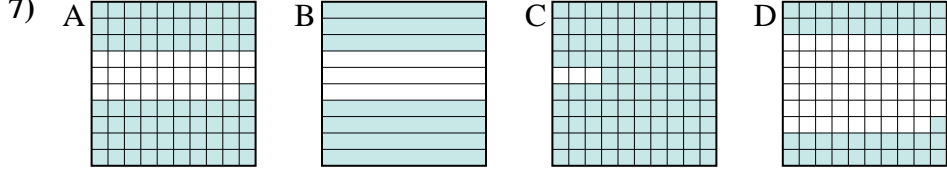
small _____
 large _____



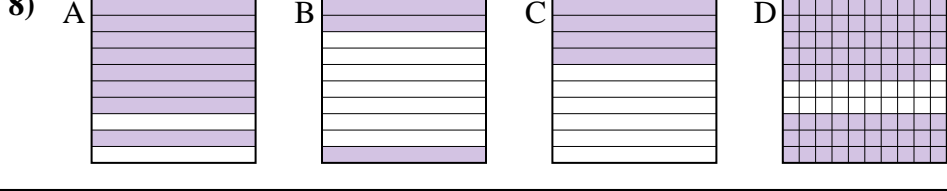
small _____
 large _____



small _____
 large _____



small _____
 large _____



small _____
 large _____



Put the boxes in order from least to greatest based on the shaded amount.

Ex) A B C D small 0.3 - B
0.4 - A
0.61 - D
large 0.7 - C

1) A B C D small 0.2 - C
0.39 - A
0.46 - D
large 0.91 - B

2) A B C D small 0.04 - C
0.08 - D
0.3 - A
large 0.9 - B

3) A B C D small 0.41 - B
0.6 - C
0.7 - A
large 0.86 - D

4) A B C D small 0.2 - A
0.32 - C
0.7 - D
large 0.9 - B

5) A B C D small 0.17 - D
0.5 - B
0.7 - A
large 0.8 - C

6) A B C D small 0.2 - D
0.55 - A
0.6 - B
large 0.9 - C

7) A B C D small 0.41 - D
0.7 - B
0.71 - A
large 0.97 - C

8) A B C D small 0.3 - B
0.4 - C
0.79 - D
large 0.8 - A

Answers

Ex. B,A,D,C

1. C,A,D,B

2. C,D,A,B

3. B,C,A,D

4. A,C,D,B

5. D,B,A,C

6. D,A,B,C

7. D,B,A,C

8. B,C,D,A