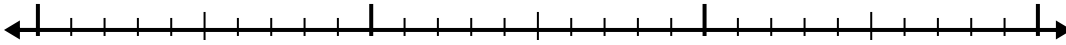




Use the number line to solve each problem.

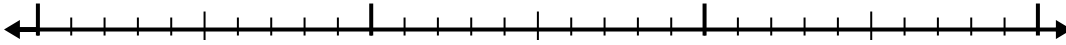
1) $10 - 1.5 =$



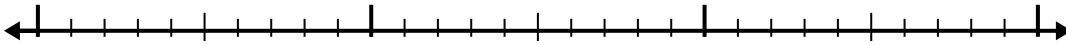
2) $5.4 - 2.2 =$



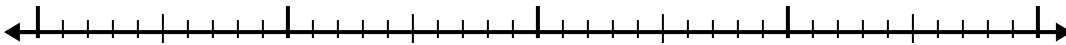
3) $2.9 - 1.5 =$



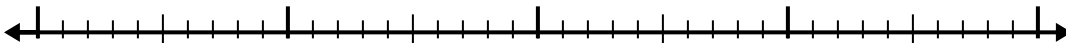
4) $3.1 - 1.1 =$




5) $9.8 - 2.2 =$



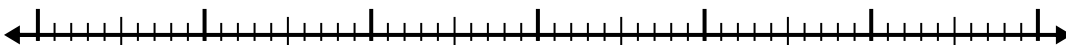
6) $9.5 - 1.8 =$



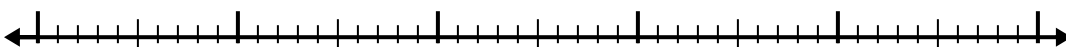
7) $7.5 - 3.8 =$



8) $4.9 - 3.1 =$



9) $3.5 - 2.1 =$



10) $7.9 - 2.7 =$



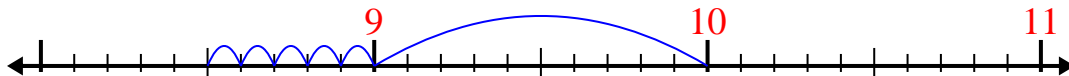
Answers

- 1. _____
- 2. _____
- 3. _____
- 4. _____
- 5. _____
- 6. _____
- 7. _____
- 8. _____
- 9. _____
- 10. _____

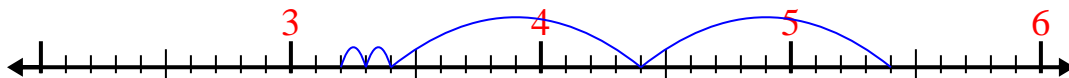


Use the number line to solve each problem.

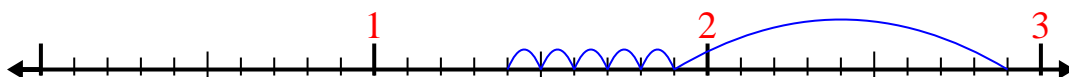
1) $10 - 1.5 =$



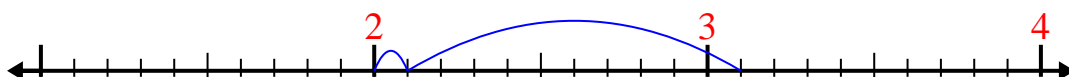
2) $5.4 - 2.2 =$



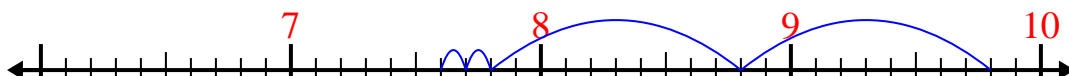
3) $2.9 - 1.5 =$



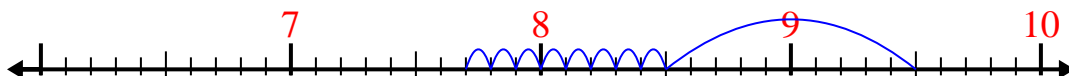
4) $3.1 - 1.1 =$



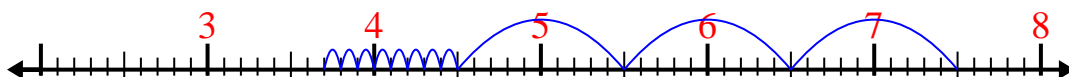
5) $9.8 - 2.2 =$



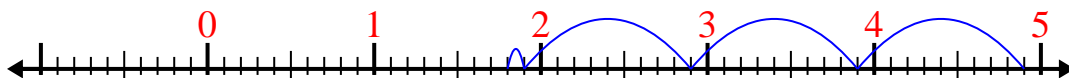
6) $9.5 - 1.8 =$



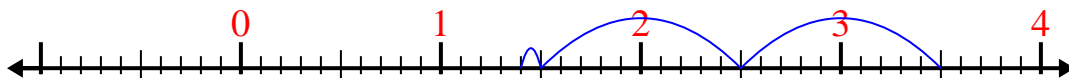
7) $7.5 - 3.8 =$



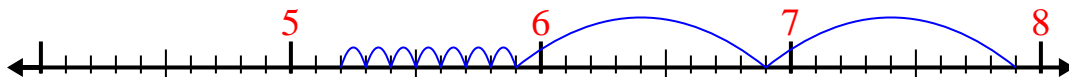
8) $4.9 - 3.1 =$



9) $3.5 - 2.1 =$



10) $7.9 - 2.7 =$

Answers1. 8.52. 3.23. 1.44. 25. 7.66. 7.77. 3.78. 1.89. 1.410. 5.2