



Solve each problem by marking off the fractions. The first is completed for you.

Answers

Ex) $6 \div \frac{1}{6} = ?$ This is the same as saying: How many $\frac{1}{6}$ are there in 6 wholes?

Ex. **36**

1 Whole	1 Whole	1 Whole	1 Whole	1 Whole	1 Whole
<input checked="" type="checkbox"/>	<input checked="" type="checkbox"/>	<input checked="" type="checkbox"/>	<input checked="" type="checkbox"/>	<input checked="" type="checkbox"/>	<input checked="" type="checkbox"/>

1. _____

1) $3 \div \frac{1}{6} =$

2. _____

1 Whole	1 Whole	1 Whole
<input type="checkbox"/>	<input type="checkbox"/>	<input type="checkbox"/>

3. _____

2) $6 \div \frac{1}{4} =$

4. _____

1 Whole	1 Whole	1 Whole	1 Whole	1 Whole	1 Whole
<input type="checkbox"/>	<input type="checkbox"/>	<input type="checkbox"/>	<input type="checkbox"/>	<input type="checkbox"/>	<input type="checkbox"/>

5. _____

3) $4 \div \frac{1}{2} =$

6. _____

1 Whole	1 Whole	1 Whole	1 Whole
<input type="checkbox"/>	<input type="checkbox"/>	<input type="checkbox"/>	<input type="checkbox"/>

7. _____

4) $2 \div \frac{1}{5} =$

8. _____

1 Whole	1 Whole
<input type="checkbox"/>	<input type="checkbox"/>

9. _____

5) $5 \div \frac{1}{5} =$

1 Whole	1 Whole	1 Whole	1 Whole	1 Whole
<input type="checkbox"/>	<input type="checkbox"/>	<input type="checkbox"/>	<input type="checkbox"/>	<input type="checkbox"/>

6) $3 \div \frac{1}{5} =$

1 Whole	1 Whole	1 Whole
<input type="checkbox"/>	<input type="checkbox"/>	<input type="checkbox"/>

7) $2 \div \frac{1}{7} =$

1 Whole	1 Whole
<input type="checkbox"/>	<input type="checkbox"/>

8) $6 \div \frac{1}{7} =$

1 Whole	1 Whole	1 Whole	1 Whole	1 Whole	1 Whole
<input type="checkbox"/>	<input type="checkbox"/>	<input type="checkbox"/>	<input type="checkbox"/>	<input type="checkbox"/>	<input type="checkbox"/>

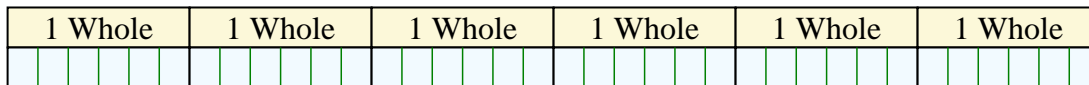
9) $6 \div \frac{1}{3} =$

1 Whole	1 Whole	1 Whole	1 Whole	1 Whole	1 Whole
<input type="checkbox"/>	<input type="checkbox"/>	<input type="checkbox"/>	<input type="checkbox"/>	<input type="checkbox"/>	<input type="checkbox"/>

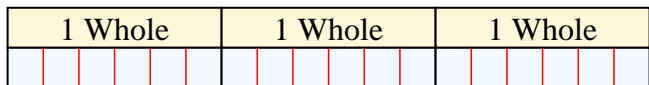


Solve each problem by marking off the fractions. The first is completed for you.

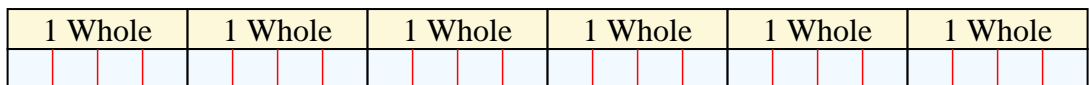
Ex) $6 \div \frac{1}{6} = ?$ This is the same as saying: How many $\frac{1}{6}$ are the in 6 wholes?



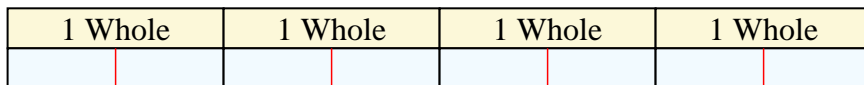
1) $3 \div \frac{1}{6} =$ This is the same as saying: How many $\frac{1}{6}$ are the in 3 wholes?



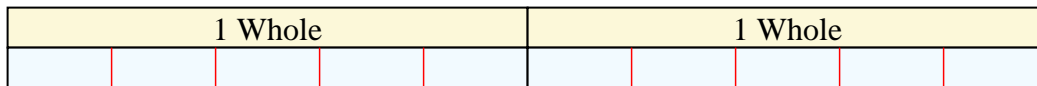
2) $6 \div \frac{1}{4} =$ This is the same as saying: How many $\frac{1}{4}$ are the in 6 wholes?



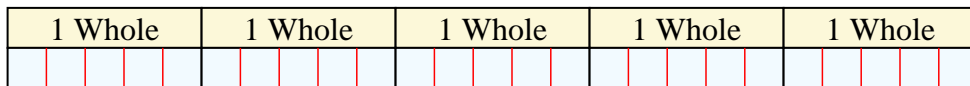
3) $4 \div \frac{1}{2} =$ This is the same as saying: How many $\frac{1}{2}$ are the in 4 wholes?



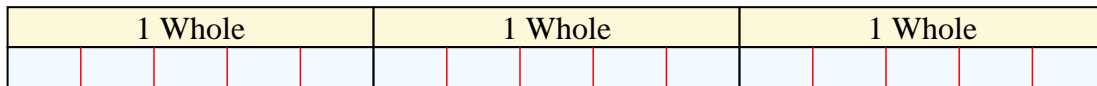
4) $2 \div \frac{1}{5} =$ This is the same as saying: How many $\frac{1}{5}$ are the in 2 wholes?



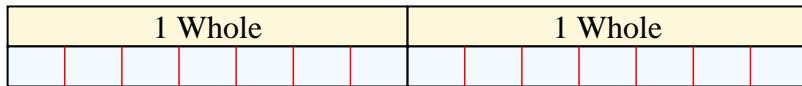
5) $5 \div \frac{1}{5} =$ This is the same as saying: How many $\frac{1}{5}$ are the in 5 wholes?



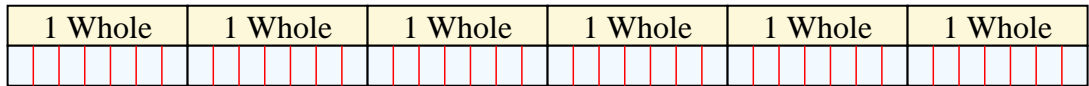
6) $3 \div \frac{1}{5} =$ This is the same as saying: How many $\frac{1}{5}$ are the in 3 wholes?




7) $2 \div \frac{1}{7} =$ This is the same as saying: How many $\frac{1}{7}$ are the in 2 wholes?



8) $6 \div \frac{1}{7} =$ This is the same as saying: How many $\frac{1}{7}$ are the in 6 wholes?



9) $6 \div \frac{1}{3} =$ This is the same as saying: How many $\frac{1}{3}$ are the in 6 wholes?



Answers

Ex. 36

1. 18

2. 24

3. 8

4. 10

5. 25

6. 15

7. 14

8. 42

9. 18



Solve each problem by marking off the fractions. The first is completed for you.

Answers

Ex)

Ex. 36

1)

1. _____

2)

2. _____

3)

3. _____

4)

4. _____

5)

5. _____

6)

6. _____

7)

7. _____

8)

8. _____

9)

9. _____