



Use the box provided to show a visual example of how to multiply two fractions.

Ex)  $\frac{3}{6} \times \frac{1}{9} =$

1)  $\frac{2}{3} \times \frac{2}{6} =$

2)  $\frac{2}{3} \times \frac{2}{3} =$

3)  $\frac{6}{7} \times \frac{1}{3} =$

4)  $\frac{1}{7} \times \frac{1}{2} =$

5)  $\frac{3}{8} \times \frac{5}{9} =$

6)  $\frac{3}{4} \times \frac{1}{7} =$

7)  $\frac{2}{8} \times \frac{2}{5} =$

8)  $\frac{3}{7} \times \frac{3}{8} =$

9)  $\frac{4}{5} \times \frac{1}{4} =$

10)  $\frac{2}{4} \times \frac{6}{8} =$

11)  $\frac{2}{7} \times \frac{1}{4} =$

**Answers**Ex.  $\frac{3}{54}$ 

1. \_\_\_\_\_

2. \_\_\_\_\_

3. \_\_\_\_\_

4. \_\_\_\_\_

5. \_\_\_\_\_

6. \_\_\_\_\_

7. \_\_\_\_\_

8. \_\_\_\_\_

9. \_\_\_\_\_

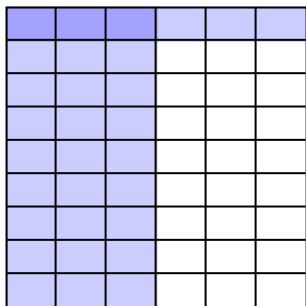
10. \_\_\_\_\_

11. \_\_\_\_\_

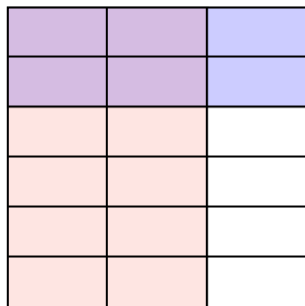


Use the box provided to show a visual example of how to multiply two fractions.

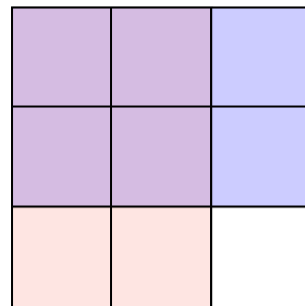
Ex)  $\frac{3}{6} \times \frac{1}{9} =$



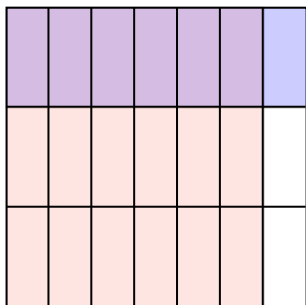
1)  $\frac{2}{3} \times \frac{2}{6} =$



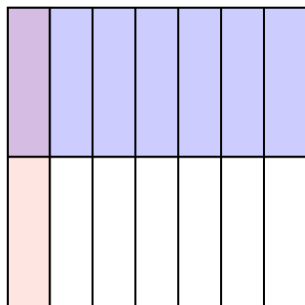
2)  $\frac{2}{3} \times \frac{2}{3} =$



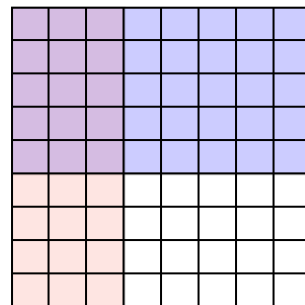
3)  $\frac{6}{7} \times \frac{1}{3} =$




4)  $\frac{1}{7} \times \frac{1}{2} =$



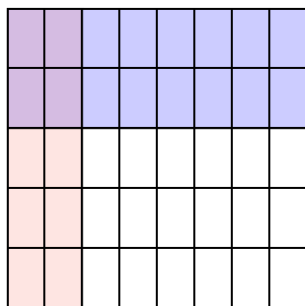
5)  $\frac{3}{8} \times \frac{5}{9} =$



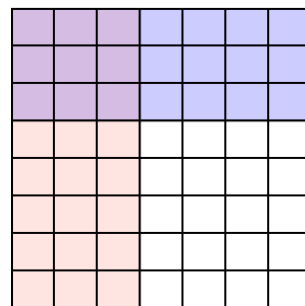
6)  $\frac{3}{4} \times \frac{1}{7} =$



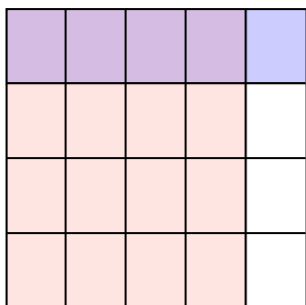
7)  $\frac{2}{8} \times \frac{2}{5} =$




8)  $\frac{3}{7} \times \frac{3}{8} =$



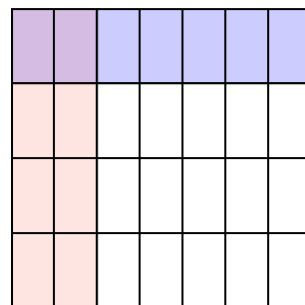
9)  $\frac{4}{5} \times \frac{1}{4} =$



10)  $\frac{2}{4} \times \frac{6}{8} =$



11)  $\frac{2}{7} \times \frac{1}{4} =$



**Answers**

Ex.  $\frac{3}{54}$

1.  $\frac{4}{18}$

2.  $\frac{4}{9}$

3.  $\frac{6}{21}$

4.  $\frac{1}{14}$

5.  $\frac{15}{72}$

6.  $\frac{3}{28}$

7.  $\frac{4}{40}$

8.  $\frac{9}{56}$

9.  $\frac{4}{20}$

10.  $\frac{12}{32}$


11.  $\frac{2}{28}$



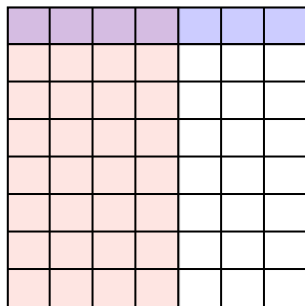


Use the box provided to show a visual example of how to multiply two fractions.

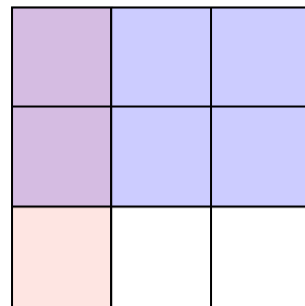
Ex)  $\frac{1}{2} \times \frac{6}{7} =$



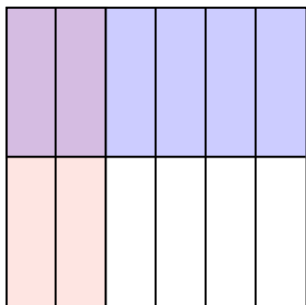
1)  $\frac{4}{7} \times \frac{1}{8} =$



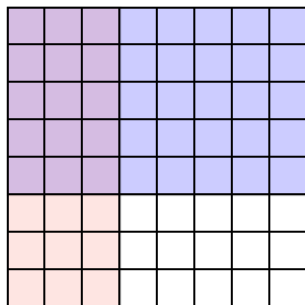
2)  $\frac{1}{3} \times \frac{2}{3} =$



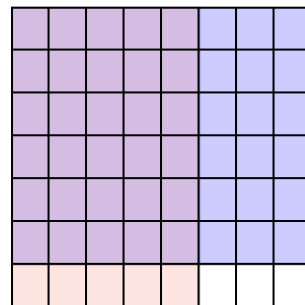
3)  $\frac{2}{6} \times \frac{1}{2} =$



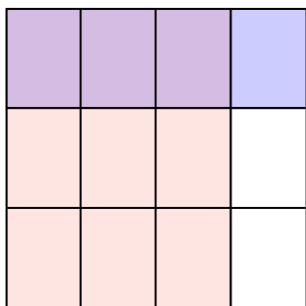
4)  $\frac{3}{8} \times \frac{5}{8} =$




5)  $\frac{5}{8} \times \frac{6}{7} =$



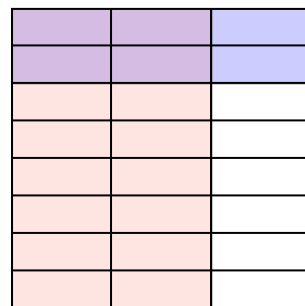
6)  $\frac{3}{4} \times \frac{1}{3} =$



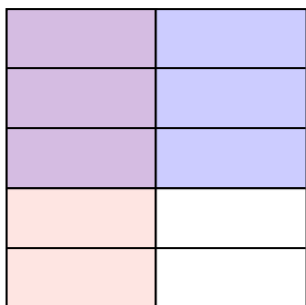
7)  $\frac{4}{7} \times \frac{3}{8} =$



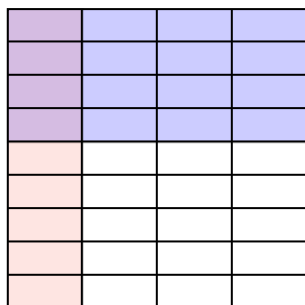
8)  $\frac{2}{3} \times \frac{2}{8} =$



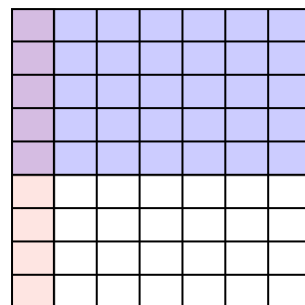
9)  $\frac{1}{2} \times \frac{3}{5} =$



10)  $\frac{1}{4} \times \frac{4}{9} =$



11)  $\frac{1}{7} \times \frac{5}{9} =$



**Answers**

Ex.  $\frac{6}{14}$

1.  $\frac{4}{56}$

2.  $\frac{2}{9}$

3.  $\frac{2}{12}$

4.  $\frac{15}{64}$

5.  $\frac{30}{56}$

6.  $\frac{3}{12}$

7.  $\frac{12}{56}$

8.  $\frac{4}{24}$

9.  $\frac{3}{10}$

10.  $\frac{4}{36}$

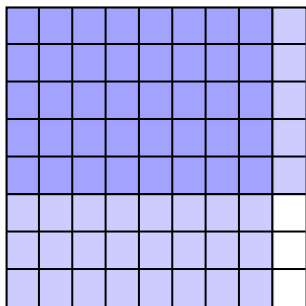
11.  $\frac{5}{63}$



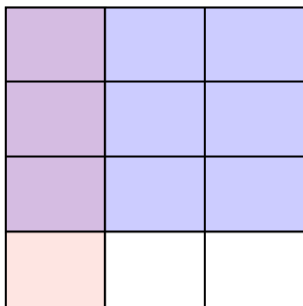


Use the box provided to show a visual example of how to multiply two fractions.

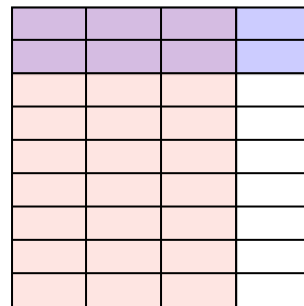
Ex)  $\frac{8}{9} \times \frac{5}{8} =$




1)  $\frac{1}{3} \times \frac{3}{4} =$



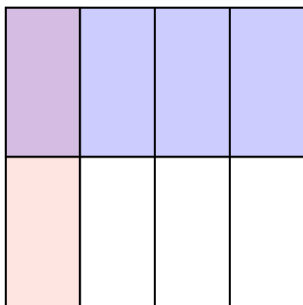
2)  $\frac{3}{4} \times \frac{2}{9} =$



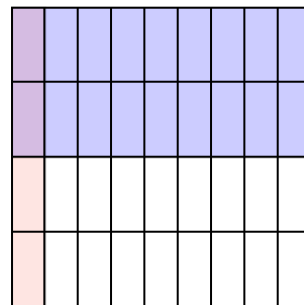
3)  $\frac{1}{2} \times \frac{1}{2} =$



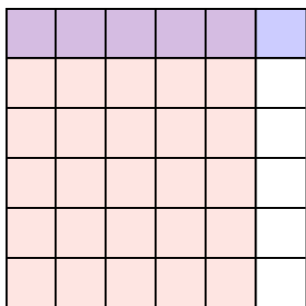
4)  $\frac{1}{4} \times \frac{1}{2} =$



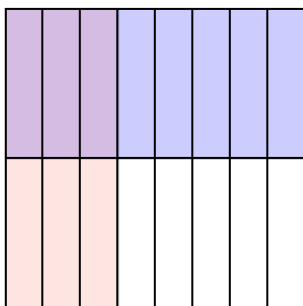
5)  $\frac{1}{9} \times \frac{2}{4} =$




6)  $\frac{5}{6} \times \frac{1}{6} =$



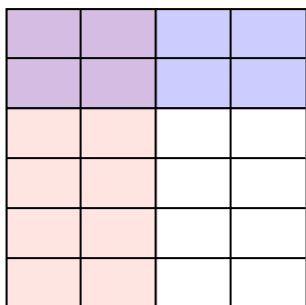
7)  $\frac{3}{8} \times \frac{1}{2} =$



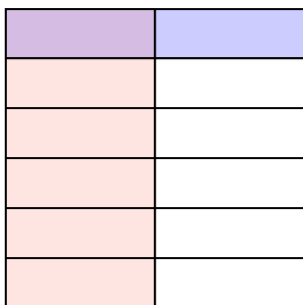
8)  $\frac{5}{6} \times \frac{7}{9} =$



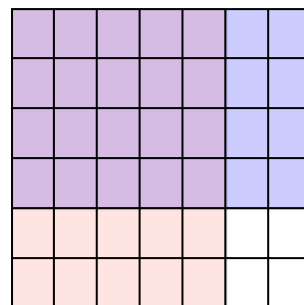
9)  $\frac{2}{4} \times \frac{2}{6} =$



10)  $\frac{1}{2} \times \frac{1}{6} =$



11)  $\frac{5}{7} \times \frac{4}{6} =$



**Answers**

Ex.  $\frac{40}{72}$

1.  $\frac{3}{12}$

2.  $\frac{6}{36}$

3.  $\frac{1}{4}$

4.  $\frac{1}{8}$

5.  $\frac{2}{36}$

6.  $\frac{5}{36}$

7.  $\frac{3}{16}$

8.  $\frac{35}{54}$

9.  $\frac{4}{24}$

10.  $\frac{1}{12}$

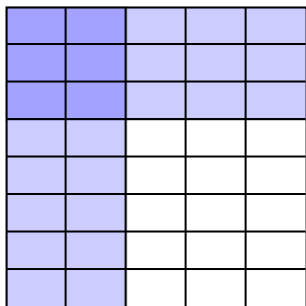
11.  $\frac{20}{42}$



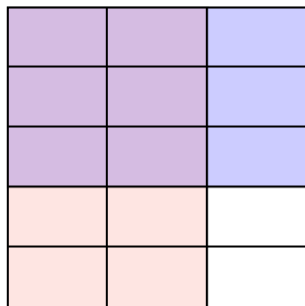


Use the box provided to show a visual example of how to multiply two fractions.

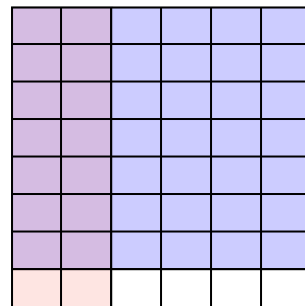
Ex)  $\frac{2}{5} \times \frac{3}{8} =$



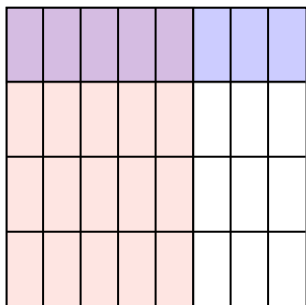
1)  $\frac{2}{3} \times \frac{3}{5} =$



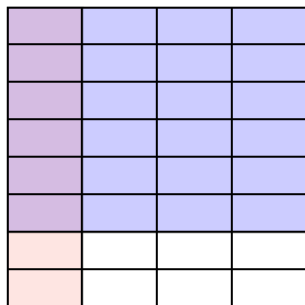
2)  $\frac{2}{6} \times \frac{7}{8} =$



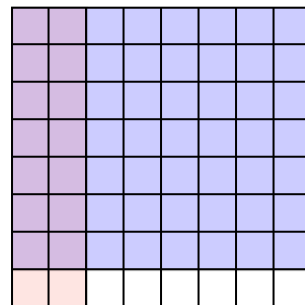
3)  $\frac{5}{8} \times \frac{1}{4} =$



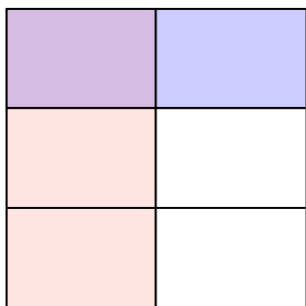
4)  $\frac{1}{4} \times \frac{6}{8} =$



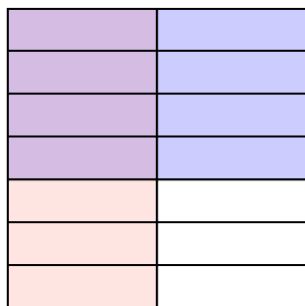
5)  $\frac{2}{8} \times \frac{7}{8} =$



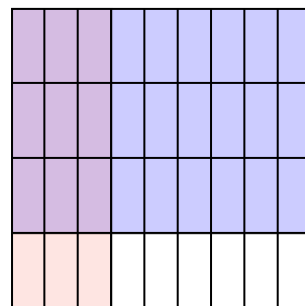
6)  $\frac{1}{2} \times \frac{1}{3} =$



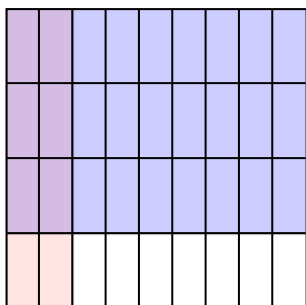
7)  $\frac{1}{2} \times \frac{4}{7} =$



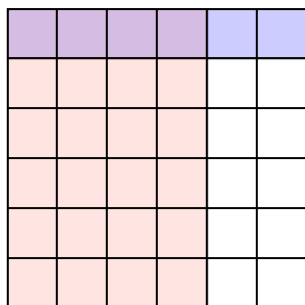
8)  $\frac{3}{9} \times \frac{3}{4} =$



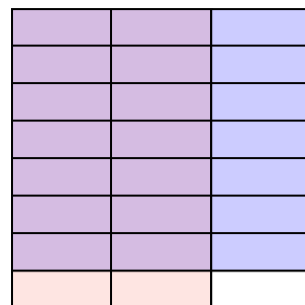
9)  $\frac{2}{9} \times \frac{3}{4} =$



10)  $\frac{4}{6} \times \frac{1}{6} =$



11)  $\frac{2}{3} \times \frac{7}{8} =$



**Answers**

Ex.  $\frac{6}{40}$

1.  $\frac{6}{15}$

2.  $\frac{14}{48}$

3.  $\frac{5}{32}$

4.  $\frac{6}{32}$

5.  $\frac{14}{64}$

6.  $\frac{1}{6}$

7.  $\frac{4}{14}$

8.  $\frac{9}{36}$

9.  $\frac{6}{36}$

10.  $\frac{4}{36}$

11.  $\frac{14}{24}$

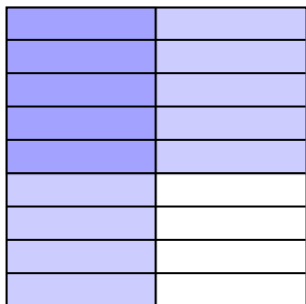




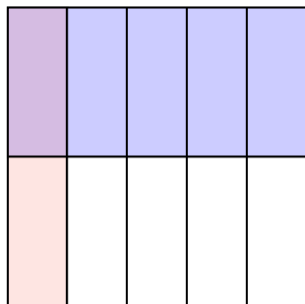


Use the box provided to show a visual example of how to multiply two fractions.


Ex)  $\frac{1}{2} \times \frac{5}{9} =$



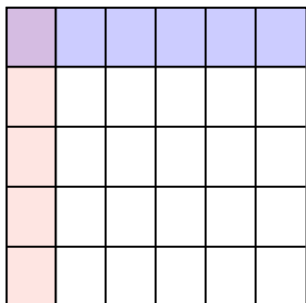
1)  $\frac{1}{5} \times \frac{1}{2} =$



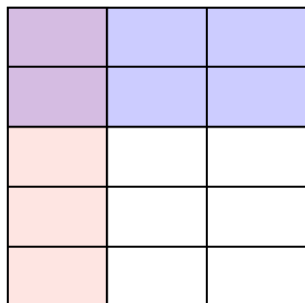
2)  $\frac{6}{7} \times \frac{4}{7} =$




3)  $\frac{1}{6} \times \frac{1}{5} =$



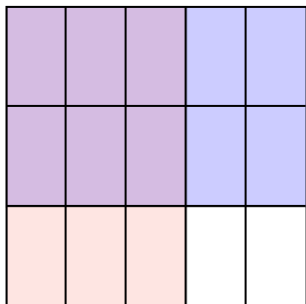
4)  $\frac{1}{3} \times \frac{2}{5} =$



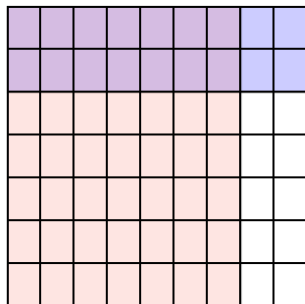
5)  $\frac{1}{2} \times \frac{1}{2} =$




6)  $\frac{3}{5} \times \frac{2}{3} =$



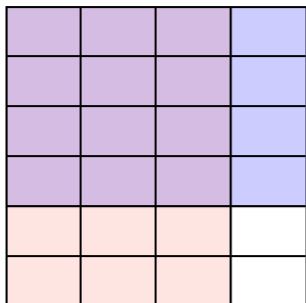
7)  $\frac{7}{9} \times \frac{2}{7} =$



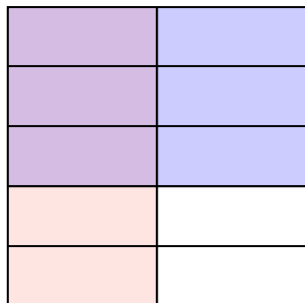
8)  $\frac{6}{9} \times \frac{4}{9} =$



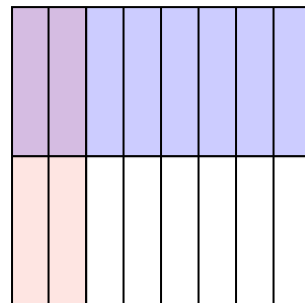
9)  $\frac{3}{4} \times \frac{4}{6} =$



10)  $\frac{1}{2} \times \frac{3}{5} =$



11)  $\frac{2}{8} \times \frac{1}{2} =$



**Answers**

Ex.  $\frac{5}{18}$

1.  $\frac{1}{10}$

2.  $\frac{24}{49}$

3.  $\frac{1}{30}$

4.  $\frac{2}{15}$

5.  $\frac{1}{4}$

6.  $\frac{6}{15}$

7.  $\frac{14}{63}$

8.  $\frac{24}{81}$

9.  $\frac{12}{24}$

10.  $\frac{3}{10}$

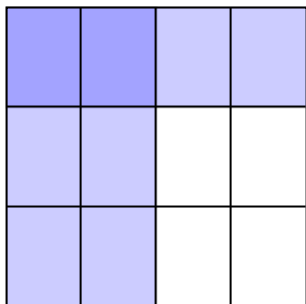
11.  $\frac{2}{16}$






Use the box provided to show a visual example of how to multiply two fractions.

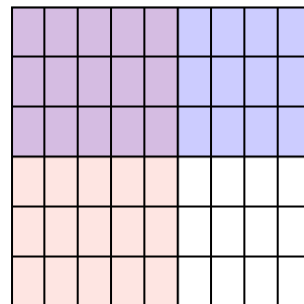
Ex)  $\frac{2}{4} \times \frac{1}{3} =$



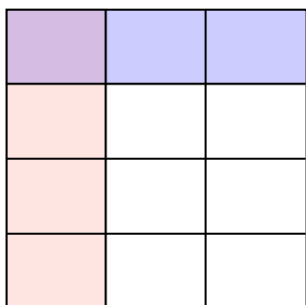
1)  $\frac{1}{2} \times \frac{3}{7} =$



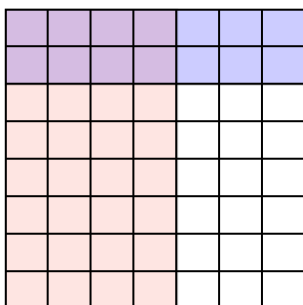
2)  $\frac{5}{9} \times \frac{3}{6} =$



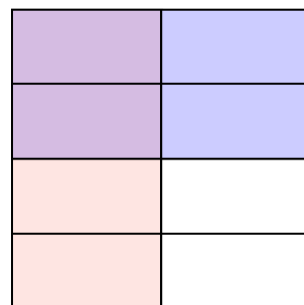
3)  $\frac{1}{3} \times \frac{1}{4} =$



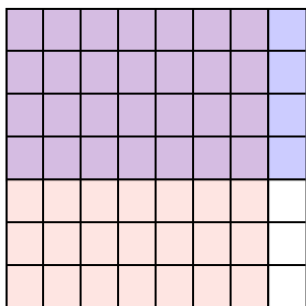
4)  $\frac{4}{7} \times \frac{2}{8} =$



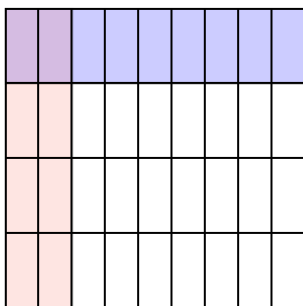
5)  $\frac{1}{2} \times \frac{2}{4} =$




6)  $\frac{7}{8} \times \frac{4}{7} =$



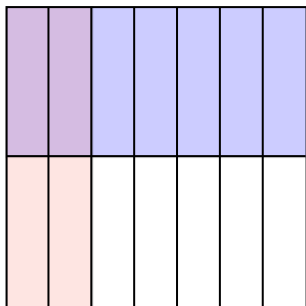
7)  $\frac{2}{9} \times \frac{1}{4} =$



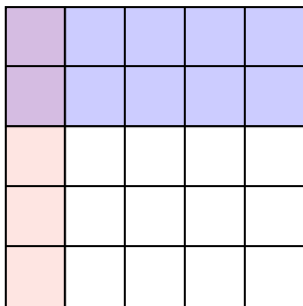
8)  $\frac{3}{4} \times \frac{5}{8} =$



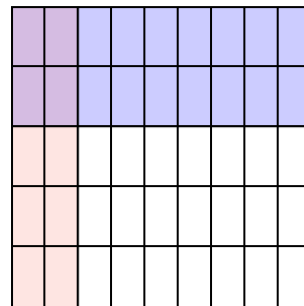
9)  $\frac{2}{7} \times \frac{1}{2} =$



10)  $\frac{1}{5} \times \frac{2}{5} =$



11)  $\frac{2}{9} \times \frac{2}{5} =$



**Answers**

Ex.  $\frac{2}{12}$

1.  $\frac{3}{14}$

2.  $\frac{15}{54}$

3.  $\frac{1}{12}$

4.  $\frac{8}{56}$

5.  $\frac{2}{8}$

6.  $\frac{28}{56}$

7.  $\frac{2}{36}$

8.  $\frac{15}{32}$

9.  $\frac{2}{14}$

10.  $\frac{2}{25}$

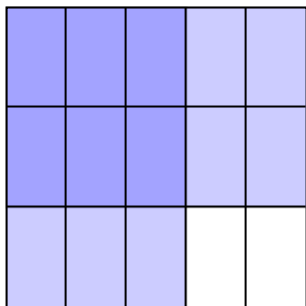
11.  $\frac{4}{45}$



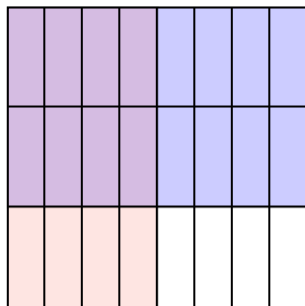


Use the box provided to show a visual example of how to multiply two fractions.

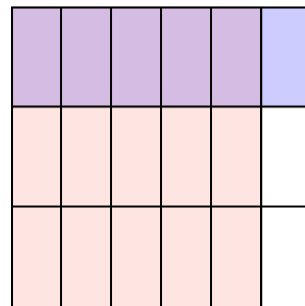
Ex)  $\frac{3}{5} \times \frac{2}{3} =$



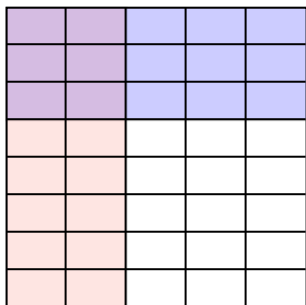
1)  $\frac{4}{8} \times \frac{2}{3} =$



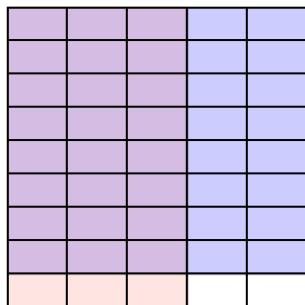
2)  $\frac{5}{6} \times \frac{1}{3} =$




3)  $\frac{2}{5} \times \frac{3}{8} =$



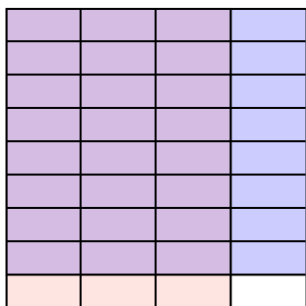
4)  $\frac{3}{5} \times \frac{8}{9} =$



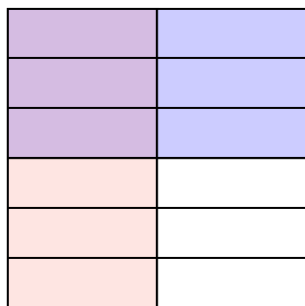
5)  $\frac{1}{3} \times \frac{1}{2} =$



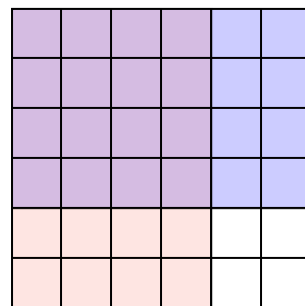
6)  $\frac{3}{4} \times \frac{8}{9} =$



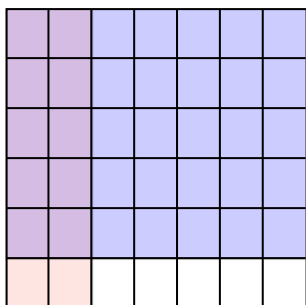
7)  $\frac{1}{2} \times \frac{3}{6} =$




8)  $\frac{4}{6} \times \frac{4}{6} =$




9)  $\frac{2}{7} \times \frac{5}{6} =$



10)  $\frac{4}{8} \times \frac{5}{8} =$



11)  $\frac{1}{2} \times \frac{1}{3} =$



**Answers**

Ex.  $\frac{6}{15}$

1.  $\frac{8}{24}$

2.  $\frac{5}{18}$

3.  $\frac{6}{40}$

4.  $\frac{24}{45}$

5.  $\frac{1}{6}$

6.  $\frac{24}{36}$

7.  $\frac{3}{12}$

8.  $\frac{16}{36}$

9.  $\frac{10}{42}$

10.  $\frac{20}{64}$

11.  $\frac{1}{6}$



Use the box provided to show a visual example of how to multiply two fractions.

Ex)  $\frac{3}{4} \times \frac{1}{7} =$

1)  $\frac{3}{5} \times \frac{3}{4} =$

2)  $\frac{3}{4} \times \frac{1}{2} =$

3)  $\frac{1}{2} \times \frac{6}{8} =$

4)  $\frac{3}{4} \times \frac{3}{4} =$

5)  $\frac{8}{9} \times \frac{3}{6} =$

6)  $\frac{4}{9} \times \frac{1}{6} =$

7)  $\frac{4}{6} \times \frac{1}{4} =$

8)  $\frac{1}{2} \times \frac{2}{3} =$

9)  $\frac{7}{9} \times \frac{3}{8} =$

10)  $\frac{3}{5} \times \frac{4}{7} =$

11)  $\frac{2}{4} \times \frac{3}{5} =$

**Answers**

Ex.  $\frac{3}{28}$

1. \_\_\_\_\_

2. \_\_\_\_\_

3. \_\_\_\_\_

4. \_\_\_\_\_

5. \_\_\_\_\_

6. \_\_\_\_\_

7. \_\_\_\_\_

8. \_\_\_\_\_

9. \_\_\_\_\_

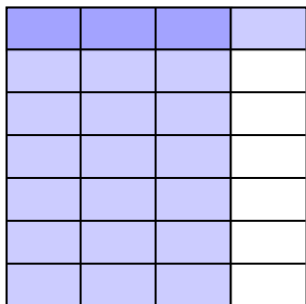
10. \_\_\_\_\_

11. \_\_\_\_\_

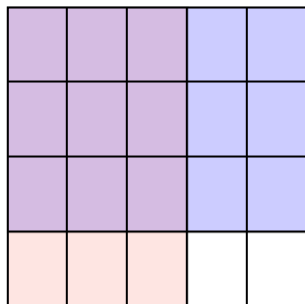


Use the box provided to show a visual example of how to multiply two fractions.

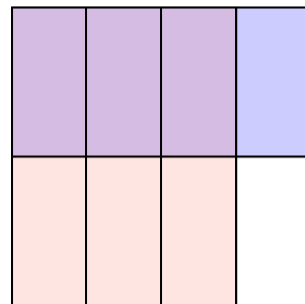
Ex)  $\frac{3}{4} \times \frac{1}{7} =$



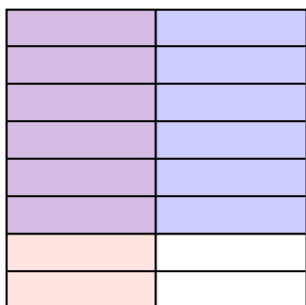
1)  $\frac{3}{5} \times \frac{3}{4} =$



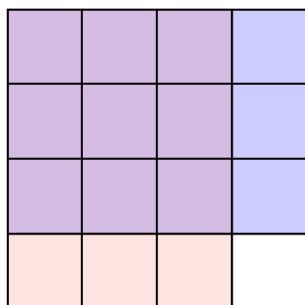
2)  $\frac{3}{4} \times \frac{1}{2} =$



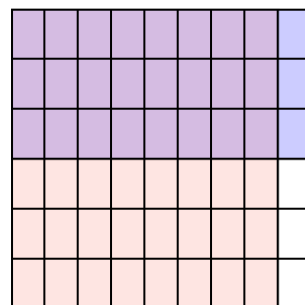
3)  $\frac{1}{2} \times \frac{6}{8} =$



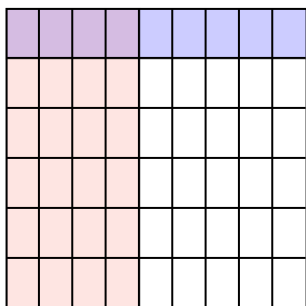
4)  $\frac{3}{4} \times \frac{3}{4} =$



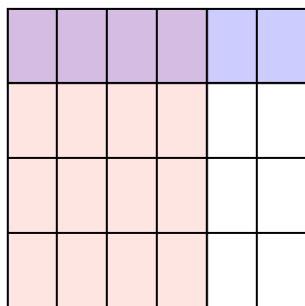
5)  $\frac{8}{9} \times \frac{3}{6} =$



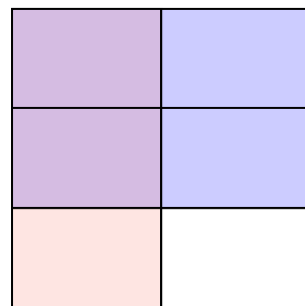
6)  $\frac{4}{9} \times \frac{1}{6} =$



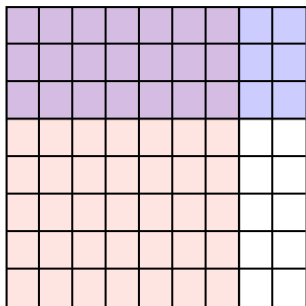
7)  $\frac{4}{6} \times \frac{1}{4} =$



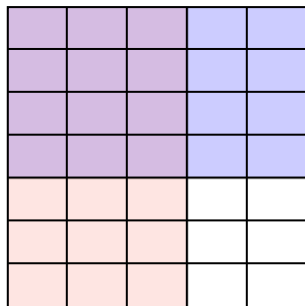
8)  $\frac{1}{2} \times \frac{2}{3} =$



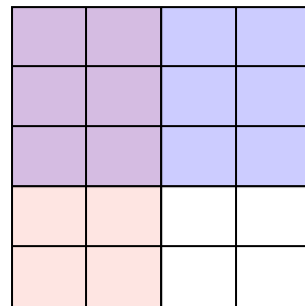
9)  $\frac{7}{9} \times \frac{3}{8} =$



10)  $\frac{3}{5} \times \frac{4}{7} =$



11)  $\frac{2}{4} \times \frac{3}{5} =$



**Answers**

Ex.  $\frac{3}{28}$

1.  $\frac{9}{20}$

2.  $\frac{3}{8}$

3.  $\frac{6}{16}$

4.  $\frac{9}{16}$

5.  $\frac{24}{54}$

6.  $\frac{4}{54}$

7.  $\frac{4}{24}$

8.  $\frac{2}{6}$

9.  $\frac{21}{72}$

10.  $\frac{12}{35}$

11.  $\frac{6}{20}$





Use the box provided to show a visual example of how to multiply two fractions.

**Answers**

Ex)  $\frac{2}{8} \times \frac{2}{9} =$

1)  $\frac{4}{7} \times \frac{1}{5} =$

2)  $\frac{4}{6} \times \frac{1}{2} =$

3)  $\frac{3}{4} \times \frac{1}{6} =$

4)  $\frac{3}{9} \times \frac{4}{5} =$

5)  $\frac{3}{6} \times \frac{5}{7} =$

6)  $\frac{1}{3} \times \frac{2}{3} =$

7)  $\frac{3}{5} \times \frac{5}{9} =$

8)  $\frac{3}{7} \times \frac{7}{8} =$

9)  $\frac{2}{5} \times \frac{3}{7} =$

10)  $\frac{1}{2} \times \frac{6}{8} =$

11)  $\frac{3}{5} \times \frac{2}{4} =$

Ex.  $\frac{4}{72}$

1. \_\_\_\_\_

2. \_\_\_\_\_

3. \_\_\_\_\_

4. \_\_\_\_\_

5. \_\_\_\_\_

6. \_\_\_\_\_

7. \_\_\_\_\_

8. \_\_\_\_\_

9. \_\_\_\_\_

10. \_\_\_\_\_

11. \_\_\_\_\_

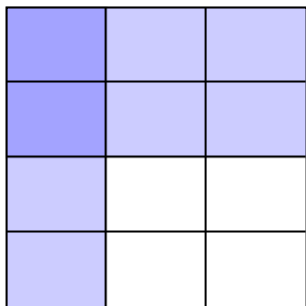




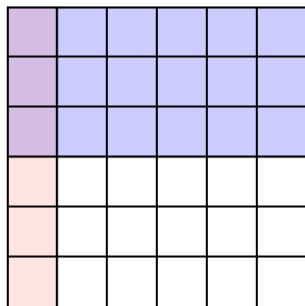


Use the box provided to show a visual example of how to multiply two fractions.

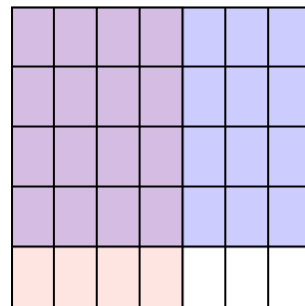
Ex)  $\frac{1}{3} \times \frac{2}{4} =$



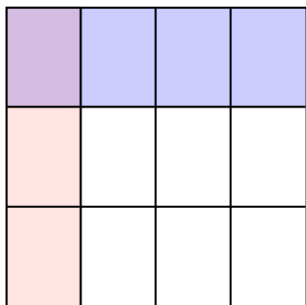
1)  $\frac{1}{6} \times \frac{3}{6} =$



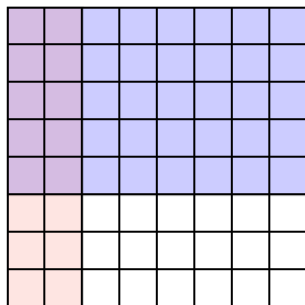
2)  $\frac{4}{7} \times \frac{4}{5} =$




3)  $\frac{1}{4} \times \frac{1}{3} =$



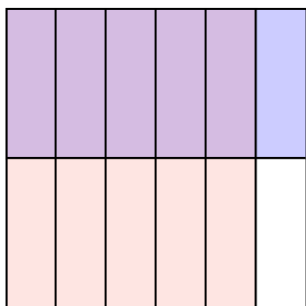
4)  $\frac{2}{8} \times \frac{5}{8} =$



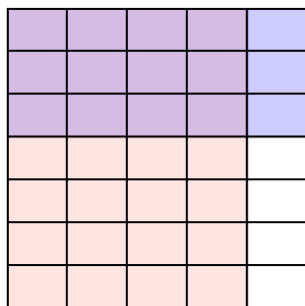
5)  $\frac{3}{4} \times \frac{7}{9} =$



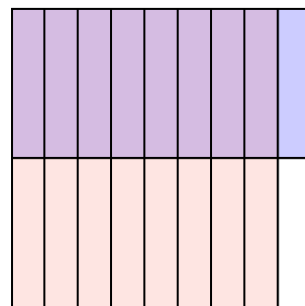
6)  $\frac{5}{6} \times \frac{1}{2} =$




7)  $\frac{4}{5} \times \frac{3}{7} =$



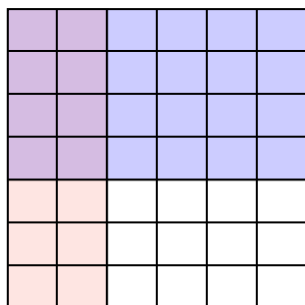
8)  $\frac{8}{9} \times \frac{1}{2} =$




9)  $\frac{7}{8} \times \frac{4}{8} =$



10)  $\frac{2}{6} \times \frac{4}{7} =$



11)  $\frac{1}{2} \times \frac{1}{2} =$



**Answers**

Ex.  $\frac{2}{12}$

1.  $\frac{3}{36}$

2.  $\frac{16}{35}$

3.  $\frac{1}{12}$

4.  $\frac{10}{64}$

5.  $\frac{21}{36}$

6.  $\frac{5}{12}$

7.  $\frac{12}{35}$

8.  $\frac{8}{18}$

9.  $\frac{28}{64}$

10.  $\frac{8}{42}$

11.  $\frac{1}{4}$