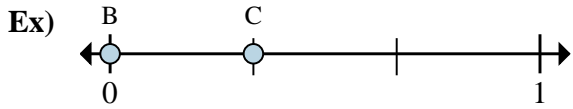
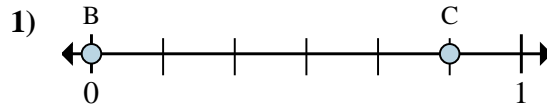




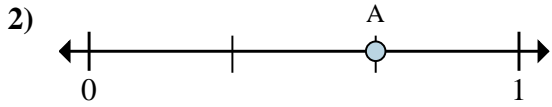
Solve each problem.



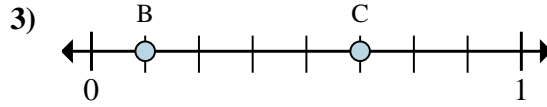
- a. On this numberline what is the value of 1 written as a fraction?
- b. On this numberline from B to C is how far (written as a fraction)?



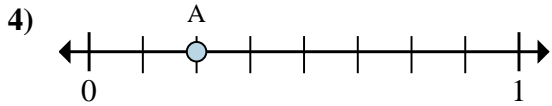
- a. On this numberline what is the value of 1 written as a fraction?
- b. On this numberline from B to C is how far (written as a fraction)?



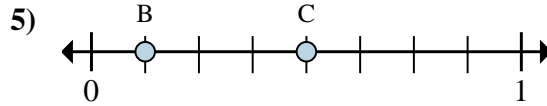
- a. This numberline is divided into how many pieces?
- b. What is the location of A (written as a fraction)?



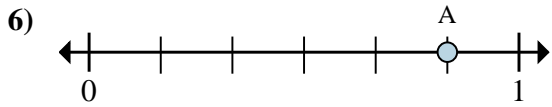
- a. On this numberline what is the value of 0 written as a fraction?
- b. On this numberline from B to C is how far (written as a fraction)?



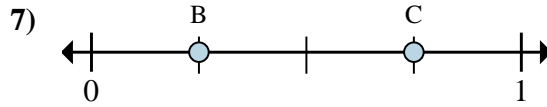
- a. This numberline is divided into how many pieces?
- b. What is the location of A (written as a fraction)?



- a. On this numberline what is the value of 1 written as a fraction?
- b. On this numberline from B to C is how far (written as a fraction)?



- a. This numberline is divided into how many pieces?
- b. What is the location of A (written as a fraction)?



- a. On this numberline what is the value of 1 written as a fraction?
- b. On this numberline from B to C is how far (written as a fraction)?

Answers

Exa. 3/3

Exb. 1/3

1a. _____

1b. _____

2a. _____

2b. _____

3a. _____

3b. _____

4a. _____

4b. _____

5a. _____

5b. _____

6a. _____

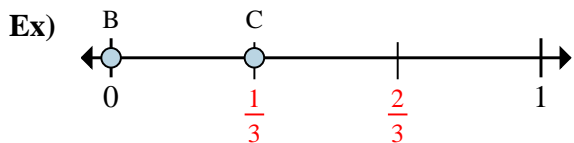
6b. _____

7a. _____

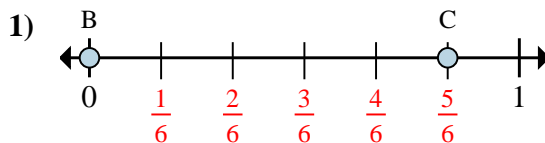
7b. _____



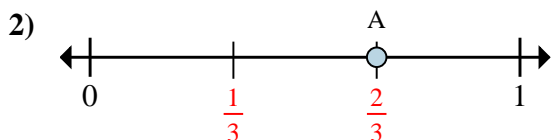
Solve each problem.



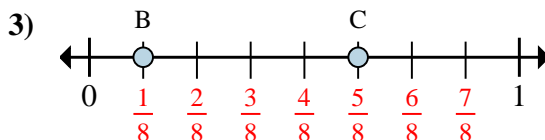
- On this numberline what is the value of 1 written as a fraction?
- On this numberline from B to C is how far (written as a fraction)?



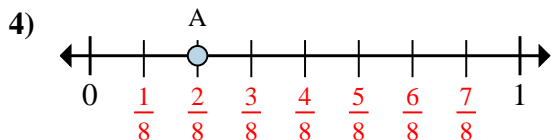
- On this numberline what is the value of 1 written as a fraction?
- On this numberline from B to C is how far (written as a fraction)?



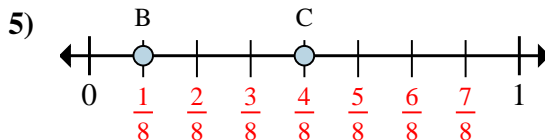
- This numberline is divided into how many pieces?
- What is the location of A (written as a fraction)?



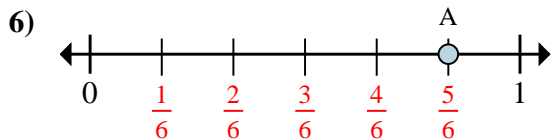
- On this numberline what is the value of 0 written as a fraction?
- On this numberline from B to C is how far (written as a fraction)?



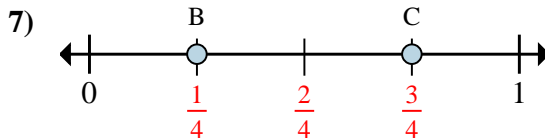
- This numberline is divided into how many pieces?
- What is the location of A (written as a fraction)?



- On this numberline what is the value of 1 written as a fraction?
- On this numberline from B to C is how far (written as a fraction)?



- This numberline is divided into how many pieces?
- What is the location of A (written as a fraction)?



- On this numberline what is the value of 1 written as a fraction?
- On this numberline from B to C is how far (written as a fraction)?

Answers

Exa. 3/3

Exb. 1/3

1a. 6/6

1b. 5/6

2a. 3

2b. 2/3

3a. 0/8

3b. 4/8

4a. 8

4b. 2/8

5a. 8/8

5b. 3/8

6a. 6

6b. 5/6

7a. 4/4

7b. 2/4