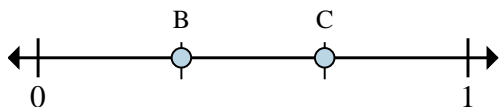




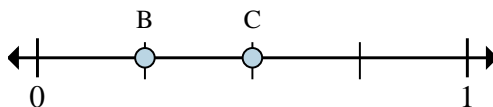
Solve each problem.

Ex)



- On this numberline what is the value of 1 written as a fraction?
- On this numberline from B to C is how far (written as a fraction)?

1)



- On this numberline what is the value of 1 written as a fraction?
- On this numberline from B to C is how far (written as a fraction)?

Answers

Exa. $\frac{3}{3}$

Exb. $\frac{1}{3}$

1a. _____

1b. _____

2a. _____

2b. _____

3a. _____

3b. _____

4a. _____

4b. _____

5a. _____

5b. _____

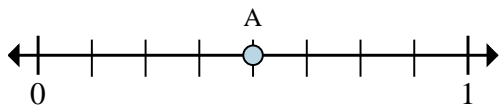
6a. _____

6b. _____

7a. _____

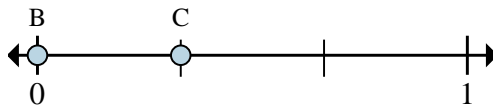
7b. _____

2)



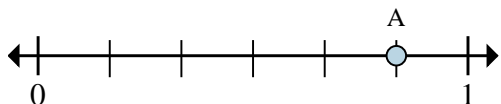
- This numberline is divided into how many pieces?
- What is the location of A (written as a fraction)?

3)



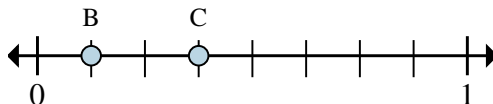
- On this numberline what is the value of 1 written as a fraction?
- On this numberline from B to C is how far (written as a fraction)?

4)



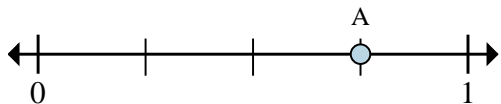
- This numberline is divided into how many pieces?
- What is the location of A (written as a fraction)?

5)



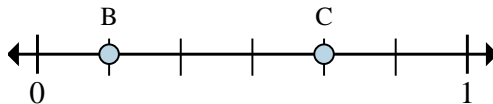
- On this numberline what is the value of 1 written as a fraction?
- On this numberline from B to C is how far (written as a fraction)?

6)



- This numberline is divided into how many pieces?
- What is the location of A (written as a fraction)?

7)

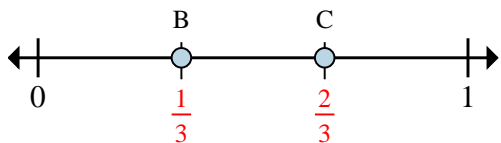


- On this numberline what is the value of 1 written as a fraction?
- On this numberline from B to C is how far (written as a fraction)?



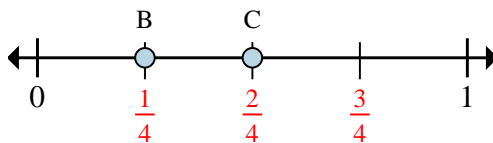
Solve each problem.

Ex)



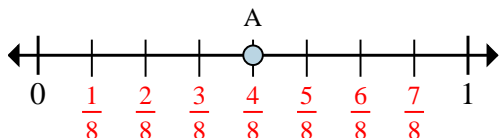
- On this numberline what is the value of 1 written as a fraction?
- On this numberline from B to C is how far (written as a fraction)?

1)



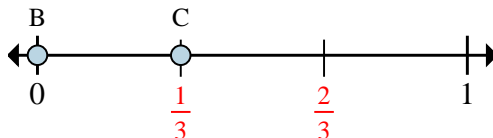
- On this numberline what is the value of 1 written as a fraction?
- On this numberline from B to C is how far (written as a fraction)?

2)



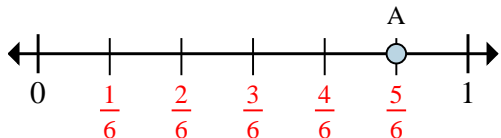
- This numberline is divided into how many pieces?
- What is the location of A (written as a fraction)?

3)



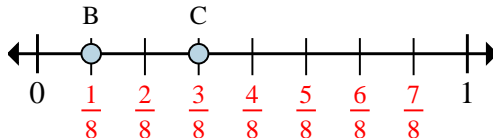
- On this numberline what is the value of 1 written as a fraction?
- On this numberline from B to C is how far (written as a fraction)?

4)



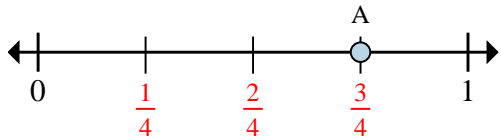
- This numberline is divided into how many pieces?
- What is the location of A (written as a fraction)?

5)



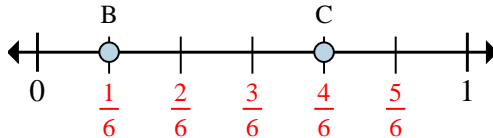
- On this numberline what is the value of 1 written as a fraction?
- On this numberline from B to C is how far (written as a fraction)?

6)



- This numberline is divided into how many pieces?
- What is the location of A (written as a fraction)?

7)



- On this numberline what is the value of 1 written as a fraction?
- On this numberline from B to C is how far (written as a fraction)?

Answers

Exa. 3/3

Exb. 1/3

1a. 4/4

1b. 1/4

2a. 8

2b. 4/8

3a. 3/3

3b. 1/3

4a. 6

4b. 5/6

5a. 8/8

5b. 2/8

6a. 4

6b. 3/4

7a. 6/6

7b. 3/6