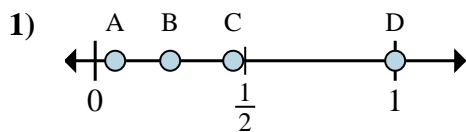


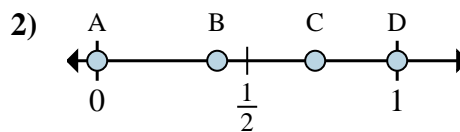


Determine which letter best shows the location of the fraction.

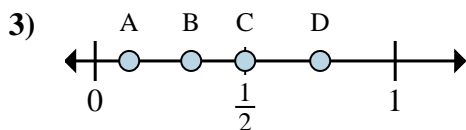
Answers



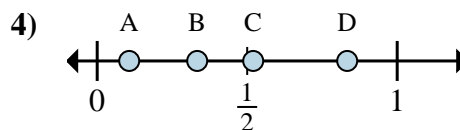
- a. Which letter best shows $\frac{4}{4}$?
- b. Which letter best shows $\frac{1}{4}$?



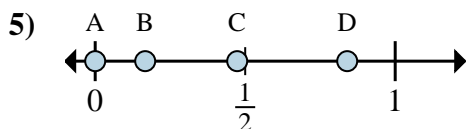
- a. Which letter best shows $\frac{0}{2}$?
- b. Which letter best shows $\frac{2}{2}$?



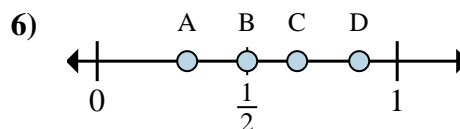
- a. Which letter best shows $\frac{3}{4}$?
- b. Which letter best shows $\frac{2}{4}$?



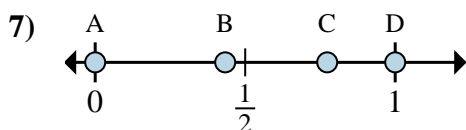
- a. Which letter best shows $\frac{5}{6}$?
- b. Which letter best shows $\frac{2}{6}$?



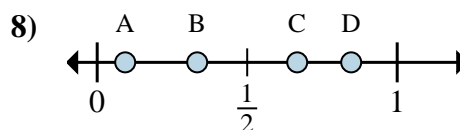
- a. Which letter best shows $\frac{0}{6}$?
- b. Which letter best shows $\frac{1}{6}$?



- a. Which letter best shows $\frac{3}{6}$?
- b. Which letter best shows $\frac{4}{6}$?



- a. Which letter best shows $\frac{0}{8}$?
- b. Which letter best shows $\frac{8}{8}$?



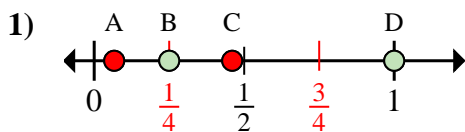
- a. Which letter best shows $\frac{2}{3}$?
- b. Which letter best shows $\frac{1}{3}$?

- 1. _____
- 2. _____
- 3. _____
- 4. _____
- 5. _____
- 6. _____
- 7. _____
- 8. _____

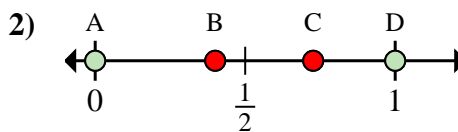


Determine which letter best shows the location of the fraction.

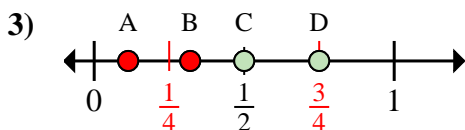
Answers



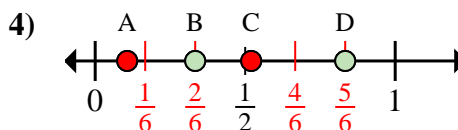
- a. Which letter best shows $\frac{4}{4}$?
- b. Which letter best shows $\frac{1}{4}$?



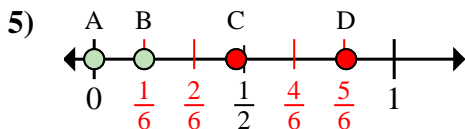
- a. Which letter best shows $\frac{0}{2}$?
- b. Which letter best shows $\frac{2}{2}$?



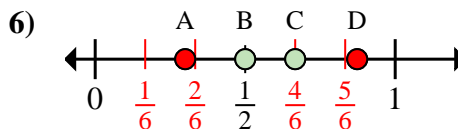
- a. Which letter best shows $\frac{3}{4}$?
- b. Which letter best shows $\frac{2}{4}$?



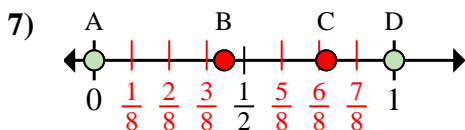
- a. Which letter best shows $\frac{5}{6}$?
- b. Which letter best shows $\frac{2}{6}$?



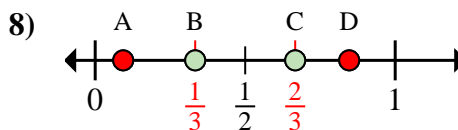
- a. Which letter best shows $\frac{0}{6}$?
- b. Which letter best shows $\frac{1}{6}$?



- a. Which letter best shows $\frac{3}{6}$?
- b. Which letter best shows $\frac{4}{6}$?



- a. Which letter best shows $\frac{0}{8}$?
- b. Which letter best shows $\frac{8}{8}$?



- a. Which letter best shows $\frac{2}{3}$?
- b. Which letter best shows $\frac{1}{3}$?

- 1. D B
- 2. A D
- 3. D C
- 4. D B
- 5. A B
- 6. B C
- 7. A D
- 8. C B