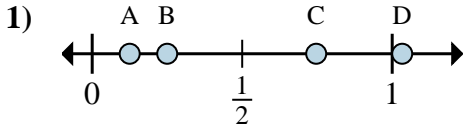


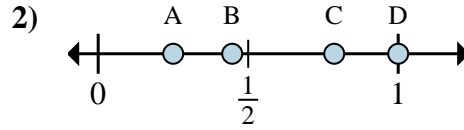


Determine which letter best shows the location of the fraction.

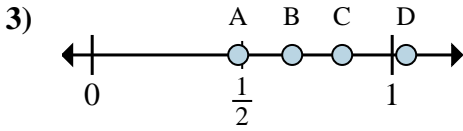
Answers



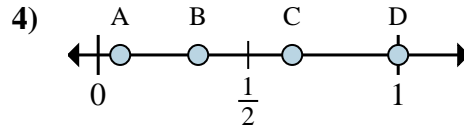
- a. Which letter best shows $\frac{1}{8}$?
- b. Which letter best shows $\frac{2}{8}$?



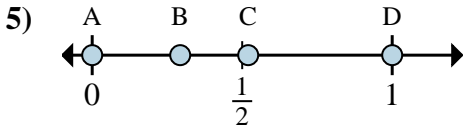
- a. Which letter best shows $\frac{4}{4}$?
- b. Which letter best shows $\frac{1}{4}$?



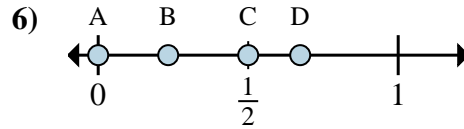
- a. Which letter best shows $\frac{5}{6}$?
- b. Which letter best shows $\frac{4}{6}$?



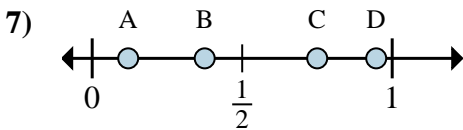
- a. Which letter best shows $\frac{3}{3}$?
- b. Which letter best shows $\frac{1}{3}$?



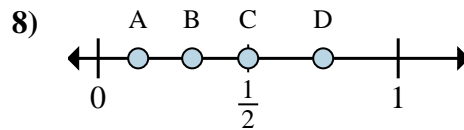
- a. Which letter best shows $\frac{0}{2}$?
- b. Which letter best shows $\frac{2}{2}$?



- a. Which letter best shows $\frac{0}{6}$?
- b. Which letter best shows $\frac{3}{6}$?



- a. Which letter best shows $\frac{6}{8}$?
- b. Which letter best shows $\frac{3}{8}$?



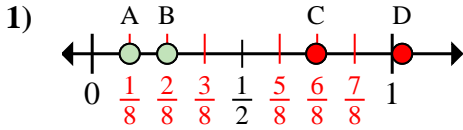
- a. Which letter best shows $\frac{2}{4}$?
- b. Which letter best shows $\frac{3}{4}$?

- 1. _____
- 2. _____
- 3. _____
- 4. _____
- 5. _____
- 6. _____
- 7. _____
- 8. _____

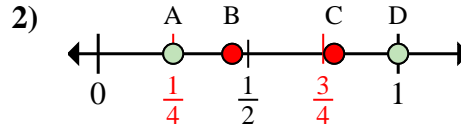


Determine which letter best shows the location of the fraction.

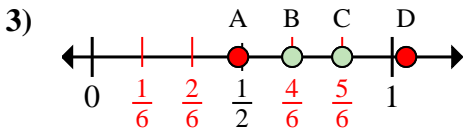
Answers



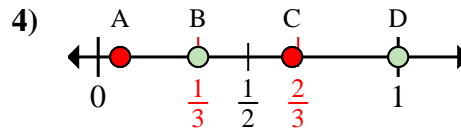
- a. Which letter best shows $\frac{1}{8}$?
- b. Which letter best shows $\frac{2}{8}$?



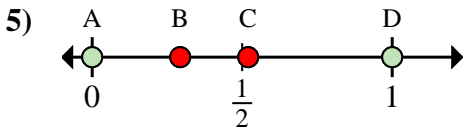
- a. Which letter best shows $\frac{4}{4}$?
- b. Which letter best shows $\frac{1}{4}$?



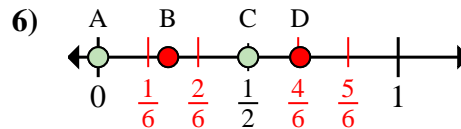
- a. Which letter best shows $\frac{5}{6}$?
- b. Which letter best shows $\frac{4}{6}$?



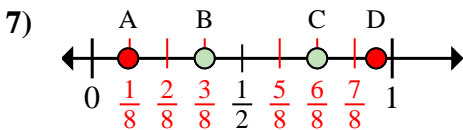
- a. Which letter best shows $\frac{3}{3}$?
- b. Which letter best shows $\frac{1}{3}$?



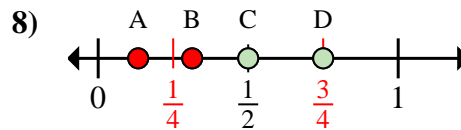
- a. Which letter best shows $\frac{0}{2}$?
- b. Which letter best shows $\frac{2}{2}$?



- a. Which letter best shows $\frac{0}{6}$?
- b. Which letter best shows $\frac{3}{6}$?



- a. Which letter best shows $\frac{6}{8}$?
- b. Which letter best shows $\frac{3}{8}$?



- a. Which letter best shows $\frac{2}{4}$?
- b. Which letter best shows $\frac{3}{4}$?

- 1. A B
- 2. D A
- 3. C B
- 4. D B
- 5. A D
- 6. A C
- 7. C B
- 8. C D