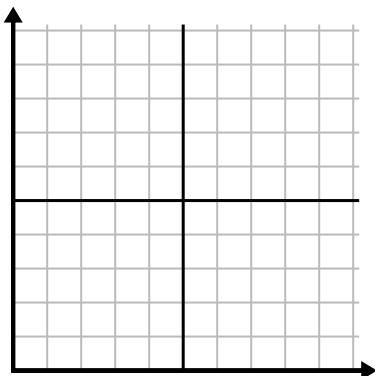


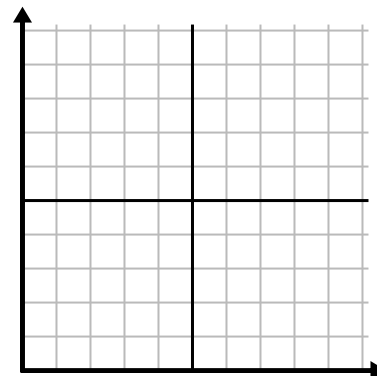


Fill in the grid using the chart.

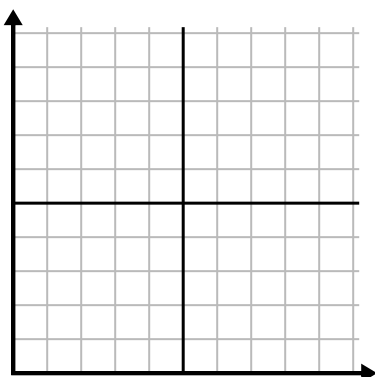
1)	Week	1	2	3	4	5	6	7
	Hours of TV watched	50	25	45	10	15	30	35



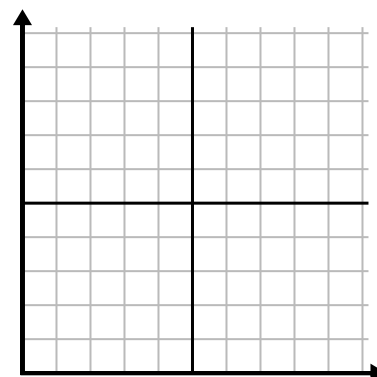
2)	Day	1	2	3	4	5	6
	Texts Sent	20	5	50	30	10	15



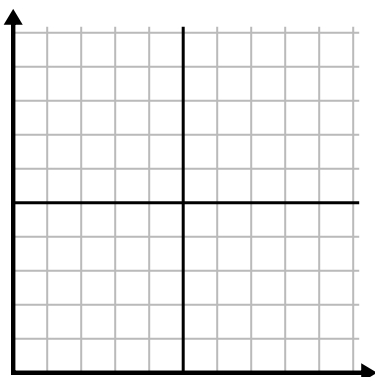
3)	Day	1	2	3	4	5	6
	Youtube Videos Watched	300	240	60	210	180	270



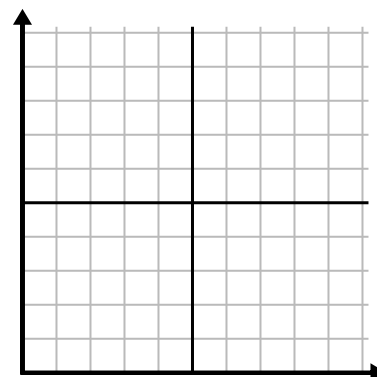
4)	Day	1	2	3	4	5
	Money Spent	5	6	7	10	3



5)	Hour	1	2	3	4	5	6	7
	Amount Sold	8	1	6	10	3	7	4



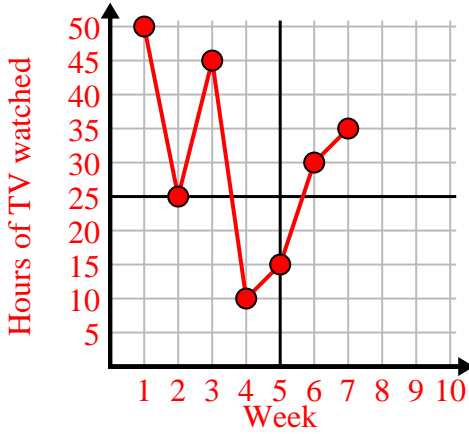
6)	Month	1	2	3	4	5
	Electric Bill Price	125	200	150	25	75



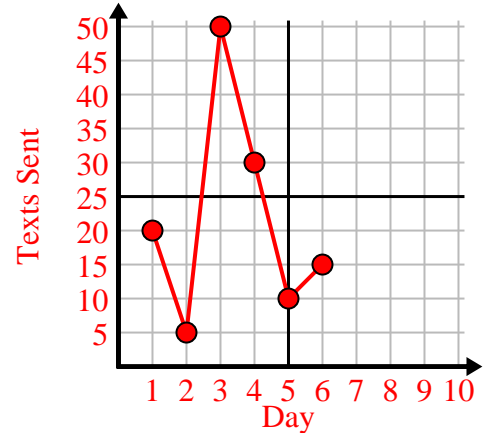


Fill in the grid using the chart.

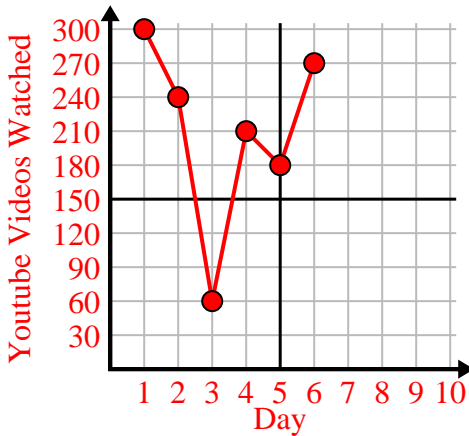
Week	1	2	3	4	5	6	7
Hours of TV watched	50	25	45	10	15	30	35



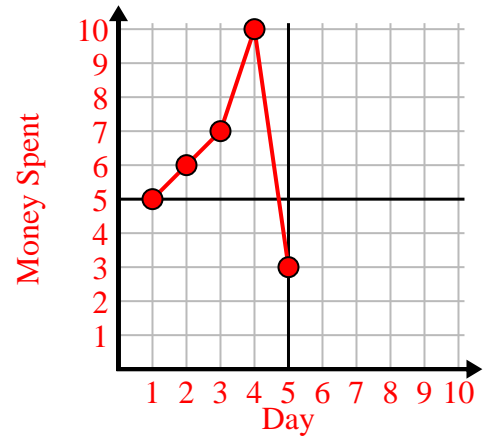
Day	1	2	3	4	5	6
Texts Sent	20	5	50	30	10	15



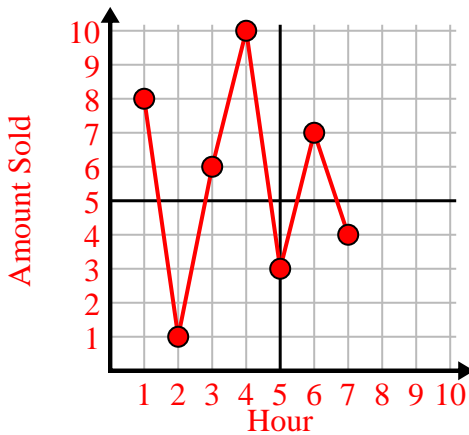
Day	1	2	3	4	5	6
Youtube Videos Watched	300	240	60	210	180	270



Day	1	2	3	4	5
Money Spent	5	6	7	10	3



Hour	1	2	3	4	5	6	7
Amount Sold	8	1	6	10	3	7	4



Month	1	2	3	4	5
Electric Bill Price	125	200	150	25	75

