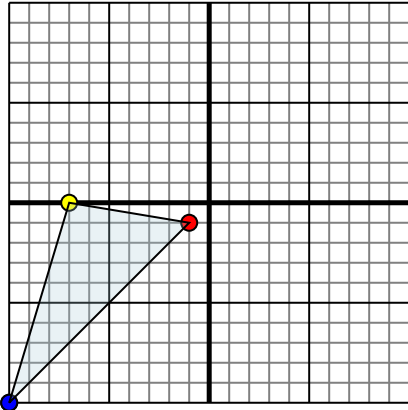




Reflect each shape as described.

1)

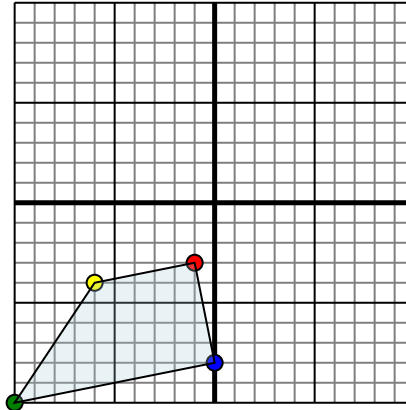


The shape above has the following coordinates:

- A. (-1,-1)
- B. (-7,0)
- C. (-10,-10)

Reflect the shape over the X axis.

2)

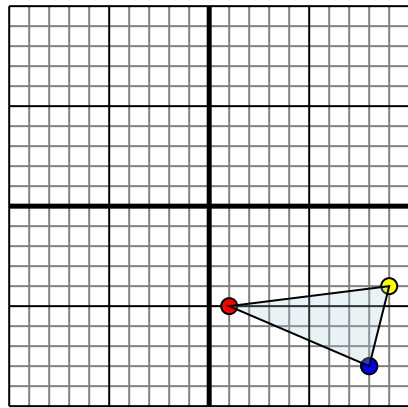


The shape above has the following coordinates:

- A. (-1,-3)
- B. (-6,-4)
- C. (-10,-10)
- D. (0,-8)

Reflect the shape over the X axis.

3)

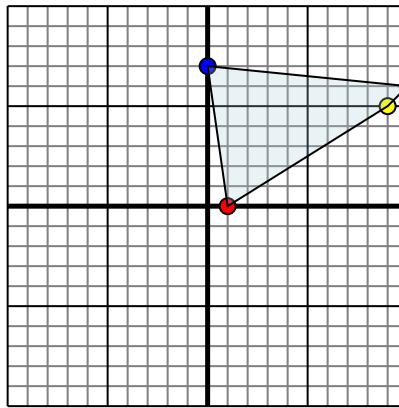


The shape above has the following coordinates:

- A. (1,-5)
- B. (9,-4)
- C. (8,-8)

Reflect the shape over the X axis.

4)



The shape above has the following coordinates:

- A. (1,0)
- B. (9,5)
- C. (10,6)
- D. (0,7)

Reflect the shape over the X axis.

Answers

1a. _____

1b. _____

1c. _____

1d. _____

2a. _____

2b. _____

2c. _____

2d. _____

2e. _____

3a. _____

3b. _____

3c. _____

3d. _____

4a. _____

4b. _____

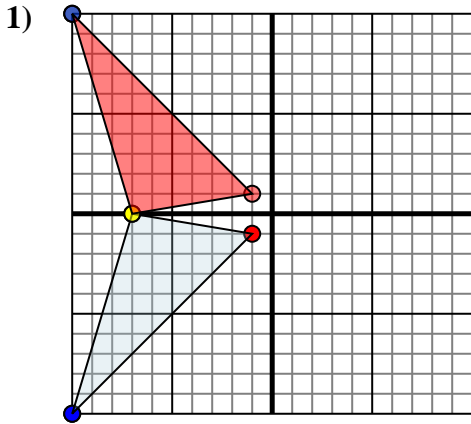
4c. _____

4d. _____

4e. _____



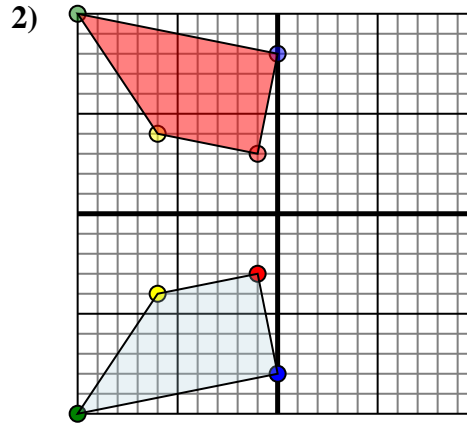
Reflect each shape as described.



The shape above has the following coordinates:

- A. (-1,-1)
- B. (-7,0)
- C. (-10,-10)

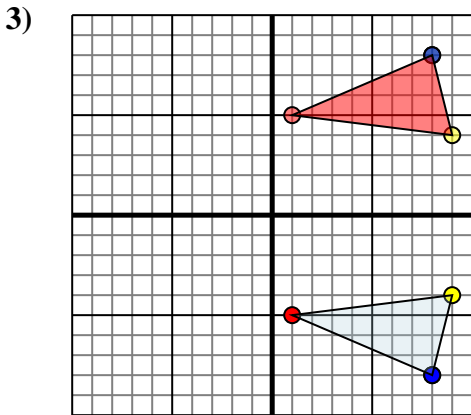
Reflect the shape over the X axis.



The shape above has the following coordinates:

- A. (-1,-3)
- B. (-6,-4)
- C. (-10,-10)
- D. (0,-8)

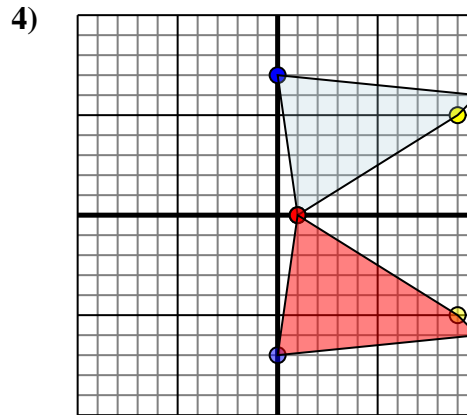
Reflect the shape over the X axis.



The shape above has the following coordinates:

- A. (1,-5)
- B. (9,-4)
- C. (8,-8)

Reflect the shape over the X axis.



The shape above has the following coordinates:

- A. (1,0)
- B. (9,5)
- C. (10,6)
- D. (0,7)

Reflect the shape over the X axis.

Answers

1a. -1,1

1b. -7,0

1c. -10,10

1d. Graph

2a. -1,3

2b. -6,4

2c. -10,10

2d. 0,8

2e. Graph

3a. 1,5

3b. 9,4

3c. 8,8

3d. Graph

4a. 1,0

4b. 9,-5

4c. 10,-6

4d. 0,-7

4e. Graph