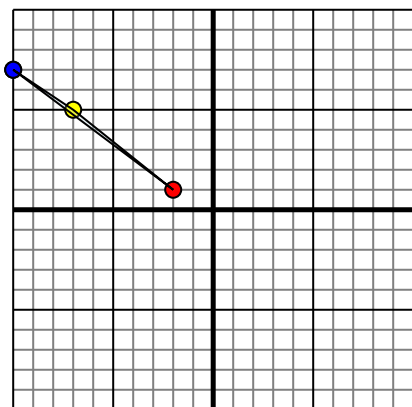




Reflect each shape as described.

1)

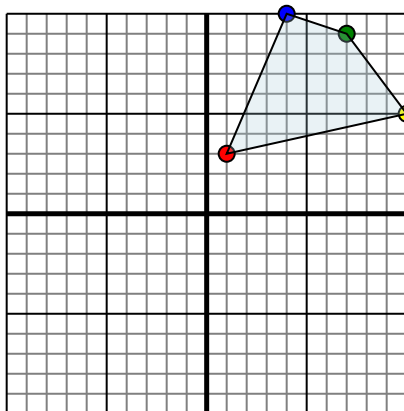


The shape above has the following coordinates:

- A. (-2,1)
- B. (-7,5)
- C. (-10,7)

Reflect the shape over the Y axis.

2)

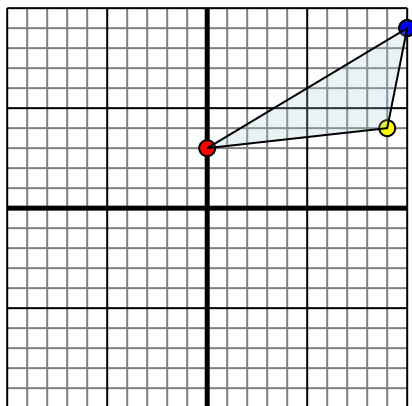


The shape above has the following coordinates:

- A. (1,3)
- B. (10,5)
- C. (7,9)
- D. (4,10)

Reflect the shape over the Y axis.

3)

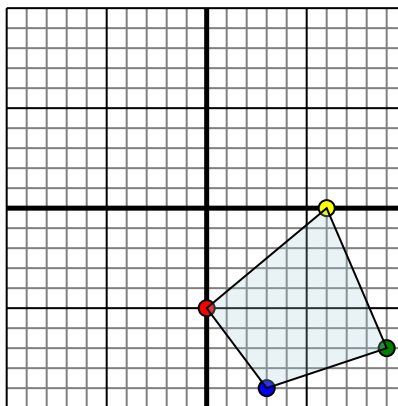


The shape above has the following coordinates:

- A. (0,3)
- B. (9,4)
- C. (10,9)

Reflect the shape over the Y axis.

4)



The shape above has the following coordinates:

- A. (0,-5)
- B. (6,0)
- C. (9,-7)
- D. (3,-9)

Reflect the shape over the Y axis.

Answers

1a. _____

1b. _____

1c. _____

1d. _____

2a. _____

2b. _____

2c. _____

2d. _____

2e. _____

3a. _____

3b. _____

3c. _____

3d. _____

4a. _____

4b. _____

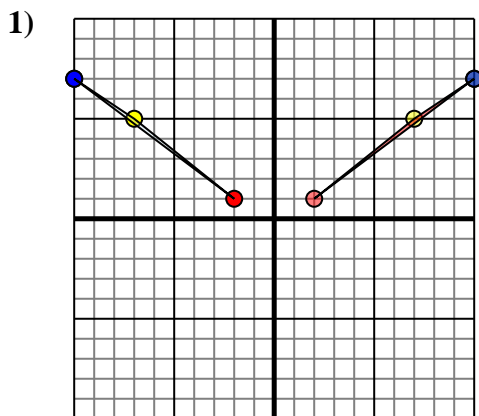
4c. _____

4d. _____

4e. _____



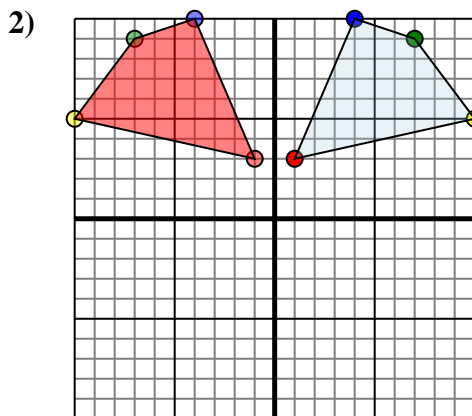
Reflect each shape as described.



The shape above has the following coordinates:

- A. (-2,1)
- B. (-7,5)
- C. (-10,7)

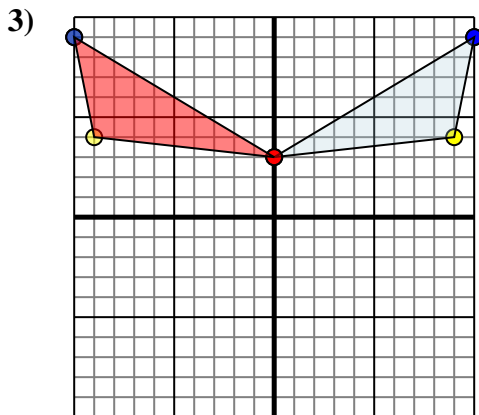
Reflect the shape over the Y axis.



The shape above has the following coordinates:

- A. (1,3)
- B. (10,5)
- C. (7,9)
- D. (4,10)

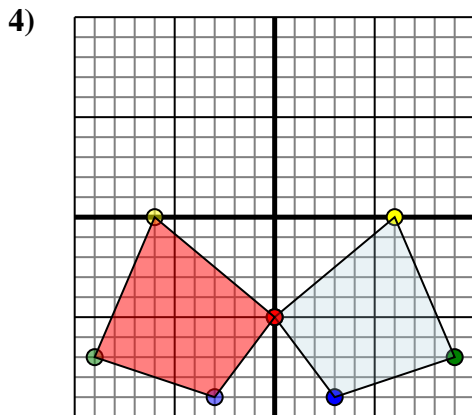
Reflect the shape over the Y axis.



The shape above has the following coordinates:

- A. (0,3)
- B. (9,4)
- C. (10,9)

Reflect the shape over the Y axis.



The shape above has the following coordinates:

- A. (0,-5)
- B. (6,0)
- C. (9,-7)
- D. (3,-9)

Reflect the shape over the Y axis.

Answers

1a. 2,1

1b. 7,5

1c. 10,7

1d. Graph

2a. -1,3

2b. -10,5

2c. -7,9

2d. -4,10

2e. Graph

3a. 0,3

3b. -9,4

3c. -10,9

3d. Graph

4a. 0,-5

4b. -6,0

4c. -9,-7

4d. -3,-9

4e. Graph