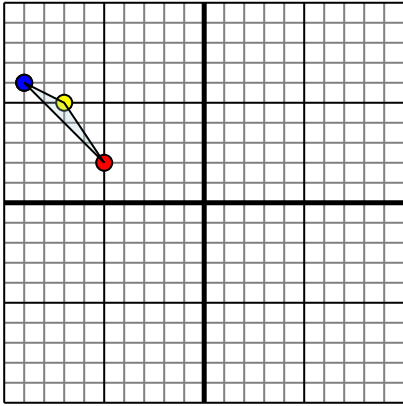




Reflect each shape as described.

1)

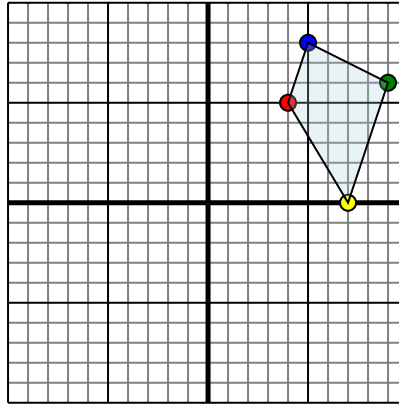


The shape above has the following coordinates:

- A. (-5,2)
- B. (-7,5)
- C. (-9,6)

Reflect the shape over the X axis.

2)

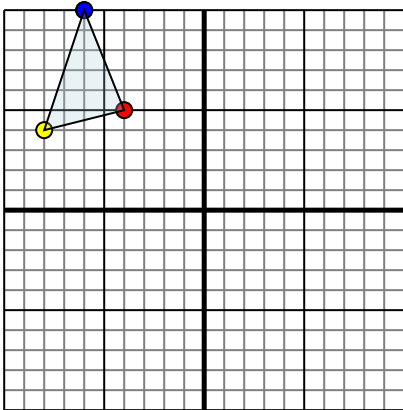


The shape above has the following coordinates:

- A. (4,5)
- B. (7,0)
- C. (9,6)
- D. (5,8)

Reflect the shape over the Y axis.

3)

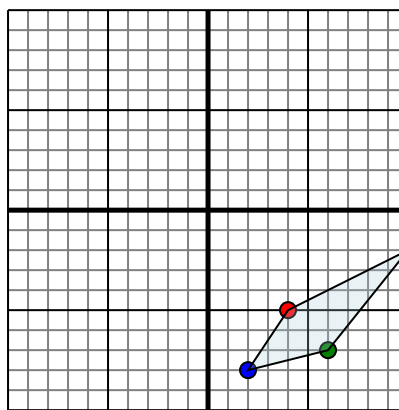


The shape above has the following coordinates:

- A. (-4,5)
- B. (-8,4)
- C. (-6,10)

Reflect the shape over the X axis.

4)



The shape above has the following coordinates:

- A. (4,-5)
- B. (10,-2)
- C. (6,-7)
- D. (2,-8)

Reflect the shape over the X axis.

Answers

1a. _____

1b. _____

1c. _____

1d. _____

2a. _____

2b. _____

2c. _____

2d. _____

2e. _____

3a. _____

3b. _____

3c. _____

3d. _____

4a. _____

4b. _____

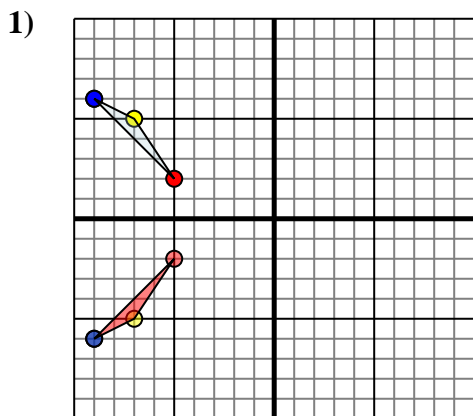
4c. _____

4d. _____

4e. _____



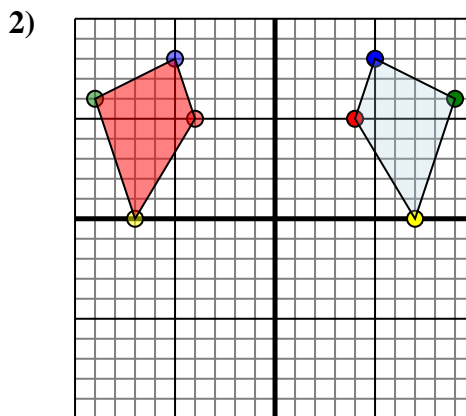
Reflect each shape as described.



The shape above has the following coordinates:

- A. (-5,2)
- B. (-7,5)
- C. (-9,6)

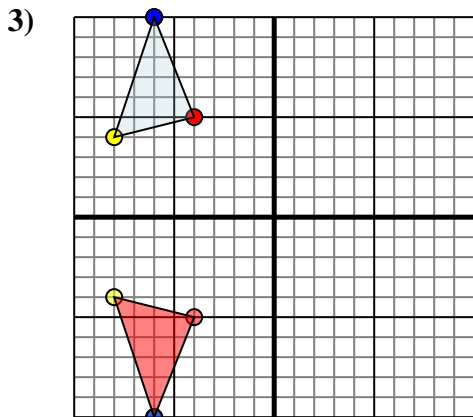
Reflect the shape over the X axis.



The shape above has the following coordinates:

- A. (4,5)
- B. (7,0)
- C. (9,6)
- D. (5,8)

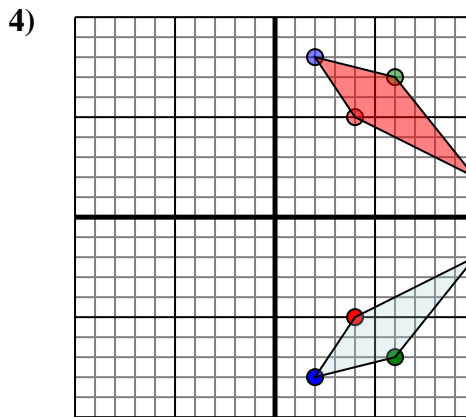
Reflect the shape over the Y axis.



The shape above has the following coordinates:

- A. (-4,5)
- B. (-8,4)
- C. (-6,10)

Reflect the shape over the X axis.



The shape above has the following coordinates:

- A. (4,-5)
- B. (10,-2)
- C. (6,-7)
- D. (2,-8)

Reflect the shape over the X axis.

Answers

1a. -5,-2

1b. -7,-5

1c. -9,-6

1d. Graph

2a. -4,5

2b. -7,0

2c. -9,6

2d. -5,8

2e. Graph

3a. -4,-5

3b. -8,-4

3c. -6,-10

3d. Graph

4a. 4,5

4b. 10,2

4c. 6,7

4d. 2,8

4e. Graph