




Use the units provided to measure the width of each of the bars.



Answers

1. _____

2. _____

3. _____

4. _____

5. _____

6. _____

7. _____


8. _____

9. _____

10. _____



Use the units provided to measure the width of each of the bars.



Answers

1. 2

2. 1

3. 15

4. 4

5. 12


6. 9

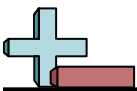
7. 8

8. 6

9. 11

10. 14






Use the units provided to measure the width of each of the bars.

Answers



1. _____



2. _____



3. _____



4. _____



5. _____



6. _____



7. _____



8. _____




9. _____



10. _____



Use the units provided to measure the width of each of the bars.



Answers

1. 10

2. 1

3. 6

4. 2

5. 12

6. 3

7. 4

8. 11

9. 7

10. 8



Use the units provided to measure the width of each of the bars.

Answers



1. _____



2. _____



3. _____



4. _____



5. _____



6. _____



7. _____



8. _____



9. _____



10. _____



Use the units provided to measure the width of each of the bars.



Answers

1. 9

2. 13

3. 2

4. 4

5. 1

6. 6

7. 3




8. 5

9. 14

10. 12

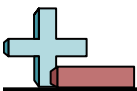


Use the units provided to measure the width of each of the bars.





Answers

- 1. _____
- 2. _____
- 3. _____
- 4. _____
- 5. _____
- 6. _____
- 7. _____
- 8. _____
- 9. _____
- 10. _____



Use the units provided to measure the width of each of the bars.



Answers

1. 8

2. 2

3. 3

4. 5

5. 7

6. 9

7. 6

8. 10

9. 1

10. 4




Use the units provided to measure the width of each of the bars.

Answers



1. _____




2. _____



3. _____



4. _____



5. _____



6. _____



7. _____



8. _____






9. _____



10. _____



Use the units provided to measure the width of each of the bars.



Answers

1. 10

2. 1

3. 4

4. 8

5. 13

6. 7

7. 9

8. 11

9. 5

10. 3



Use the units provided to measure the width of each of the bars.



Answers

1. _____

2. _____

3. _____

4. _____

5. _____

6. _____

7. _____

8. _____

9. _____

10. _____



Use the units provided to measure the width of each of the bars.



Answers

1. 1

2. 7

3. 11

4. 8

5. 2



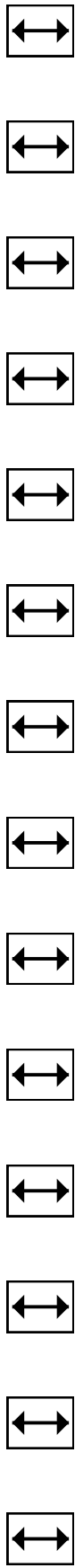
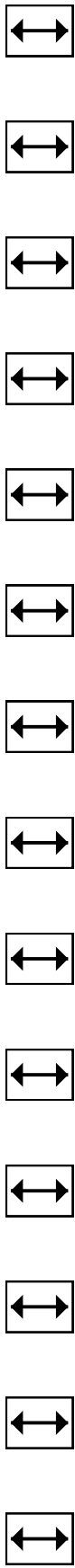
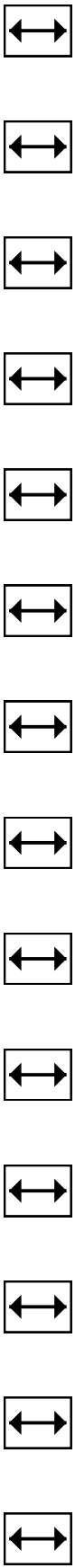
6. 14

7. 3

8. 6

9. 10

10. 5






Use the units provided to measure the width of each of the bars.

Answers



1. _____



2. _____



3. _____



4. _____



5. _____



6. _____



7. _____



8. _____





9. _____



10. _____



Use the units provided to measure the width of each of the bars.



Answers

1. 5

2. 10

3. 13

4. 6

5. 3


6. 15

7. 1

8. 14

9. 11

10. 4






Use the units provided to measure the width of each of the bars.

Answers



1. _____



2. _____



3. _____



4. _____



5. _____



6. _____



7. _____



8. _____



9. _____



10. _____



Use the units provided to measure the width of each of the bars.



Answers

1. 5

2. 6

3. 4

4. 1

5. 10

6. 9

7. 7

8. 8

9. 3

10. 2



Use the units provided to measure the width of each of the bars.

Answers



1. _____



2. _____



3. _____



4. _____



5. _____



6. _____



7. _____



8. _____



9. _____



10. _____



Use the units provided to measure the width of each of the bars.



Answers

1. 7

2. 3

3. 9

4. 1

5. 4

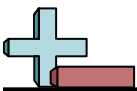
6. 10

7. 11

8. 8

9. 6

10. 5



Use the units provided to measure the width of each of the bars.



Answers

1. _____

2. _____

3. _____

4. _____

5. _____

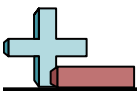
6. _____

7. _____

8. _____

9. _____

10. _____



Use the units provided to measure the width of each of the bars.



Answers

1. 10

2. 1

3. 8

4. 7

5. 4

6. 2

7. 9

8. 5

9. 6

10. 3

