





Write each array as a multiplication problem and solve.

Answers



Ex. 9 x 5 = 45

1. _____

2. _____

3. _____

4. _____

5. _____

6. _____

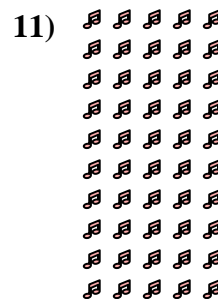



7. _____

8. _____

9. _____



10. _____

11. _____





Write each array as a multiplication problem and solve.



Answers

Ex. 9 × 5 = 45

1. 8 × 2 = 16

2. 6 × 9 = 54

3. 3 × 7 = 21

4. 2 × 9 = 18

5. 3 × 4 = 12

6. 8 × 10 = 80

7. 10 × 9 = 90

8. 2 × 10 = 20

9. 4 × 10 = 40

10. 3 × 6 = 18

11. 10 × 5 = 50

