

**Solve each problem.**

- 1) A bouquet has nine roses and three times as many tulips. How many tulips are in the bouquet?
- 2) For every room in a hotel there are three light bulbs. If a hotel has seven rooms how many light bulbs are there?
- 3) At the ring toss booth in a carnival, seven times as many people lost as won. If three people won how many people lost?
- 4) Cody had fourteen pictures on his Facebook page, seven times as many as Tiffany. How many pics did Tiffany have?
- 5) At a malt shop for every soda sold they also sell eight hamburgers. If they sold three sodas, how many burgers would they have sold?
- 6) A restaurant had sixteen items on the menu that were low calories and four that were high calorie. How many times more low calorie items are there than high calorie?
- 7) It takes Luke eight oranges to make a small glass of orange juice. He uses four times as many for a large glass. How many oranges does he use for a large glass?
- 8) An electric saw cost twenty-eight dollars, which is seven times as much as a manual saw costs. How much does the manual saw cost?
- 9) For a fundraiser Edward earned twenty-five dollars and Faye earned five dollars. Edward earned how many times more than Faye?
- 10) A new printer can print twenty pages in a minute. An old printer can print four pages a minute. The new printer is how many times faster than the old printer?
- 11) Paige used forty-nine beads to make a necklace and seven to make a bracelet. How many times more beads did she use for a necklace than for a bracelet?
- 12) John was doing sit-ups. He did eight times as many on Tuesday as he did on Monday. If he did forty-eight sit-ups on Tuesday, how many did he do on Monday?

Answers

1. _____
2. _____
3. _____
4. _____
5. _____
6. _____
7. _____
8. _____
9. _____
10. _____
11. _____
12. _____



Solve each problem.

- 1) A bouquet has nine roses and three times as many tulips. How many tulips are in the bouquet?
Compare - (Unknown Product)
- 2) For every room in a hotel there are three light bulbs. If a hotel has seven rooms how many light bulbs are there?
Compare - (Unknown Product)
- 3) At the ring toss booth in a carnival, seven times as many people lost as won. If three people won how many people lost?
Compare - (Unknown Product)
- 4) Cody had fourteen pictures on his Facebook page, seven times as many as Tiffany. How many pics did Tiffany have?
Compare - (Group Size Unknown)
- 5) At a malt shop for every soda sold they also sell eight hamburgers. If they sold three sodas, how many burgers would they have sold?
Compare - (Unknown Product)
- 6) A restaurant had sixteen items on the menu that were low calories and four that were high calorie. How many times more low calorie items are there than high calorie?
Compare - (Number Of Groups Unknown)
- 7) It takes Luke eight oranges to make a small glass of orange juice. He uses four times as many for a large glass. How many oranges does he use for a large glass?
Compare - (Unknown Product)
- 8) An electric saw cost twenty-eight dollars, which is seven times as much as a manual saw costs. How much does the manual saw cost?
Compare - (Group Size Unknown)
- 9) For a fundraiser Edward earned twenty-five dollars and Faye earned five dollars. Edward earned how many times more than Faye?
Compare - (Number Of Groups Unknown)
- 10) A new printer can print twenty pages in a minute. An old printer can print four pages a minute. The new printer is how many times faster than the old printer?
Compare - (Number Of Groups Unknown)
- 11) Paige used forty-nine beads to make a necklace and seven to make a bracelet. How many times more beads did she use for a necklace than for a bracelet?
Compare - (Number Of Groups Unknown)
- 12) John was doing sit-ups. He did eight times as many on Tuesday as he did on Monday. If he did forty-eight sit-ups on Tuesday, how many did he do on Monday?
Compare - (Group Size Unknown)

Answers

1. 27
2. 21
3. 21
4. 2
5. 24
6. 4
7. 32
8. 4
9. 5
10. 5
11. 7
12. 6



Solve each problem.

4	27	21	24	21
5	32	4	5	2

Answers

- 1) A bouquet has 9 roses and 3 times as many tulips. How many tulips are in the bouquet?
- 2) For every room in a hotel there are 3 light bulbs. If a hotel has 7 rooms how many light bulbs are there?
- 3) At the ring toss booth in a carnival, 7 times as many people lost as won. If 3 people won how many people lost?
- 4) Cody had 14 pictures on his Facebook page, 7 times as many as Tiffany. How many pics did Tiffany have?
- 5) At a malt shop for every soda sold they also sell 8 hamburgers. If they sold 3 sodas, how many burgers would they have sold?
- 6) A restaurant had 16 items on the menu that were low calories and 4 that were high calorie. How many times more low calorie items are there than high calorie?
- 7) It takes Luke 8 oranges to make a small glass of orange juice. He uses 4 times as many for a large glass. How many oranges does he use for a large glass?
- 8) An electric saw cost 28 dollars, which is 7 times as much as a manual saw costs. How much does the manual saw cost?
- 9) For a fundraiser Edward earned 25 dollars and Faye earned 5 dollars. Edward earned how many times more than Faye?
- 10) A new printer can print 20 pages in a minute. An old printer can print 4 pages a minute. The new printer is how many times faster than the old printer?

1. _____
2. _____
3. _____
4. _____
5. _____
6. _____
7. _____
8. _____
9. _____
10. _____



Solve each problem.

Answers

- 1) A store has twenty-one diet sodas and seven regular sodas. How many times more diet sodas did they have than regular sodas?
- 2) A pet store sold eighteen cats, which is three times as many as the number of dogs they sold. How many dogs did they sell?
- 3) At a malt shop they sold twelve burgers and six sodas. How many times as many burgers did they sell as sodas?
- 4) A library checks out three fiction books an hour. They check out eight times as many non-fiction books per hour. How many non-fiction books do they check out per hour?
- 5) A toy store sold two board games. For every board game sold they also sold eight video games. How many video games did they sell?
- 6) Will was doing sit-ups. He did four times as many on Tuesday as he did on Monday. If he did sixteen sit-ups on Tuesday, how many did he do on Monday?
- 7) On her MP3 player Robin had sixty-three pop songs, which is seven times the number of country songs she had. How many country songs did she have on her MP3 player?
- 8) A restaurant sold three times as many salads as they sold steaks. If they sold nine steaks, how many salads did they sell?
- 9) Isabel was playing basketball. She made two times as many shots as she missed. If she missed eight shots, how many shots did she make?
- 10) There were thirty-two adults in line at a movie theater. That is four times the number of children in line. How many children were in line?
- 11) Kaleb had fourteen pictures on his Facebook page while Maria only had seven. Kaleb had how many times more pictures than Maria?
- 12) Haley sent fifteen text messages a day, which is three times as many texts as Tom. How many texts did Tom send?

1. _____
2. _____
3. _____
4. _____
5. _____
6. _____
7. _____
8. _____
9. _____
10. _____
11. _____
12. _____



Solve each problem.

Answers

1) A store has twenty-one diet sodas and seven regular sodas. How many times more diet sodas did they have than regular sodas?

Compare - (Number Of Groups Unknown)

1. 3

2) A pet store sold eighteen cats, which is three times as many as the number of dogs they sold. How many dogs did they sell?

Compare - (Group Size Unknown)

2. 6

3) At a malt shop they sold twelve burgers and six sodas. How many times as many burgers did they sell as sodas?

Compare - (Number Of Groups Unknown)

3. 2

4) A library checks out three fiction books an hour. They check out eight times as many non-fiction books per hour. How many non-fiction books do they check out per hour?

Compare - (Unknown Product)

4. 24

5) A toy store sold two board games. For every board game sold they also sold eight video games. How many video games did they sell?

Compare - (Unknown Product)

5. 16

6) Will was doing sit-ups. He did four times as many on Tuesday as he did on Monday. If he did sixteen sit-ups on Tuesday, how many did he do on Monday?

Compare - (Group Size Unknown)

6. 4

7) On her MP3 player Robin had sixty-three pop songs, which is seven times the number of country songs she had. How many country songs did she have on her MP3 player?

Compare - (Group Size Unknown)

7. 9

8) A restaurant sold three times as many salads as they sold steaks. If they sold nine steaks, how many salads did they sell?

Compare - (Unknown Product)

8. 27

9) Isabel was playing basketball. She made two times as many shots as she missed. If she missed eight shots, how many shots did she make?

Compare - (Unknown Product)

9. 16

10) There were thirty-two adults in line at a movie theater. That is four times the number of children in line. How many children were in line?

Compare - (Group Size Unknown)

10. 8

11) Kaleb had fourteen pictures on his Facebook page while Maria only had seven. Kaleb had how many times more pictures than Maria?

Compare - (Number Of Groups Unknown)

11. 2

12) Haley sent fifteen text messages a day, which is three times as many texts as Tom. How many texts did Tom send?

Compare - (Group Size Unknown)

12. 5



Solve each problem.

8	27	4	16	9
6	2	3	16	24

Answers

- 1) A store has 21 diet sodas and 7 regular sodas. How many times more diet sodas did they have than regular sodas?
- 2) A pet store sold 18 cats, which is 3 times as many as the number of dogs they sold. How many dogs did they sell?
- 3) At a malt shop they sold 12 burgers and 6 sodas. How many times as many burgers did they sell as sodas?
- 4) A library checks out 3 fiction books an hour. They check out 8 times as many non-fiction books per hour. How many non-fiction books do they check out per hour?
- 5) A toy store sold 2 board games. For every board game sold they also sold 8 video games. How many video games did they sell?
- 6) Will was doing sit-ups. He did 4 times as many on Tuesday as he did on Monday. If he did 16 sit-ups on Tuesday, how many did he do on Monday?
- 7) On her MP3 player Robin had 63 pop songs, which is 7 times the number of country songs she had. How many country songs did she have on her MP3 player?
- 8) A restaurant sold 3 times as many salads as they sold steaks. If they sold 9 steaks, how many salads did they sell?
- 9) Isabel was playing basketball. She made 2 times as many shots as she missed. If she missed 8 shots, how many shots did she make?
- 10) There were 32 adults in line at a movie theater. That is 4 times the number of children in line. How many children were in line?

1. _____
2. _____
3. _____
4. _____
5. _____
6. _____
7. _____
8. _____
9. _____
10. _____



Solve each problem.

Answers

- 1) Larry's Lawn Care had two customers in the fall. In the summer they have three times as many customers. How many customers do they have in the summer?
- 2) Oliver was doing sit-ups. He did twenty-four on Tuesday and four on Monday. How many more sit-ups did he do on Tuesday than he did on Monday?
- 3) A restaurant had six items on the menu that were low calories and two that were high calorie. How many times more low calorie items are there than high calorie?
- 4) Luke was collecting cans for recycling. He collected five cans on Saturday and four times that many on Sunday. How many did he collect on Sunday?
- 5) At the carnival there were eighteen people in line at the roller coaster which is nine times as many as were in line at the Ferris Wheel. How many people were at the Ferris Wheel?
- 6) A restaurant sold six times as many salads as they sold steaks. If they sold two steaks, how many salads did they sell?
- 7) Mike collected twelve cans on Saturday and three on Sunday for recycling. Mike collected how many times more cans on Saturday than on Sunday?
- 8) At the soda shop they sold thirty-six hotdogs on Monday, six times as many as they sold on Tuesday. How many hotdogs did they sell on Tuesday?
- 9) At the soda shop they sold seven hotdogs on Monday. On Tuesday they sold four times as many hotdogs. How many hotdogs did they sell on Tuesday?
- 10) Gwen's new computer had ten gigs of memory, two times as much as her old computer. How much memory does her old computer have?
- 11) An electric saw cost forty-two dollars, which is seven times as much as a manual saw costs. How much does the manual saw cost?
- 12) Edward was counting his spare change. He had eight dimes and four quarters. How many times as many dimes does Edward have than quarters?

1. _____

2. _____

3. _____

4. _____

5. _____

6. _____

7. _____

8. _____

9. _____

10. _____

11. _____

12. _____



Solve each problem.

- 1) Larry's Lawn Care had two customers in the fall. In the summer they have three times as many customers. How many customers do they have in the summer?
Compare - (Unknown Product)
- 2) Oliver was doing sit-ups. He did twenty-four on Tuesday and four on Monday. How many more sit-ups did he do on Tuesday than he did on Monday?
Compare - (Number Of Groups Unknown)
- 3) A restaurant had six items on the menu that were low calories and two that were high calorie. How many times more low calorie items are there than high calorie?
Compare - (Number Of Groups Unknown)
- 4) Luke was collecting cans for recycling. He collected five cans on Saturday and four times that many on Sunday. How many did he collect on Sunday?
Compare - (Unknown Product)
- 5) At the carnival there were eighteen people in line at the roller coaster which is nine times as many as were in line at the Ferris Wheel. How many people were at the Ferris Wheel?
Compare - (Group Size Unknown)
- 6) A restaurant sold six times as many salads as they sold steaks. If they sold two steaks, how many salads did they sell?
Compare - (Unknown Product)
- 7) Mike collected twelve cans on Saturday and three on Sunday for recycling. Mike collected how many times more cans on Saturday than on Sunday?
Compare - (Number Of Groups Unknown)
- 8) At the soda shop they sold thirty-six hotdogs on Monday, six times as many as they sold on Tuesday. How many hotdogs did they sell on Tuesday?
Compare - (Group Size Unknown)
- 9) At the soda shop they sold seven hotdogs on Monday. On Tuesday they sold four times as many hotdogs. How many hotdogs did they sell on Tuesday?
Compare - (Unknown Product)
- 10) Gwen's new computer had ten gigs of memory, two times as much as her old computer. How much memory does her old computer have?
Compare - (Group Size Unknown)
- 11) An electric saw cost forty-two dollars, which is seven times as much as a manual saw costs. How much does the manual saw cost?
Compare - (Group Size Unknown)
- 12) Edward was counting his spare change. He had eight dimes and four quarters. How many times as many dimes does Edward have than quarters?
Compare - (Number Of Groups Unknown)

Answers

1. 6
2. 6
3. 3
4. 20
5. 2
6. 12
7. 4
8. 6
9. 28
10. 5
11. 6
12. 2



Solve each problem.

28	12	4	2	20
6	5	6	3	6

Answers

- Larry's Lawn Care had 2 customers in the fall. In the summer they have 3 times as many customers. How many customers do they have in the summer?
- Oliver was doing sit-ups. He did 24 on Tuesday and 4 on Monday. How many more sit-ups did he do on Tuesday than he did on Monday?
- A restaurant had 6 items on the menu that were low calories and 2 that were high calorie. How many times more low calorie items are there than high calorie?
- Luke was collecting cans for recycling. He collected 5 cans on Saturday and 4 times that many on Sunday. How many did he collect on Sunday?
- At the carnival there were 18 people in line at the roller coaster which is 9 times as many as were in line at the Ferris Wheel. How many people were at the Ferris Wheel?
- A restaurant sold 6 times as many salads as they sold steaks. If they sold 2 steaks, how many salads did they sell?
- Mike collected 12 cans on Saturday and 3 on Sunday for recycling. Mike collected how many times more cans on Saturday than on Sunday?
- At the soda shop they sold 36 hotdogs on Monday, 6 times as many as they sold on Tuesday. How many hotdogs did they sell on Tuesday?
- At the soda shop they sold 7 hotdogs on Monday. On Tuesday they sold 4 times as many hotdogs. How many hotdogs did they sell on Tuesday?
- Gwen's new computer had 10 gigs of memory, 2 times as much as her old computer. How much memory does her old computer have?

- _____
- _____
- _____
- _____
- _____
- _____
- _____
- _____
- _____
- _____



Solve each problem.

Answers

- 1) At the soda shop they sold three hotdogs on Monday. On Tuesday they sold three times as many hotdogs. How many hotdogs did they sell on Tuesday?
- 2) Nancy used seven beads to make a bracelet. To make a necklace it takes six times as many beads. How many beads does it take to make a necklace?
- 3) On her MP3 player Isabel had forty-eight pop songs and eight country songs. How many times more pop songs did she have than country songs?
- 4) Janet's new computer had sixteen gigs of memory, four times as much as her old computer. How much memory does her old computer have?
- 5) A restaurant had four items on the menu that were low calories. They had eight times as many high calorie items. How many high calorie items did they have?
- 6) At the ring toss booth in a carnival two people lost and eight people won. How many times as many people won as lost?
- 7) A restaurant sold two times as many salads as they sold steaks. If they sold six salads, how many steaks did they sell?
- 8) A library checks out thirty-six fiction books and nine non-fiction books an hour. How many times more fiction books do they check out than non-fiction books?
- 9) Carol used twenty-seven beads to make a necklace and nine to make a bracelet. How many times more beads did she use for a necklace than for a bracelet?
- 10) A pizza store sold five ham pizzas. They sold three times as many pepperoni pizzas. How many pepperoni pizzas did they sell?
- 11) At the ring toss booth in a carnival eight times as many people lost as won. If forty people lost, how many people won?
- 12) Faye sent seventy-two text messages a day, which is eight times as many texts as Sam. How many texts did Sam send?

1. _____

2. _____

3. _____

4. _____

5. _____

6. _____

7. _____

8. _____

9. _____

10. _____

11. _____

12. _____



Solve each problem.

1) At the soda shop they sold three hotdogs on Monday. On Tuesday they sold three times as many hotdogs. How many hotdogs did they sell on Tuesday?

Compare - (Unknown Product)

1. 9

2) Nancy used seven beads to make a bracelet. To make a necklace it takes six times as many beads. How many beads does it take to make a necklace?

Compare - (Unknown Product)

2. 42

3) On her MP3 player Isabel had forty-eight pop songs and eight country songs. How many times more pop songs did she have than country songs?

Compare - (Number Of Groups Unknown)

3. 6

4) Janet's new computer had sixteen gigs of memory, four times as much as her old computer. How much memory does her old computer have?

Compare - (Group Size Unknown)

4. 4

5) A restaurant had four items on the menu that were low calories. They had eight times as many high calorie items. How many high calorie items did they have?

Compare - (Unknown Product)

5. 32

6) At the ring toss booth in a carnival two people lost and eight people won. How many times as many people won as lost?

Compare - (Number Of Groups Unknown)

6. 4

7) A restaurant sold two times as many salads as they sold steaks. If they sold six salads, how many steaks did they sell?

Compare - (Group Size Unknown)

7. 3

8) A library checks out thirty-six fiction books and nine non-fiction books an hour. How many times more fiction books do they check out than non-fiction books?

Compare - (Number Of Groups Unknown)

8. 4

9) Carol used twenty-seven beads to make a necklace and nine to make a bracelet. How many times more beads did she use for a necklace than for a bracelet?

Compare - (Number Of Groups Unknown)

9. 3

10) A pizza store sold five ham pizzas. They sold three times as many pepperoni pizzas. How many pepperoni pizzas did they sell?

Compare - (Unknown Product)

10. 15

11) At the ring toss booth in a carnival eight times as many people lost as won. If forty people lost, how many people won?

Compare - (Group Size Unknown)

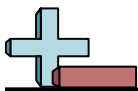
11. 5

12) Faye sent seventy-two text messages a day, which is eight times as many texts as Sam. How many texts did Sam send?

Compare - (Group Size Unknown)

12. 9

Answers



Solve each problem.

42	4	4	3	3
6	32	15	4	9

Answers

1) At the soda shop they sold 3 hotdogs on Monday. On Tuesday they sold 3 times as many hotdogs. How many hotdogs did they sell on Tuesday?

1. _____

2) Nancy used 7 beads to make a bracelet. To make a necklace it takes 6 times as many beads. How many beads does it take to make a necklace?

2. _____

3) On her MP3 player Isabel had 48 pop songs and 8 country songs. How many times more pop songs did she have than country songs?

3. _____

4) Janet's new computer had 16 gigs of memory, 4 times as much as her old computer. How much memory does her old computer have?

4. _____

5) A restaurant had 4 items on the menu that were low calories. They had 8 times as many high calorie items. How many high calorie items did they have?

5. _____

6) At the ring toss booth in a carnival 2 people lost and 8 people won. How many times as many people won as lost?

6. _____

7) A restaurant sold 2 times as many salads as they sold steaks. If they sold 6 salads, how many steaks did they sell?

7. _____

8) A library checks out 36 fiction books and 9 non-fiction books an hour. How many times more fiction books do they check out than non-fiction books?

8. _____

9) Carol used 27 beads to make a necklace and 9 to make a bracelet. How many times more beads did she use for a necklace than for a bracelet?

9. _____

10) A pizza store sold 5 ham pizzas. They sold 3 times as many pepperoni pizzas. How many pepperoni pizzas did they sell?

10. _____



Solve each problem.

Answers

- 1) Adam was counting his spare change. He had ten dimes and five quarters. How many times as many dimes does Adam have than quarters?
- 2) Roger was playing a video game. It took him three lives to beat the first world. It took seven times as many to beat the second world. How many lives did he use on the second world?
- 3) At a malt shop they sold forty-two burgers and six sodas. How many times as many burgers did they sell as sodas?
- 4) Maria's old computer had four gigs of memory. Her new computer has three times as much. How much memory does her new computer have?
- 5) A restaurant sold two times as many salads as they sold steaks. If they sold six steaks, how many salads did they sell?
- 6) For a fundraiser Jerry earned twenty dollars, which is five times as much as Robin earned. How much did Robin earn?
- 7) In college a math book costs nine times as much as a history book. If the math books costs seventy-two dollars, how much does the history book cost?
- 8) Henry was playing a video game. It took him sixty-three lives to beat the second world, nine times as many as it took him to beat the first world. How many lives did he use on the first world?
- 9) There were nine adults in line at a movie theater and two times as many children. How many children were in line?
- 10) Katie sent six text messages a day. Cody sent two a day. How many times as many texts did Katie send than Cody sent?
- 11) Paige had eight times as many dollars as her sister. Paige has twenty-four dollars. How much money does her sister have?
- 12) On her MP3 player Haley had twenty-seven pop songs, which is nine times the number of country songs she had. How many country songs did she have on her MP3 player?

1. _____
2. _____
3. _____
4. _____
5. _____
6. _____
7. _____
8. _____
9. _____
10. _____
11. _____
12. _____



Solve each problem.

Answers

1) Adam was counting his spare change. He had ten dimes and five quarters. How many times as many dimes does Adam have than quarters?

Compare - (Number Of Groups Unknown)

1. 2

2) Roger was playing a video game. It took him three lives to beat the first world. It took seven times as many to beat the second world. How many lives did he use on the second world?

Compare - (Unknown Product)

2. 21

3) At a malt shop they sold forty-two burgers and six sodas. How many times as many burgers did they sell as sodas?

Compare - (Number Of Groups Unknown)

3. 7

4) Maria's old computer had four gigs of memory. Her new computer has three times as much. How much memory does her new computer have?

Compare - (Unknown Product)

4. 12

5) A restaurant sold two times as many salads as they sold steaks. If they sold six steaks, how many salads did they sell?

Compare - (Unknown Product)

5. 12

6) For a fundraiser Jerry earned twenty dollars, which is five times as much as Robin earned. How much did Robin earn?

Compare - (Group Size Unknown)

6. 4

7) In college a math book costs nine times as much as a history book. If the math books costs seventy-two dollars, how much does the history book cost?

Compare - (Group Size Unknown)

7. 8

8) Henry was playing a video game. It took him sixty-three lives to beat the second world, nine times as many as it took him to beat the first world. How many lives did he use on the first world?

Compare - (Group Size Unknown)

8. 7

9) There were nine adults in line at a movie theater and two times as many children. How many children were in line?

Compare - (Unknown Product)

9. 18

10) Katie sent six text messages a day. Cody sent two a day. How many times as many texts did Katie send than Cody sent?

Compare - (Number Of Groups Unknown)

10. 3

11) Paige had eight times as many dollars as her sister. Paige has twenty-four dollars. How much money does her sister have?

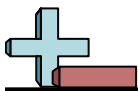
Compare - (Group Size Unknown)

11. 3

12) On her MP3 player Haley had twenty-seven pop songs, which is nine times the number of country songs she had. How many country songs did she have on her MP3 player?

Compare - (Group Size Unknown)

12. 3



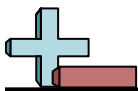
Solve each problem.

4	2	8	7	12
18	12	21	7	3

Answers

- 1) Adam was counting his spare change. He had 10 dimes and 5 quarters. How many times as many dimes does Adam have than quarters?
- 2) Roger was playing a video game. It took him 3 lives to beat the first world. It took 7 times as many to beat the second world. How many lives did he use on the second world?
- 3) At a malt shop they sold 42 burgers and 6 sodas. How many times as many burgers did they sell as sodas?
- 4) Maria's old computer had 4 gigs of memory. Her new computer has 3 times as much. How much memory does her new computer have?
- 5) A restaurant sold 2 times as many salads as they sold steaks. If they sold 6 steaks, how many salads did they sell?
- 6) For a fundraiser Jerry earned 20 dollars, which is 5 times as much as Robin earned. How much did Robin earn?
- 7) In college a math book costs 9 times as much as a history book. If the math books costs 72 dollars, how much does the history book cost?
- 8) Henry was playing a video game. It took him 63 lives to beat the second world, 9 times as many as it took him to beat the first world. How many lives did he use on the first world?
- 9) There were 9 adults in line at a movie theater and 2 times as many children. How many children were in line?
- 10) Katie sent 6 text messages a day. Cody sent 2 a day. How many times as many texts did Katie send than Cody sent?

1. _____
2. _____
3. _____
4. _____
5. _____
6. _____
7. _____
8. _____
9. _____
10. _____



Solve each problem.

Answers

- | | |
|--|-----------|
| 1) Dave was collecting cans for recycling. He collected sixteen cans on Saturday which is two times as many as he collected Sunday. How many did he collect on Sunday? | 1. _____ |
| 2) It takes Oliver fifty-four oranges to make a large glass of orange juice and nine for a small glass. He uses how many times as many oranges for a large glass as he does a small glass? | 2. _____ |
| 3) In college a math book costs three times as much as a history book. If the history book costs eight dollars, how much does the math book cost? | 3. _____ |
| 4) A store has sixty-three diet sodas and seven regular sodas. How many times more diet sodas did they have than regular sodas? | 4. _____ |
| 5) A flower store has six roses and two tulips. How many times more roses did they have than tulips? | 5. _____ |
| 6) A pet store sold nine cats. They sold eight times as many dogs as they sold cats. How many dogs did they sell? | 6. _____ |
| 7) In college a math book costs nine times as much as a history book. If the math books costs twenty-seven dollars, how much does the history book cost? | 7. _____ |
| 8) Debby had twenty dollars and her sister had four dollars. How many times more money does Debby have than her sister? | 8. _____ |
| 9) A pet store sold ten cats and two dogs. How many times more cats did they sell than dogs? | 9. _____ |
| 10) For every room in a hotel there are five light bulbs. If a hotel has six rooms how many light bulbs are there? | 10. _____ |
| 11) At school the new printer can print three pages in a minute. The old printer is five times as fast. How many pages can the old printer print in a minute? | 11. _____ |
| 12) At the soda shop they sold thirty-five hotdogs on Monday, seven times as many as they sold on Tuesday. How many hotdogs did they sell on Tuesday? | 12. _____ |



Solve each problem.

- 1) Dave was collecting cans for recycling. He collected sixteen cans on Saturday which is two times as many as he collected Sunday. How many did he collect on Sunday?
Compare - (Group Size Unknown)
- 2) It takes Oliver fifty-four oranges to make a large glass of orange juice and nine for a small glass. He uses how many times as many oranges for a large glass as he does a small glass?
Compare - (Number Of Groups Unknown)
- 3) In college a math book costs three times as much as a history book. If the history book costs eight dollars, how much does the math book cost?
Compare - (Unknown Product)
- 4) A store has sixty-three diet sodas and seven regular sodas. How many times more diet sodas did they have than regular sodas?
Compare - (Number Of Groups Unknown)
- 5) A flower store has six roses and two tulips. How many times more roses did they have than tulips?
Compare - (Number Of Groups Unknown)
- 6) A pet store sold nine cats. They sold eight times as many dogs as they sold cats. How many dogs did they sell?
Compare - (Unknown Product)
- 7) In college a math book costs nine times as much as a history book. If the math books costs twenty-seven dollars, how much does the history book cost?
Compare - (Group Size Unknown)
- 8) Debby had twenty dollars and her sister had four dollars. How many times more money does Debby have than her sister?
Compare - (Number Of Groups Unknown)
- 9) A pet store sold ten cats and two dogs. How many times more cats did they sell than dogs?
Compare - (Number Of Groups Unknown)
- 10) For every room in a hotel there are five light bulbs. If a hotel has six rooms how many light bulbs are there?
Compare - (Unknown Product)
- 11) At school the new printer can print three pages in a minute. The old printer is five times as fast. How many pages can the old printer print in a minute?
Compare - (Unknown Product)
- 12) At the soda shop they sold thirty-five hotdogs on Monday, seven times as many as they sold on Tuesday. How many hotdogs did they sell on Tuesday?
Compare - (Group Size Unknown)

Answers

1. 8
2. 6
3. 24
4. 9
5. 3
6. 72
7. 3
8. 5
9. 5
10. 30
11. 15
12. 5



Solve each problem.

30

3

72

5

5

3

8

9

6

24

Answers

- 1) Dave was collecting cans for recycling. He collected 16 cans on Saturday which is 2 times as many as he collected Sunday. How many did he collect on Sunday?
- 2) It takes Oliver 54 oranges to make a large glass of orange juice and 9 for a small glass. He uses how many times as many oranges for a large glass as he does a small glass?
- 3) In college a math book costs 3 times as much as a history book. If the history book costs 8 dollars, how much does the math book cost?
- 4) A store has 63 diet sodas and 7 regular sodas. How many times more diet sodas did they have than regular sodas?
- 5) A flower store has 6 roses and 2 tulips. How many times more roses did they have than tulips?
- 6) A pet store sold 9 cats. They sold 8 times as many dogs as they sold cats. How many dogs did they sell?
- 7) In college a math book costs 9 times as much as a history book. If the math books costs 27 dollars, how much does the history book cost?
- 8) Debby had 20 dollars and her sister had 4 dollars. How many times more money does Debby have than her sister?
- 9) A pet store sold 10 cats and 2 dogs. How many times more cats did they sell than dogs?
- 10) For every room in a hotel there are 5 light bulbs. If a hotel has 6 rooms how many light bulbs are there?

1. _____
2. _____
3. _____
4. _____
5. _____
6. _____
7. _____
8. _____
9. _____
10. _____



Solve each problem.

Answers

- 1) Tom was counting his spare change. He had six dimes and eight times as many quarters. How many quarters does Tom have?
- 2) An electric saw cost six times as much as a manual saw. A manual saw cost two dollars. How much does an electric saw cost?
- 3) A pet store sold thirty-five cats, which is five times as many as the number of dogs they sold. How many dogs did they sell?
- 4) At a malt shop they sold twenty burgers and five sodas. How many times as many burgers did they sell as sodas?
- 5) A restaurant sold three times as many salads as they sold steaks. If they sold eighteen salads, how many steaks did they sell?
- 6) A store has twenty-eight diet sodas and four regular sodas. How many times more diet sodas did they have than regular sodas?
- 7) In college a math book costs two times as much as a history book. If the math book costs twelve dollars, how much does the history book cost?
- 8) Faye's old computer had seven gigs of memory. Her new computer has six times as much. How much memory does her new computer have?
- 9) A movie theater sold forty-nine tickets on Saturday and seven tickets on Thursday. They sold how many times as many tickets on Saturday as they sold on Thursday?
- 10) A bouquet has three roses and eight times as many tulips. How many tulips are in the bouquet?
- 11) There were eighteen adults in line at a movie theater. That is two times the number of children in line. How many children were in line?
- 12) At the ring toss booth in a carnival five times as many people lost as won. If fifteen people lost, how many people won?

1. _____
2. _____
3. _____
4. _____
5. _____
6. _____
7. _____
8. _____
9. _____
10. _____
11. _____
12. _____



Solve each problem.

Answers

- | | |
|--|--|
| <p>1) Tom was counting his spare change. He had six dimes and eight times as many quarters. How many quarters does Tom have?
Compare - (Unknown Product)</p> <p>2) An electric saw cost six times as much as a manual saw. A manual saw cost two dollars. How much does an electric saw cost?
Compare - (Unknown Product)</p> <p>3) A pet store sold thirty-five cats, which is five times as many as the number of dogs they sold. How many dogs did they sell?
Compare - (Group Size Unknown)</p> <p>4) At a malt shop they sold twenty burgers and five sodas. How many times as many burgers did they sell as sodas?
Compare - (Number Of Groups Unknown)</p> <p>5) A restaurant sold three times as many salads as they sold steaks. If they sold eighteen salads, how many steaks did they sell?
Compare - (Group Size Unknown)</p> <p>6) A store has twenty-eight diet sodas and four regular sodas. How many times more diet sodas did they have than regular sodas?
Compare - (Number Of Groups Unknown)</p> <p>7) In college a math book costs two times as much as a history book. If the math book costs twelve dollars, how much does the history book cost?
Compare - (Group Size Unknown)</p> <p>8) Faye's old computer had seven gigs of memory. Her new computer has six times as much. How much memory does her new computer have?
Compare - (Unknown Product)</p> <p>9) A movie theater sold forty-nine tickets on Saturday and seven tickets on Thursday. They sold how many times as many tickets on Saturday as they sold on Thursday?
Compare - (Number Of Groups Unknown)</p> <p>10) A bouquet has three roses and eight times as many tulips. How many tulips are in the bouquet?
Compare - (Unknown Product)</p> <p>11) There were eighteen adults in line at a movie theater. That is two times the number of children in line. How many children were in line?
Compare - (Group Size Unknown)</p> <p>12) At the ring toss booth in a carnival five times as many people lost as won. If fifteen people lost, how many people won?
Compare - (Group Size Unknown)</p> | <p>1. <u>48</u></p> <p>2. <u>12</u></p> <p>3. <u>7</u></p> <p>4. <u>4</u></p> <p>5. <u>6</u></p> <p>6. <u>7</u></p> <p>7. <u>6</u></p> <p>8. <u>42</u></p> <p>9. <u>7</u></p> <p>10. <u>24</u></p> <p>11. <u>9</u></p> <p>12. <u>3</u></p> |
|--|--|



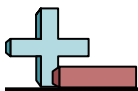
Solve each problem.

42	48	6	12	7
6	7	24	7	4

Answers

- Tom was counting his spare change. He had 6 dimes and 8 times as many quarters. How many quarters does Tom have?
- An electric saw cost 6 times as much as a manual saw. A manual saw cost 2 dollars. How much does an electric saw cost?
- A pet store sold 35 cats, which is 5 times as many as the number of dogs they sold. How many dogs did they sell?
- At a malt shop they sold 20 burgers and 5 sodas. How many times as many burgers did they sell as sodas?
- A restaurant sold 3 times as many salads as they sold steaks. If they sold 18 salads, how many steaks did they sell?
- A store has 28 diet sodas and 4 regular sodas. How many times more diet sodas did they have than regular sodas?
- In college a math book costs 2 times as much as a history book. If the math book costs 12 dollars, how much does the history book cost?
- Faye's old computer had 7 gigs of memory. Her new computer has 6 times as much. How much memory does her new computer have?
- A movie theater sold 49 tickets on Saturday and 7 tickets on Thursday. They sold how many times as many tickets on Saturday as they sold on Thursday?
- A bouquet has 3 roses and 8 times as many tulips. How many tulips are in the bouquet?

- _____
- _____
- _____
- _____
- _____
- _____
- _____
- _____
- _____
- _____



Solve each problem.

Answers

- 1) On her MP3 player Bianca had forty pop songs and five country songs. How many times more pop songs did she have than country songs?
- 2) At the soda shop they sold twenty hotdogs on Monday, four times as many as they sold on Tuesday. How many hotdogs did they sell on Tuesday?
- 3) A restaurant had six items on the menu that were low calories and two that were high calorie. How many times more low calorie items are there than high calorie?
- 4) On her MP3 player, Amy had seven pop songs. She had four times as many country songs. How many country songs did she have on her MP3 player?
- 5) Olivia used eighty-one beads to make a necklace and nine to make a bracelet. How many times more beads did she use for a necklace than for a bracelet?
- 6) Billy was doing sit-ups. He did forty-five on Tuesday and nine on Monday. How many more sit-ups did he do on Tuesday than he did on Monday?
- 7) At the soda shop they sold three hotdogs on Monday. On Tuesday they sold six times as many hotdogs. How many hotdogs did they sell on Tuesday?
- 8) Luke was counting his spare change. He had ten dimes, which is two times the number of quarters he has. How many quarters does Luke have?
- 9) An electric saw cost seventy-two dollars and a manual saw cost nine dollars. How many times as much does the electric saw cost as a manual saw?
- 10) Nancy's old computer had four gigs of memory. Her new computer has five times as much. How much memory does her new computer have?
- 11) For every room in a hotel there are four light bulbs. If a hotel has six rooms how many light bulbs are there?
- 12) At the carnival there were twelve people in line at the roller coaster which is two times as many as were in line at the Ferris Wheel. How many people were at the Ferris Wheel?

1. _____
2. _____
3. _____
4. _____
5. _____
6. _____
7. _____
8. _____
9. _____
10. _____
11. _____
12. _____

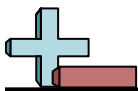


Solve each problem.

- 1) On her MP3 player Bianca had forty pop songs and five country songs. How many times more pop songs did she have than country songs?
Compare - (Number Of Groups Unknown)
- 2) At the soda shop they sold twenty hotdogs on Monday, four times as many as they sold on Tuesday. How many hotdogs did they sell on Tuesday?
Compare - (Group Size Unknown)
- 3) A restaurant had six items on the menu that were low calories and two that were high calorie. How many times more low calorie items are there than high calorie?
Compare - (Number Of Groups Unknown)
- 4) On her MP3 player, Amy had seven pop songs. She had four times as many country songs. How many country songs did she have on her MP3 player?
Compare - (Unknown Product)
- 5) Olivia used eighty-one beads to make a necklace and nine to make a bracelet. How many times more beads did she use for a necklace than for a bracelet?
Compare - (Number Of Groups Unknown)
- 6) Billy was doing sit-ups. He did forty-five on Tuesday and nine on Monday. How many more sit-ups did he do on Tuesday than he did on Monday?
Compare - (Number Of Groups Unknown)
- 7) At the soda shop they sold three hotdogs on Monday. On Tuesday they sold six times as many hotdogs. How many hotdogs did they sell on Tuesday?
Compare - (Unknown Product)
- 8) Luke was counting his spare change. He had ten dimes, which is two times the number of quarters he has. How many quarters does Luke have?
Compare - (Group Size Unknown)
- 9) An electric saw cost seventy-two dollars and a manual saw cost nine dollars. How many times as much does the electric saw cost as a manual saw?
Compare - (Number Of Groups Unknown)
- 10) Nancy's old computer had four gigs of memory. Her new computer has five times as much. How much memory does her new computer have?
Compare - (Unknown Product)
- 11) For every room in a hotel there are four light bulbs. If a hotel has six rooms how many light bulbs are there?
Compare - (Unknown Product)
- 12) At the carnival there were twelve people in line at the roller coaster which is two times as many as were in line at the Ferris Wheel. How many people were at the Ferris Wheel?
Compare - (Group Size Unknown)

Answers

1. 8
2. 5
3. 3
4. 28
5. 9
6. 5
7. 18
8. 5
9. 8
10. 20
11. 24
12. 6



Solve each problem.

28

5

8

5

18

9

8

20

5

3

Answers

- 1) On her MP3 player Bianca had 40 pop songs and 5 country songs. How many times more pop songs did she have than country songs?
- 2) At the soda shop they sold 20 hotdogs on Monday, 4 times as many as they sold on Tuesday. How many hotdogs did they sell on Tuesday?
- 3) A restaurant had 6 items on the menu that were low calories and 2 that were high calorie. How many times more low calorie items are there than high calorie?
- 4) On her MP3 player, Amy had 7 pop songs. She had 4 times as many country songs. How many country songs did she have on her MP3 player?
- 5) Olivia used 81 beads to make a necklace and 9 to make a bracelet. How many times more beads did she use for a necklace than for a bracelet?
- 6) Billy was doing sit-ups. He did 45 on Tuesday and 9 on Monday. How many more sit-ups did he do on Tuesday than he did on Monday?
- 7) At the soda shop they sold 3 hotdogs on Monday. On Tuesday they sold 6 times as many hotdogs. How many hotdogs did they sell on Tuesday?
- 8) Luke was counting his spare change. He had 10 dimes, which is 2 times the number of quarters he has. How many quarters does Luke have?
- 9) An electric saw cost 72 dollars and a manual saw cost 9 dollars. How many times as much does the electric saw cost as a manual saw?
- 10) Nancy's old computer had 4 gigs of memory. Her new computer has 5 times as much. How much memory does her new computer have?

1. _____
2. _____
3. _____
4. _____
5. _____
6. _____
7. _____
8. _____
9. _____
10. _____



Solve each problem.

Answers

- 1) Lana's new computer had twenty-one gigs of memory. Her old computer had seven gigs. How many times more memory does her new computer have than her old computer had?
- 2) In college a math book costs six times as much as a history book. If the history book costs seven dollars, how much does the math book cost?
- 3) A toy store sold twelve board games which is four times as many as the number of video games they sold. How many video games did they sell?
- 4) It takes Cody nine oranges to make a small glass of orange juice. He uses four times as many for a large glass. How many oranges does he use for a large glass?
- 5) A restaurant sold six times as many salads as they sold steaks. If they sold fifty-four salads, how many steaks did they sell?
- 6) Carol had eighteen dollars and her sister had three dollars. How many times more money does Carol have than her sister?
- 7) Gwen sent forty text messages a day, which is five times as many texts as Tom. How many texts did Tom send?
- 8) An electric saw cost fourteen dollars, which is seven times as much as a manual saw costs. How much does the manual saw cost?
- 9) There were fifteen adults and five children in line at a movie theater. How many times more adults were in the line than children?
- 10) A movie theater sold three tickets on Thursday. The sold two times that many on Saturday. How many tickets did they sell on Saturday?
- 11) A movie theater sold twenty tickets on Saturday and five tickets on Thursday. They sold how many times as many tickets on Saturday as they sold on Thursday?
- 12) A pizza store sold nine ham pizzas. They sold eight times as many pepperoni pizzas. How many pepperoni pizzas did they sell?

1. _____
2. _____
3. _____
4. _____
5. _____
6. _____
7. _____
8. _____
9. _____
10. _____
11. _____
12. _____



Solve each problem.

Answers

- | | |
|--|---|
| <p>1) Lana's new computer had twenty-one gigs of memory. Her old computer had seven gigs. How many times more memory does her new computer have than her old computer had?
Compare - (Number Of Groups Unknown)</p> <p>2) In college a math book costs six times as much as a history book. If the history book costs seven dollars, how much does the math book cost?
Compare - (Unknown Product)</p> <p>3) A toy store sold twelve board games which is four times as many as the number of video games they sold. How many video games did they sell?
Compare - (Group Size Unknown)</p> <p>4) It takes Cody nine oranges to make a small glass of orange juice. He uses four times as many for a large glass. How many oranges does he use for a large glass?
Compare - (Unknown Product)</p> <p>5) A restaurant sold six times as many salads as they sold steaks. If they sold fifty-four salads, how many steaks did they sell?
Compare - (Group Size Unknown)</p> <p>6) Carol had eighteen dollars and her sister had three dollars. How many times more money does Carol have than her sister?
Compare - (Number Of Groups Unknown)</p> <p>7) Gwen sent forty text messages a day, which is five times as many texts as Tom. How many texts did Tom send?
Compare - (Group Size Unknown)</p> <p>8) An electric saw cost fourteen dollars, which is seven times as much as a manual saw costs. How much does the manual saw cost?
Compare - (Group Size Unknown)</p> <p>9) There were fifteen adults and five children in line at a movie theater. How many times more adults were in the line than children?
Compare - (Number Of Groups Unknown)</p> <p>10) A movie theater sold three tickets on Thursday. The sold two times that many on Saturday. How many tickets did they sell on Saturday?
Compare - (Unknown Product)</p> <p>11) A movie theater sold twenty tickets on Saturday and five tickets on Thursday. They sold how many times as many tickets on Saturday as they sold on Thursday?
Compare - (Number Of Groups Unknown)</p> <p>12) A pizza store sold nine ham pizzas. They sold eight times as many pepperoni pizzas. How many pepperoni pizzas did they sell?
Compare - (Unknown Product)</p> | <p>1. <u> 3 </u></p> <p>2. <u> 42 </u></p> <p>3. <u> 3 </u></p> <p>4. <u> 36 </u></p> <p>5. <u> 9 </u></p> <p>6. <u> 6 </u></p> <p>7. <u> 8 </u></p> <p>8. <u> 2 </u></p> <p>9. <u> 3 </u></p> <p>10. <u> 6 </u></p> <p>11. <u> 4 </u></p> <p>12. <u> 72 </u></p> |
|--|---|



Solve each problem.

36

42

8

6

2

6

3

3

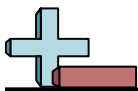
3

9

Answers

- 1) Lana's new computer had 21 gigs of memory. Her old computer had 7 gigs. How many times more memory does her new computer have than her old computer had?
- 2) In college a math book costs 6 times as much as a history book. If the history book costs 7 dollars, how much does the math book cost?
- 3) A toy store sold 12 board games which is 4 times as many as the number of video games they sold. How many video games did they sell?
- 4) It takes Cody 9 oranges to make a small glass of orange juice. He uses 4 times as many for a large glass. How many oranges does he use for a large glass?
- 5) A restaurant sold 6 times as many salads as they sold steaks. If they sold 54 salads, how many steaks did they sell?
- 6) Carol had 18 dollars and her sister had 3 dollars. How many times more money does Carol have than her sister?
- 7) Gwen sent 40 text messages a day, which is 5 times as many texts as Tom. How many texts did Tom send?
- 8) An electric saw cost 14 dollars, which is 7 times as much as a manual saw costs. How much does the manual saw cost?
- 9) There were 15 adults and 5 children in line at a movie theater. How many times more adults were in the line than children?
- 10) A movie theater sold 3 tickets on Thursday. The sold 2 times that many on Saturday. How many tickets did they sell on Saturday?

1. _____
2. _____
3. _____
4. _____
5. _____
6. _____
7. _____
8. _____
9. _____
10. _____



Solve each problem.

Answers

- 1) Vanessa was playing basketball. She made six times as many shots as she missed. If she missed five shots, how many shots did she make?
- 2) At the soda shop they sold nine hotdogs on Monday. On Tuesday they sold seven times as many hotdogs. How many hotdogs did they sell on Tuesday?
- 3) A toy store sold nine board games. For every board game sold they also sold four video games. How many video games did they sell?
- 4) Bianca's old computer had seven gigs of memory. Her new computer has eight times as much. How much memory does her new computer have?
- 5) Amy used seven beads to make a bracelet. To make a necklace it takes four times as many beads. How many beads does it take to make a necklace?
- 6) A toy store sold forty-two board games which is six times as many as the number of video games they sold. How many video games did they sell?
- 7) Isabel's new computer had twenty-five gigs of memory. Her old computer had five gigs. How many times more memory does her new computer have than her old computer had?
- 8) A restaurant had eighty-one items on the menu that were low calories, which is nine times the number of high calorie items on the menu. How many high calorie items did they have?
- 9) In college a math book costs thirty-two dollars and a history book costs eight dollars. The math book is how many times more expensive than a history book?
- 10) A library checks out thirty-six fiction books an hour. That is six times the number of non-fiction books they check out. How many non-fiction books do they check out per hour?
- 11) George had six pictures on his Facebook page, two times as many as Sarah. How many pics did Sarah have?
- 12) A library checks out six fiction books and three non-fiction books an hour. How many times more fiction books do they check out than non-fiction books?

1. _____

2. _____

3. _____

4. _____

5. _____

6. _____

7. _____

8. _____

9. _____

10. _____

11. _____

12. _____



Solve each problem.

- 1) Vanessa was playing basketball. She made six times as many shots as she missed. If she missed five shots, how many shots did she make?
Compare - (Unknown Product)
- 2) At the soda shop they sold nine hotdogs on Monday. On Tuesday they sold seven times as many hotdogs. How many hotdogs did they sell on Tuesday?
Compare - (Unknown Product)
- 3) A toy store sold nine board games. For every board game sold they also sold four video games. How many video games did they sell?
Compare - (Unknown Product)
- 4) Bianca's old computer had seven gigs of memory. Her new computer has eight times as much. How much memory does her new computer have?
Compare - (Unknown Product)
- 5) Amy used seven beads to make a bracelet. To make a necklace it takes four times as many beads. How many beads does it take to make a necklace?
Compare - (Unknown Product)
- 6) A toy store sold forty-two board games which is six times as many as the number of video games they sold. How many video games did they sell?
Compare - (Group Size Unknown)
- 7) Isabel's new computer had twenty-five gigs of memory. Her old computer had five gigs. How many times more memory does her new computer have than her old computer had?
Compare - (Number Of Groups Unknown)
- 8) A restaurant had eighty-one items on the menu that were low calories, which is nine times the number of high calorie items on the menu. How many high calorie items did they have?
Compare - (Group Size Unknown)
- 9) In college a math book costs thirty-two dollars and a history book costs eight dollars. The math book is how many times more expensive than a history book?
Compare - (Number Of Groups Unknown)
- 10) A library checks out thirty-six fiction books an hour. That is six times the number of non-fiction books they check out. How many non-fiction books do they check out per hour?
Compare - (Group Size Unknown)
- 11) George had six pictures on his Facebook page, two times as many as Sarah. How many pics did Sarah have?
Compare - (Group Size Unknown)
- 12) A library checks out six fiction books and three non-fiction books an hour. How many times more fiction books do they check out than non-fiction books?
Compare - (Number Of Groups Unknown)

Answers

1. 30
2. 63
3. 36
4. 56
5. 28
6. 7
7. 5
8. 9
9. 4
10. 6
11. 3
12. 2



Solve each problem.

28	7	36	63	56
30	6	5	9	4

Answers

- 1) Vanessa was playing basketball. She made 6 times as many shots as she missed. If she missed 5 shots, how many shots did she make?
- 2) At the soda shop they sold 9 hotdogs on Monday. On Tuesday they sold 7 times as many hotdogs. How many hotdogs did they sell on Tuesday?
- 3) A toy store sold 9 board games. For every board game sold they also sold 4 video games. How many video games did they sell?
- 4) Bianca's old computer had 7 gigs of memory. Her new computer has 8 times as much. How much memory does her new computer have?
- 5) Amy used 7 beads to make a bracelet. To make a necklace it takes 4 times as many beads. How many beads does it take to make a necklace?
- 6) A toy store sold 42 board games which is 6 times as many as the number of video games they sold. How many video games did they sell?
- 7) Isabel's new computer had 25 gigs of memory. Her old computer had 5 gigs. How many times more memory does her new computer have than her old computer had?
- 8) A restaurant had 81 items on the menu that were low calories, which is 9 times the number of high calorie items on the menu. How many high calorie items did they have?
- 9) In college a math book costs 32 dollars and a history book costs 8 dollars. The math book is how many times more expensive than a history book?
- 10) A library checks out 36 fiction books an hour. That is 6 times the number of non-fiction books they check out. How many non-fiction books do they check out per hour?

1. _____
2. _____
3. _____
4. _____
5. _____
6. _____
7. _____
8. _____
9. _____
10. _____