




Solve each problem.


Answers

1) Which letter best shows -100?




1. _____

2) Which letter best shows -120?



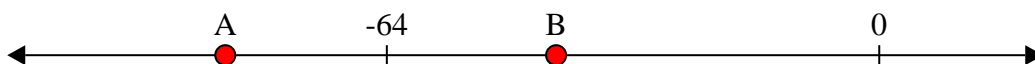
2. _____

3) Which letter best shows -98?




3. _____

4) Which letter best shows -85?




4. _____

5) Which letter best shows -48?



5. _____

6) Which letter best shows -108?




6. _____

7) Which letter best shows -35?




7. _____

8) Which letter best shows -21?



8. _____

9) Which letter best shows -20?



9. _____

10) Which letter best shows -119?




10. _____




Solve each problem.

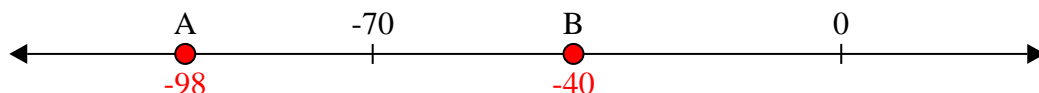
1) Which letter best shows -100?



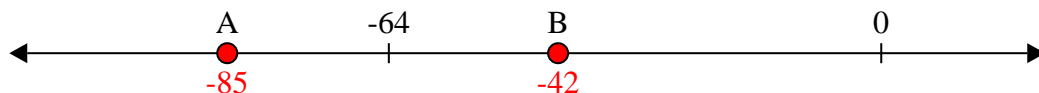
2) Which letter best shows -120?




3) Which letter best shows -98?




4) Which letter best shows -85?



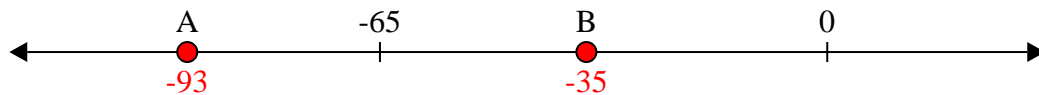
5) Which letter best shows -48?



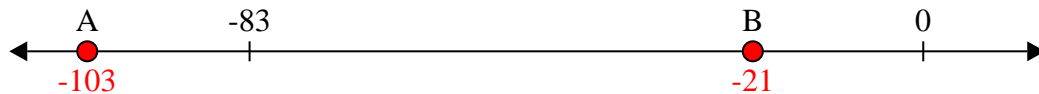
6) Which letter best shows -108?




7) Which letter best shows -35?



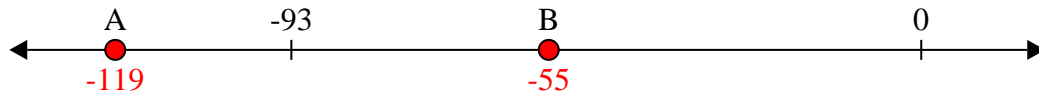
8) Which letter best shows -21?



9) Which letter best shows -20?



10) Which letter best shows -119?



Answers

1. **A**

2. **A**

3. **A**

4. **A**

5. **B**

6. **A**

7. **B**

8. **B**

9. **B**

10. **A**