



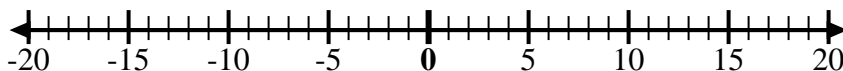
Use the numberlines to show each expression and solve.

Ex) Start at 4 and add -8



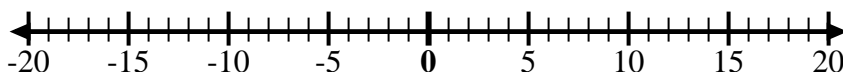
Ex. $4 + -8 = -4$

1) Start at -9 and add 5



1. _____

2) Start at -6 and add -4



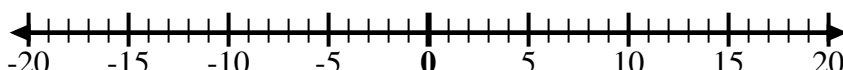
2. _____

3) Start at -5 and add 4



3. _____

4) Start at -7 and add -2



4. _____

5) Start at 9 and add -12



5. _____

6) Start at 7 and add -3



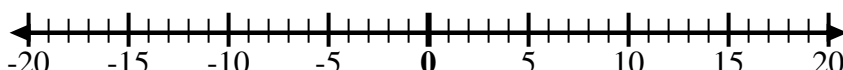
6. _____

7) Start at 1 and add -11



7. _____

8) Start at -2 and add -3



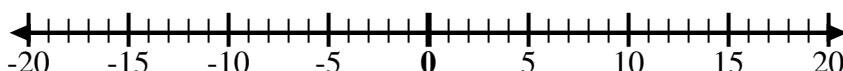
8. _____

9) Start at -3 and add -3



9. _____

10) Start at -5 and add 2



10. _____

11) Start at -10 and add 6



11. _____

12) Start at -4 and add 8



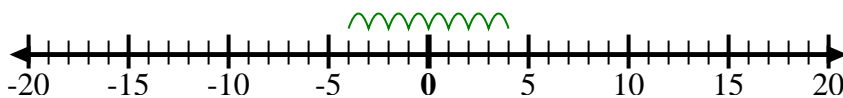
12. _____

Answers



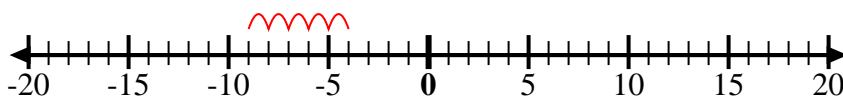
Use the numberlines to show each expression and solve.

Ex) Start at 4 and add -8



Ex. $4 + -8 = -4$

1) Start at -9 and add 5



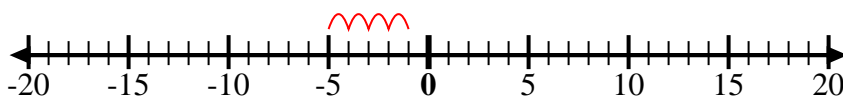
1. $-9 + 5 = -4$

2) Start at -6 and add -4



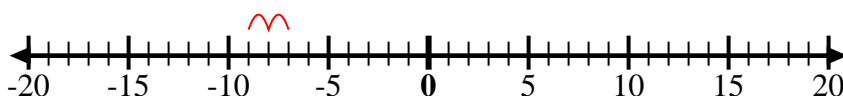
2. $-6 + -4 = -10$

3) Start at -5 and add 4



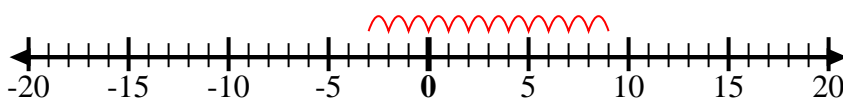
3. $-5 + 4 = -1$

4) Start at -7 and add -2



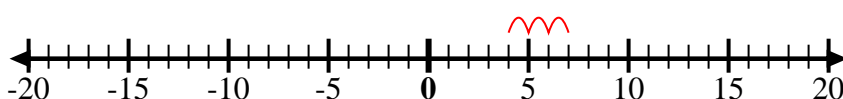
4. $-7 + -2 = -9$

5) Start at 9 and add -12



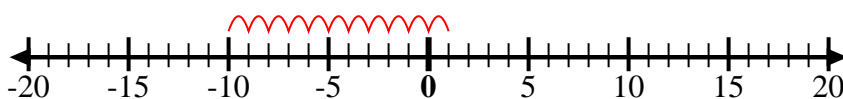
5. $9 + -12 = -3$

6) Start at 7 and add -3



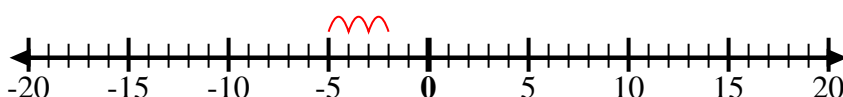
6. $7 + -3 = 4$

7) Start at 1 and add -11



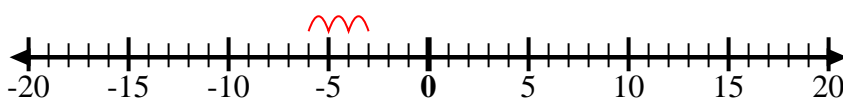
7. $1 + -11 = -10$

8) Start at -2 and add -3



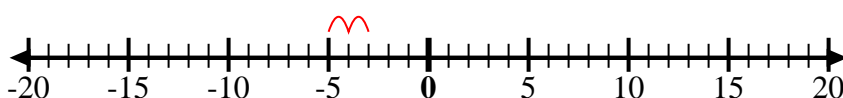
8. $-2 + -3 = -5$

9) Start at -3 and add -3



9. $-3 + -3 = -6$

10) Start at -5 and add 2



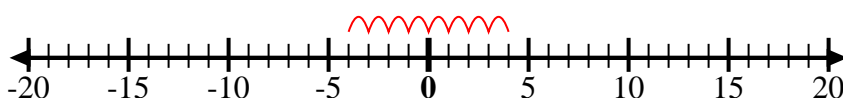
10. $-5 + 2 = -3$

11) Start at -10 and add 6



11. $-10 + 6 = -4$

12) Start at -4 and add 8



12. $-4 + 8 = 4$

Answers