



Use the numberlines to show each expression and solve.

Ex) Start at -8 and add -2



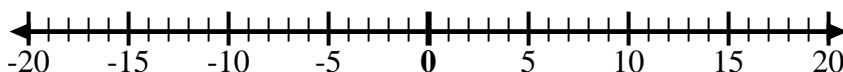
Ex. $-8 + -2 = -10$

1) Start at -3 and add 10



1. _____

2) Start at -6 and add -3



2. _____

3) Start at -4 and add 14



3. _____

4) Start at 1 and add -11



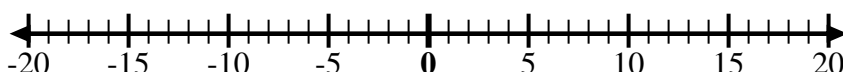
4. _____

5) Start at 3 and add -10



5. _____

6) Start at -1 and add -8



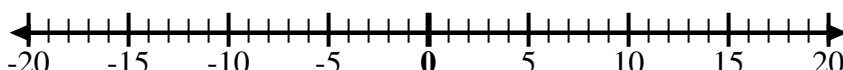
6. _____

7) Start at -1 and add 10



7. _____

8) Start at -4 and add -4



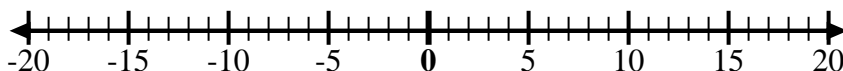
8. _____

9) Start at 7 and add -4



9. _____

10) Start at -4 and add -3



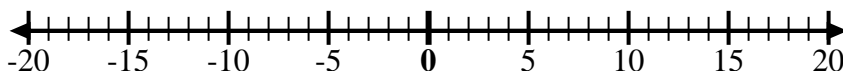
10. _____

11) Start at -8 and add 14



11. _____

12) Start at -7 and add -2



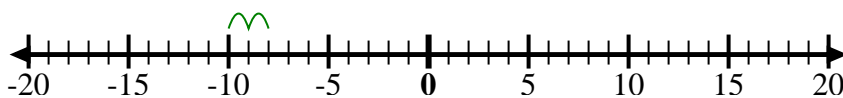
12. _____

Answers



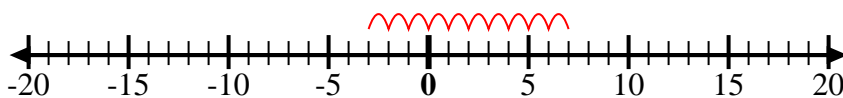
Use the numberlines to show each expression and solve.

Ex) Start at -8 and add -2



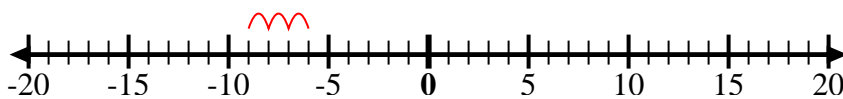
Ex. $-8 + -2 = -10$

1) Start at -3 and add 10



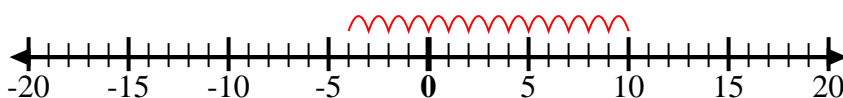
1. $-3 + 10 = 7$

2) Start at -6 and add -3



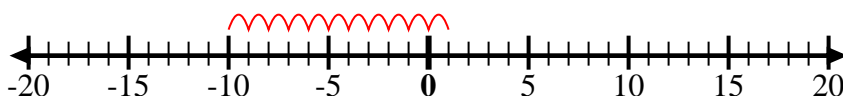
2. $-6 + -3 = -9$

3) Start at -4 and add 14



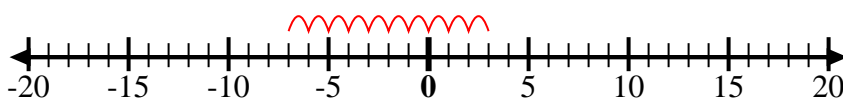
3. $-4 + 14 = 10$

4) Start at 1 and add -11



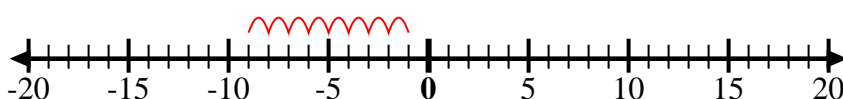
4. $1 + -11 = -10$

5) Start at 3 and add -10



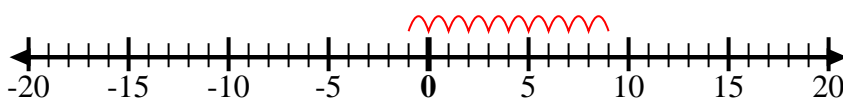
5. $3 + -10 = -7$

6) Start at -1 and add -8



6. $-1 + -8 = -9$

7) Start at -1 and add 10



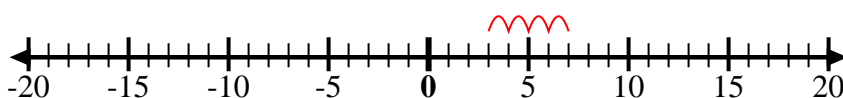
7. $-1 + 10 = 9$

8) Start at -4 and add -4



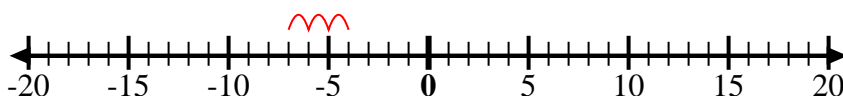
8. $-4 + -4 = -8$

9) Start at 7 and add -4



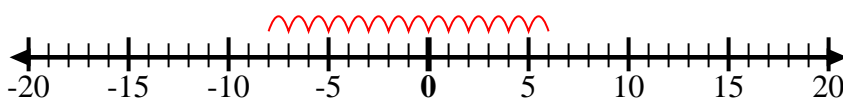
9. $7 + -4 = 3$

10) Start at -4 and add -3



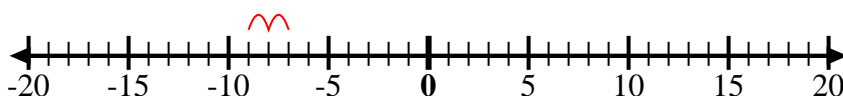
10. $-4 + -3 = -7$

11) Start at -8 and add 14



11. $-8 + 14 = 6$

12) Start at -7 and add -2



12. $-7 + -2 = -9$

Answers