



Use the double numberline to solve the problems.

Answers

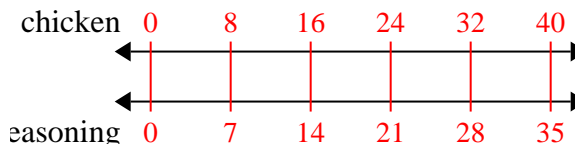
- 1) A recipe call for 7 teaspoons of seasoning for every 8 batches of chicken. If you have 40 batches of chicken, how many teaspoons of seasoning will you need?
- chicken
←————→
seasoning
←————→
- 2) In a video game for every 6 enemies defeat, you earned 8 points. If you defeated 24 enemies, how many points would you have earned?
- enemies
←————→
points
←————→
- 3) A store had a sale where you could get 8 bags of cashews for \$3. If you wanted to buy 56 bags, how much would it cost?
- cashews
←————→
price
←————→
- 4) A sloppy joe restaurant gave 3 napkins for every 10 items ordered. If someone bought 50 items, how many napkins should they get?
- item
←————→
napkins
←————→
- 5) For every 4 cans Adam collected for recycling he earned 5 cents. After he collected 16 cans, how much money would he have earned?
- cans
←————→
money
←————→
- 6) A builder could get 9 sheets of sheetrock for \$8. If he bought 81 sheets, how much money would he have spent?
- heetrock
←————→
price
←————→
- 7) A box of candy had 8 cherry pieces for every 9 lemon pieces. If the box had 90 lemon pieces, how many cherry pieces would there be?
- lemon
←————→
cherry
←————→
- 8) On her MP3 player for every 10 pop song Sarah had she also had 2 country song. If she has 80 pop songs on her MP3 player, how many country songs does she have?
- pop
←————→
country
←————→
1. _____
2. _____
3. _____
4. _____
5. _____
6. _____
7. _____
8. _____



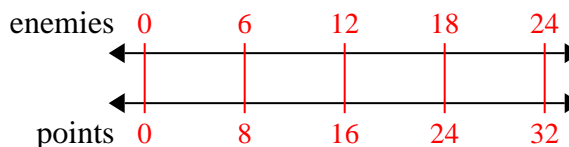
Use the double numberline to solve the problems.

Answers

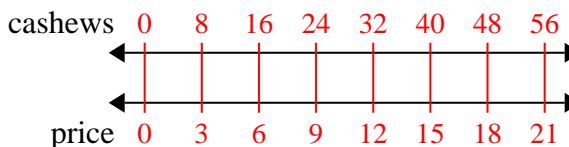
- 1) A recipe call for 7 teaspoons of seasoning for every 8 batches of chicken. If you have 40 batches of chicken, how many teaspoons of seasoning will you need?

1. 35

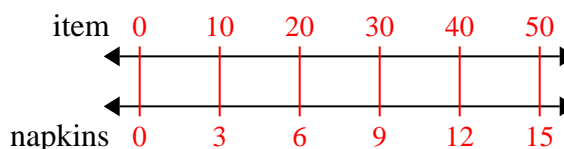
- 2) In a video game for every 6 enemies defeat, you earned 8 points. If you defeated 24 enemies, how many points would you have earned?

3. 214. 15

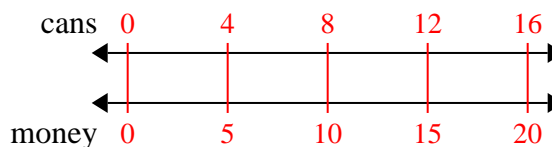
- 3) A store had a sale where you could get 8 bags of cashews for \$3. If you wanted to buy 56 bags, how much would it cost?

5. 206. 727. 80

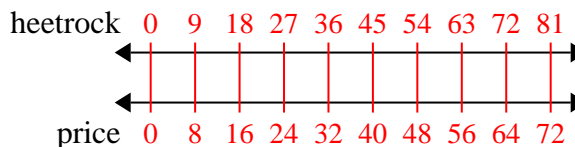
- 4) A sloppy joe restaurant gave 3 napkins for every 10 items ordered. If someone bought 50 items, how many napkins should they get?

8. 16

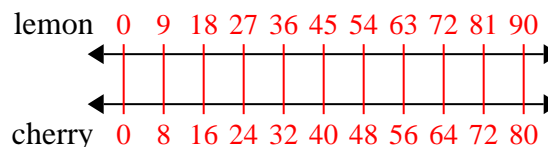
- 5) For every 4 cans Adam collected for recycling he earned 5 cents. After he collected 16 cans, how much money would he have earned?



- 6) A builder could get 9 sheets of sheetrock for \$8. If he bought 81 sheets, how much money would he have spent?



- 7) A box of candy had 8 cherry pieces for every 9 lemon pieces. If the box had 90 lemon pieces, how many cherry pieces would there be?



- 8) On her MP3 player for every 10 pop song Sarah had she also had 2 country song. If she has 80 pop songs on her MP3 player, how many country songs does she have?

