




Use the double numberline to solve the problems.

Answers

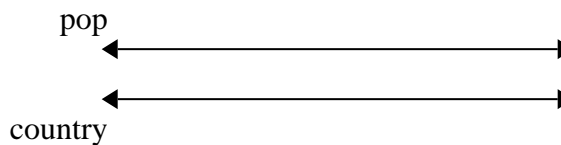
1) A builder could get 3 sheets of sheetrock for \$2. If he bought 24 sheets, how much money would he have spent?



1. _____

2. _____


2) On her MP3 player for every 7 pop song Isabel had she also had 9 country song. If she has 28 pop songs on her MP3 player, how many country songs does she have?



3. _____

4. _____

3) For every 6 cans Frank collected for recycling he earned 2 cents. After he collected 12 cans, how much money would he have earned?

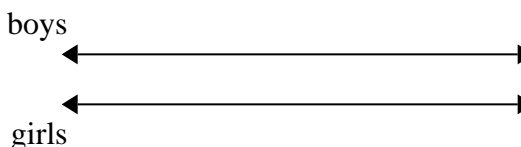


5. _____

6. _____

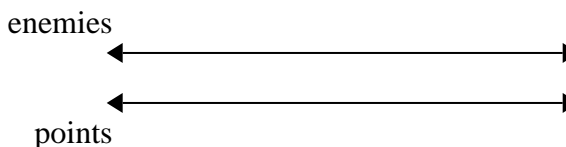
7. _____

4) The ratio of boys to girls at the park was 5 to 6. If there were 30 boys, how many girls were there?




8. _____

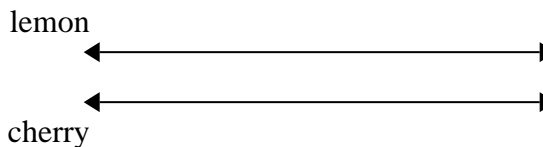
5) In a video game for every 3 enemies defeat, you earned 2 points. If you defeated 15 enemies, how many points would you have earned?




6) A recipe call for 10 teaspoons of seasoning for every 2 batches of chicken. If you have 16 batches of chicken, how many teaspoons of seasoning will you need?



7) A box of candy had 7 cherry pieces for every 2 lemon pieces. If the box had 8 lemon pieces, how many cherry pieces would there be?



8) At a school fundraiser for every 8 boxes of chocolate sold you earn 9 points. If you were to sell 80 boxes, how many points would you have earned?



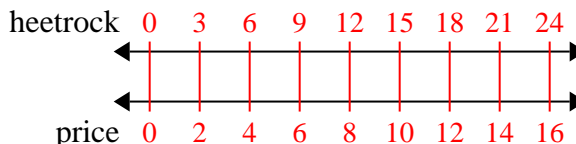


Use the double numberline to solve the problems.

Answers

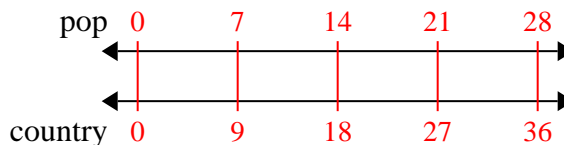
1)

A builder could get 3 sheets of sheetrock for \$2. If he bought 24 sheets, how much money would he have spent?

1. 16

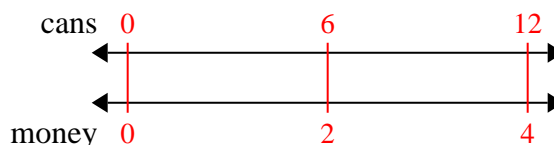
2)

On her MP3 player for every 7 pop song Isabel had she also had 9 country song. If she has 28 pop songs on her MP3 player, how many country songs does she have?

3. 4

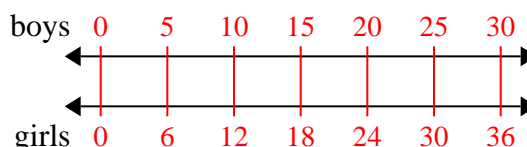
3)

For every 6 cans Frank collected for recycling he earned 2 cents. After he collected 12 cans, how much money would he have earned?

4. 36

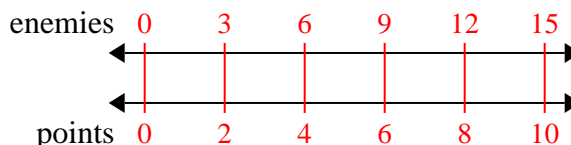
4)

The ratio of boys to girls at the park was 5 to 6. If there were 30 boys, how many girls were there?

5. 10

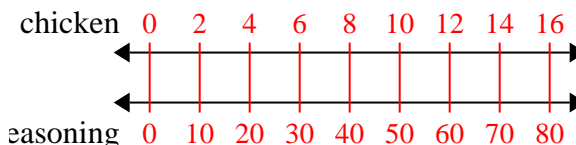
5)

In a video game for every 3 enemies defeat, you earned 2 points. If you defeated 15 enemies, how many points would you have earned?

6. 80

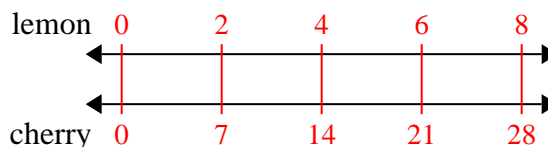
6)

A recipe call for 10 teaspoons of seasoning for every 2 batches of chicken. If you have 16 batches of chicken, how many teaspoons of seasoning will you need?

7. 28

7)

A box of candy had 7 cherry pieces for every 2 lemon pieces. If the box had 8 lemon pieces, how many cherry pieces would there be?

8. 90

8)

At a school fundraiser for every 8 boxes of chocolate sold you earn 9 points. If you were to sell 80 boxes, how many points would you have earned?

