
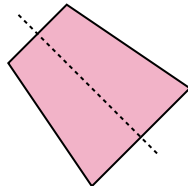


Determine if the line through the figure is a line of symmetry.

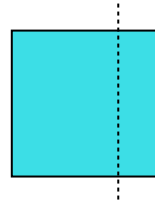
Ex)



1)



2)



Answers

Ex. no

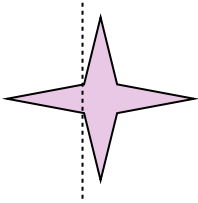
1. _____

2. _____

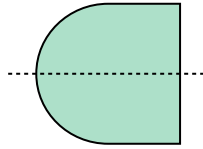
3. _____

4. _____

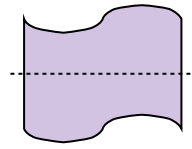
3)



4)



5)



5. _____


6. _____

7. _____

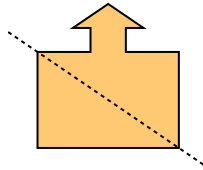
8. _____

9. _____

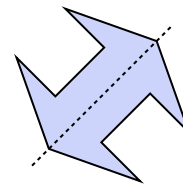
6)



7)



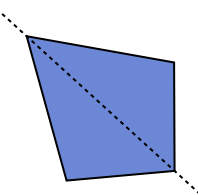
8)



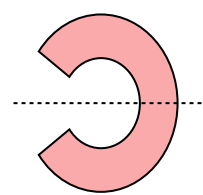
10. _____

11. _____

9)



10)



11)

