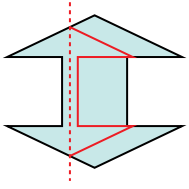




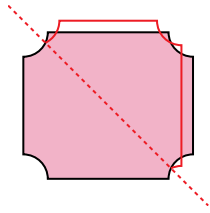


Determine if the line through the figure is a line of symmetry.

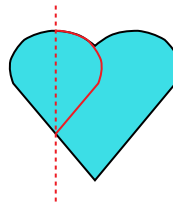
Ex)



1)



2)



Answers

Ex. no

1. no

2. no

3. yes

4. yes

5. yes

6. yes

7. no

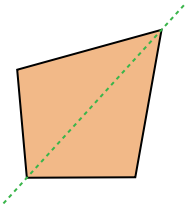
8. yes

9. yes

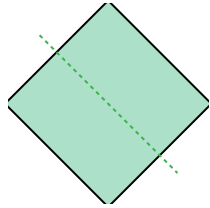
10. no

11. no

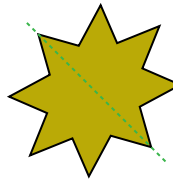
3)



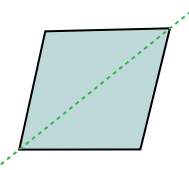
4)



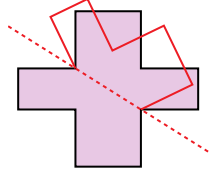
5)




6)



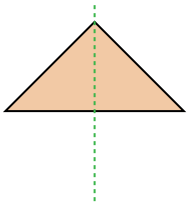
7)



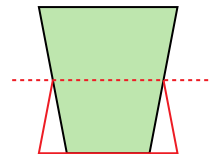
8)



9)



10)



11)

