



Determine the value of each set of tally marks.

Answers

1)

1. \_\_\_\_\_

2)

2. \_\_\_\_\_

3)

3. \_\_\_\_\_

4)

4. \_\_\_\_\_

5)

5. \_\_\_\_\_

6)

6. \_\_\_\_\_

7)

7. \_\_\_\_\_

8)

8. \_\_\_\_\_

9)

9. \_\_\_\_\_

10)

10. \_\_\_\_\_

11)

11. \_\_\_\_\_

12)

12. \_\_\_\_\_

13)

13. \_\_\_\_\_

14)

14. \_\_\_\_\_

15)

15. \_\_\_\_\_

16)

16. \_\_\_\_\_

17)

17. \_\_\_\_\_


















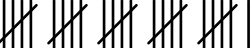
18)

18. \_\_\_\_\_



Determine the value of each set of tally marks.

Answers

- |   |               |
|---|---------------|
| 1)     | 1. <u>15</u>  |
| 2)     | 2. <u>48</u>  |
| 3)     | 3. <u>21</u>  |
| 4)     | 4. <u>17</u>  |
| 5)     | 5. <u>8</u>   |
| 6)     | 6. <u>11</u>  |
| 7)     | 7. <u>43</u>  |
| 8)     | 8. <u>33</u>  |
| 9)    | 9. <u>37</u>  |
| 10)  | 10. <u>16</u> |
| 11)  | 11. <u>46</u> |
| 12)  | 12. <u>9</u>  |
| 13)  | 13. <u>7</u>  |
| 14)  | 14. <u>41</u> |
| 15)  | 15. <u>38</u> |
| 16)  | 16. <u>47</u> |
| 17)  | 17. <u>27</u> |
| 18)  | 18. <u>26</u> |