



Determine the value of each set of tally marks.

Answers

1)

1. _____

2)

2. _____

3)

3. _____

4)

4. _____

5)

5. _____

6)

6. _____

7)

7. _____

8)

8. _____

9)

9. _____

10)

10. _____

11)

11. _____

12)

12. _____

13)

13. _____

14)

14. _____

15)

15. _____

16)

16. _____

17)

17. _____






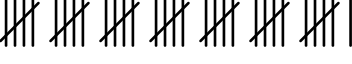
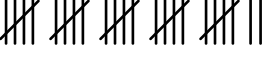


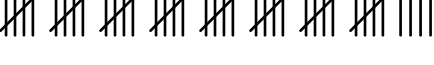
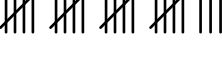


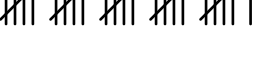
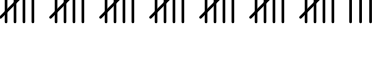
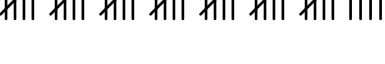
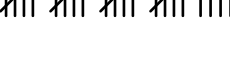

18)

18. _____



Determine the value of each set of tally marks.

Answers

1) 	1. <u>42</u>
2) 	2. <u>15</u>
3) 	3. <u>19</u>
4) 	4. <u>49</u>
5) 	5. <u>20</u>
6) 	6. <u>36</u>
7) 	7. <u>27</u>
8) 	8. <u>9</u>
9) 	9. <u>25</u>
10) 	10. <u>44</u>
11) 	11. <u>23</u>
12) 	12. <u>29</u>
13) 	13. <u>8</u>
14) 	14. <u>26</u>
15) 	15. <u>38</u>
16) 	16. <u>39</u>
17) 	17. <u>24</u>
18) 	18. <u>34</u>