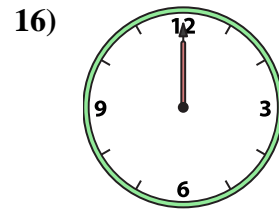

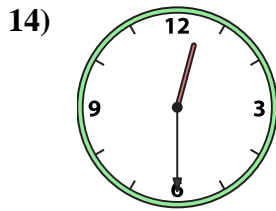
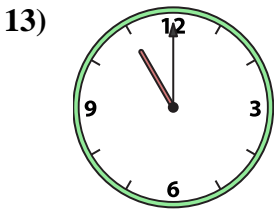
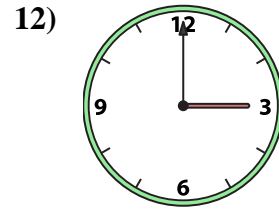
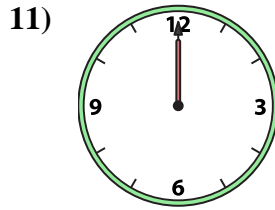
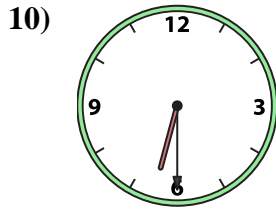
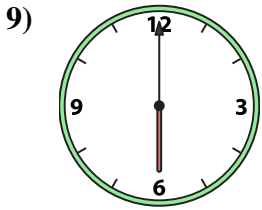
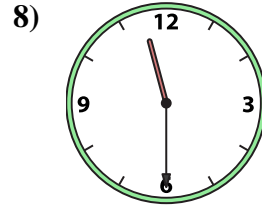
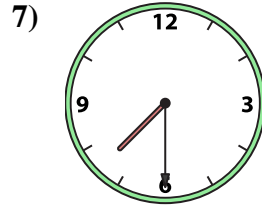
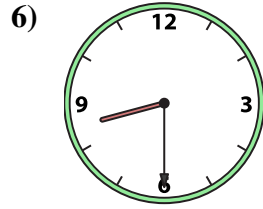
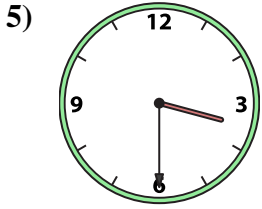
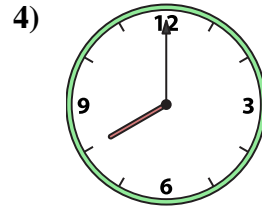
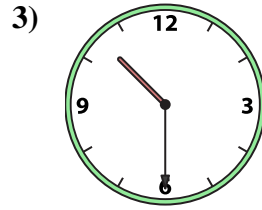
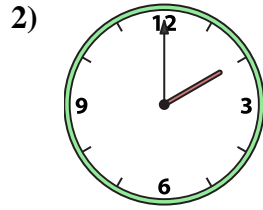





Match the analog clock to the digital clock.

Answers



A. **10:30**

B. **2:00**

C. **7:30**

D. **12:30**

E. **6:30**

F. **1:00**

G. **12:00**

H. **6:00**

I. **3:30**

J. **3:00**

K. **11:30**

L. **5:00**

M. **8:00**

N. **12:00**

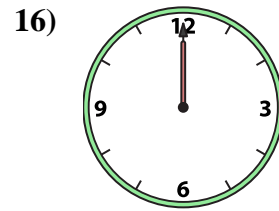

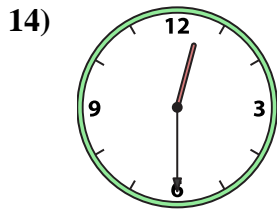
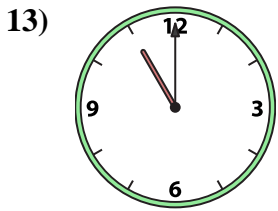
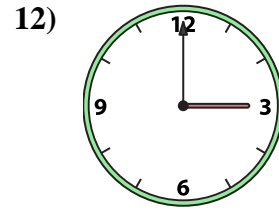
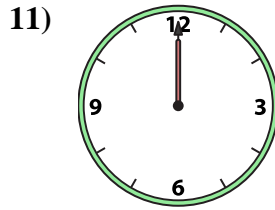
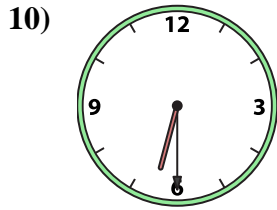
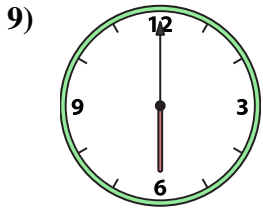
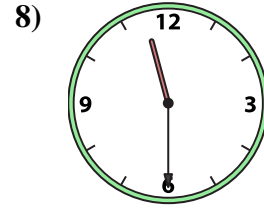
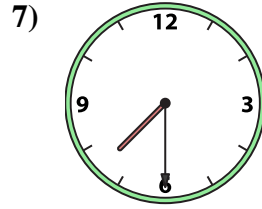
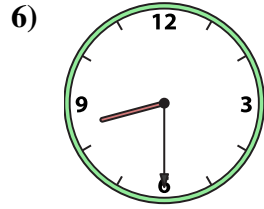
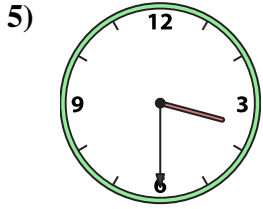
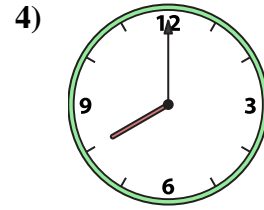
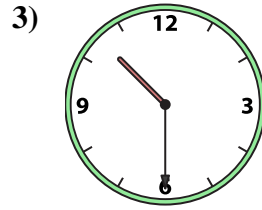
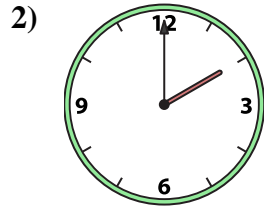

O. **11:00**

P. **8:30**

1. _____
2. _____
3. _____
4. _____
5. _____
6. _____
7. _____
8. _____
9. _____
10. _____
11. _____
12. _____
13. _____
14. _____
15. _____
16. _____



Match the analog clock to the digital clock.



A. **10:30**

B. **2:00**

C. **7:30**

D. **12:30**

E. **6:30**

F. **1:00**

G. **12:00**

H. **6:00**

I. **3:30**

J. **3:00**

K. **11:30**

L. **5:00**

M. **8:00**

N. **12:00**

O. **11:00**

P. **8:30**

Answers

1. **F**

2. **B**

3. **A**

4. **M**

5. **I**

6. **P**

7. **C**

8. **K**

9. **H**

10. **E**

11. **N**

12. **J**

13. **O**

14. **D**

15. **L**

16. **G**