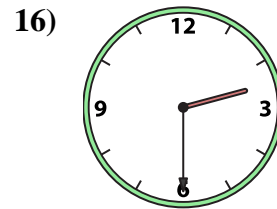
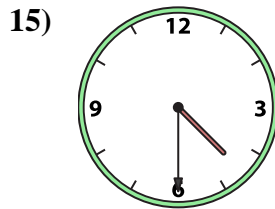
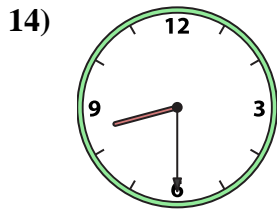
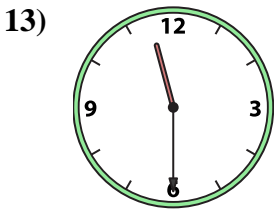
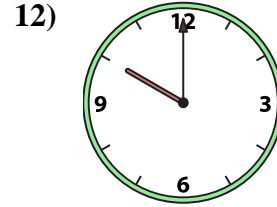
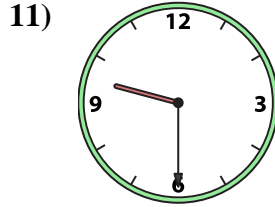
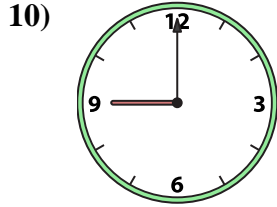
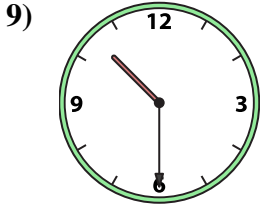
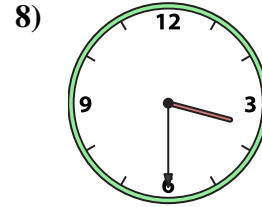
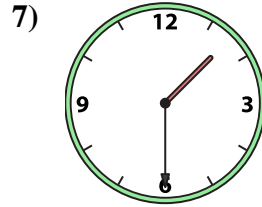
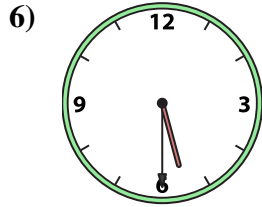

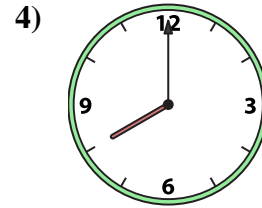
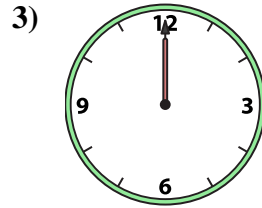






Match the analog clock to the digital clock.

Answers



A. 12:00

B. 8:00

C. 1:30

D. 3:00

E. 2:30

F. 4:30

G. 2:00

H. 10:30

I. 9:00

J. 10:00

K. 5:30

L. 9:30

M. 8:30

N. 5:00

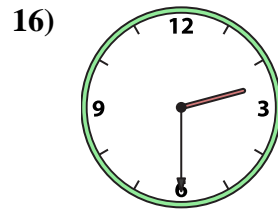
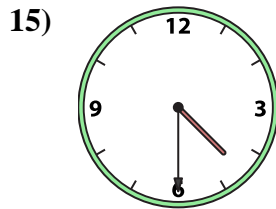
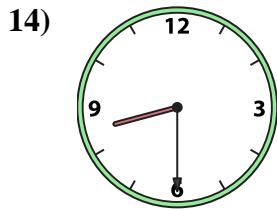
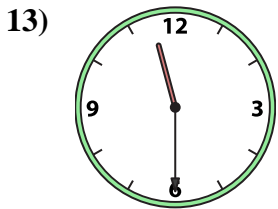
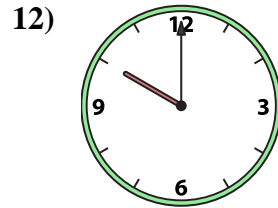
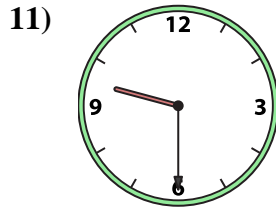
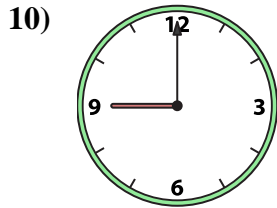
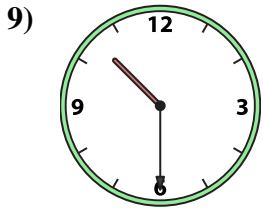
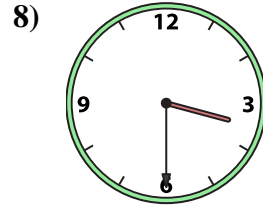
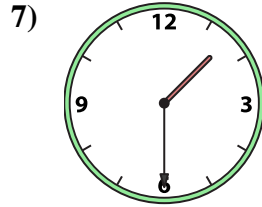
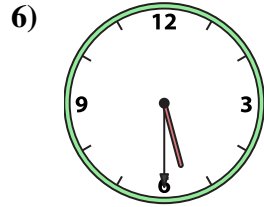
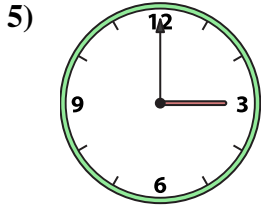
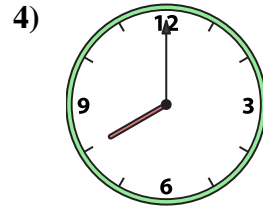
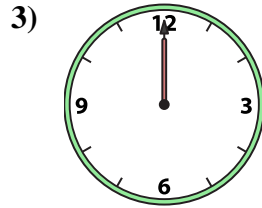


O. 11:30

P. 3:30

- 1. _____
- 2. _____
- 3. _____
- 4. _____
- 5. _____
- 6. _____
- 7. _____
- 8. _____
- 9. _____
- 10. _____
- 11. _____
- 12. _____
- 13. _____
- 14. _____
- 15. _____
- 16. _____



Match the analog clock to the digital clock.



A. **12:00**

B. **8:00**

C. **1:30**

D. **3:00**

E. **2:30**

F. **4:30**

G. **2:00**

H. **10:30**

I. **9:00**

J. **10:00**

K. **5:30**

L. **9:30**

M. **8:30**

N. **5:00**

O. **11:30**

P. **3:30**

Answers

1. **N**

2. **G**

3. **A**

4. **B**

5. **D**

6. **K**

7. **C**

8. **P**

9. **H**

10. **I**

11. **L**

12. **J**

13. **O**

14. **M**

15. **F**

16. **E**