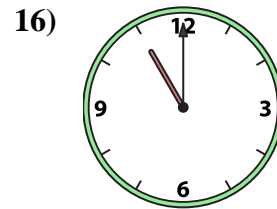
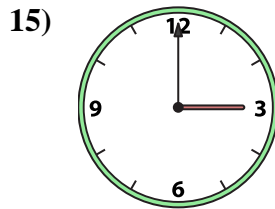
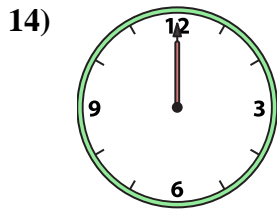
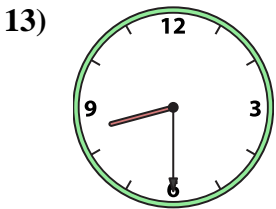
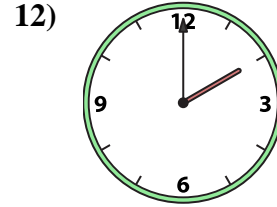
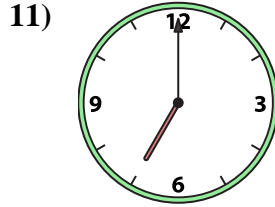
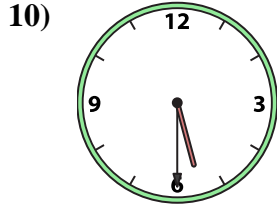

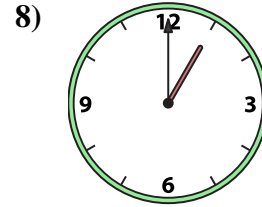
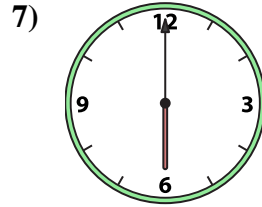
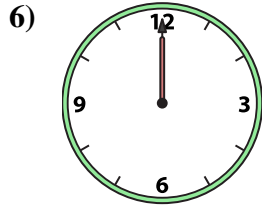
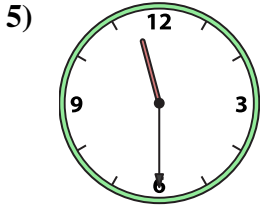
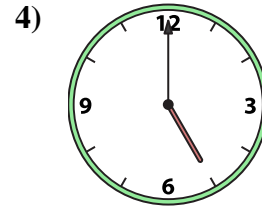
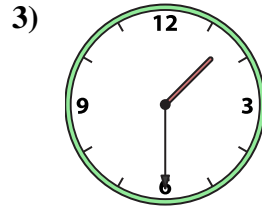
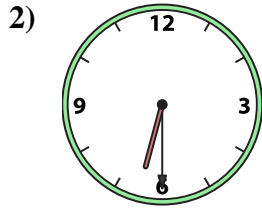
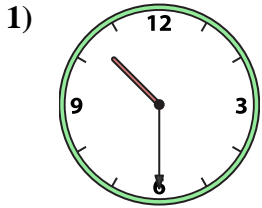




Match the analog clock to the digital clock.

**Answers**



A. **6:00**

B. **1:30**

C. **6:30**

D. **12:00**

E. **2:00**

F. **12:30**

G. **10:30**

H. **1:00**

I. **8:30**

J. **5:30**

K. **11:00**

L. **5:00**

M. **12:00**

N. **7:00**

O. **3:00**

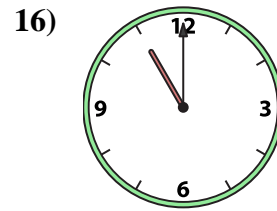
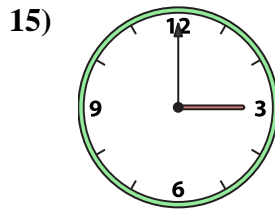
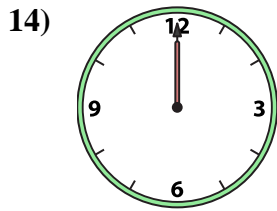
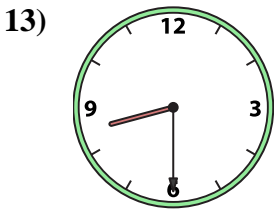
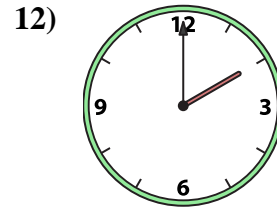
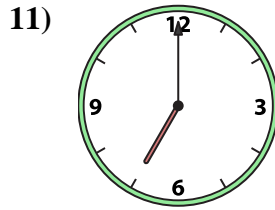
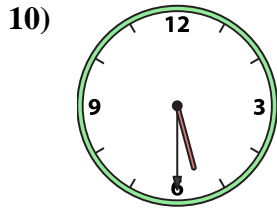
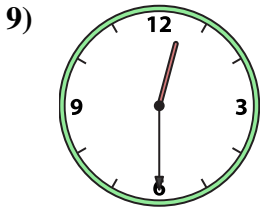
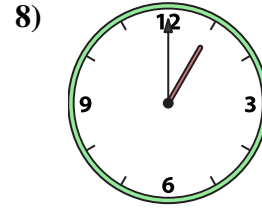
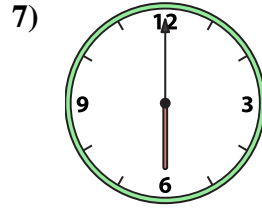
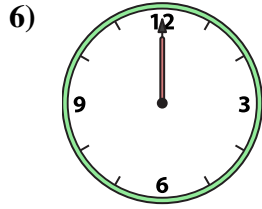
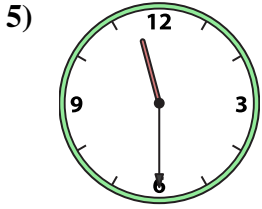
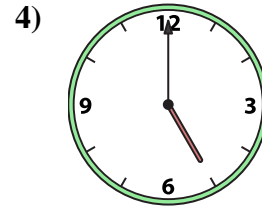
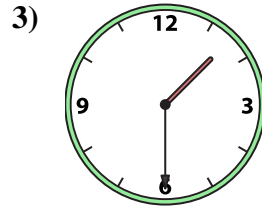
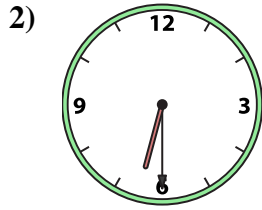
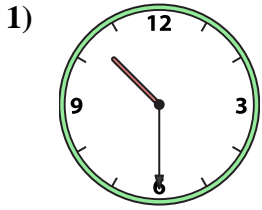
P. **11:30**

- 1. \_\_\_\_\_
- 2. \_\_\_\_\_
- 3. \_\_\_\_\_
- 4. \_\_\_\_\_
- 5. \_\_\_\_\_
- 6. \_\_\_\_\_
- 7. \_\_\_\_\_
- 8. \_\_\_\_\_
- 9. \_\_\_\_\_
- 10. \_\_\_\_\_
- 11. \_\_\_\_\_
- 12. \_\_\_\_\_
- 13. \_\_\_\_\_
- 14. \_\_\_\_\_
- 15. \_\_\_\_\_
- 16. \_\_\_\_\_



Match the analog clock to the digital clock.

**Answers**



A. **6:00**

B. **1:30**

C. **6:30**

D. **12:00**

E. **2:00**

F. **12:30**

G. **10:30**

H. **1:00**

I. **8:30**

J. **5:30**

K. **11:00**

L. **5:00**

M. **12:00**

N. **7:00**

O. **3:00**

P. **11:30**

1. **G**

2. **C**

3. **B**

4. **L**

5. **P**

6. **D**

7. **A**

8. **H**

9. **F**

10. **J**

11. **N**

12. **E**

13. **I**

14. **M**

15. **O**

16. **K**