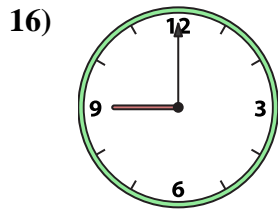
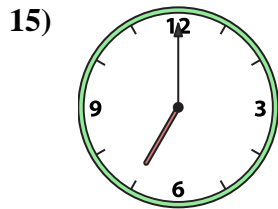
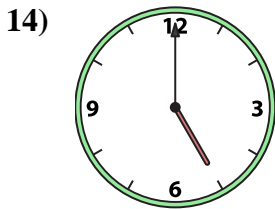
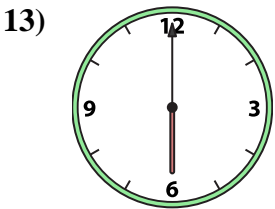
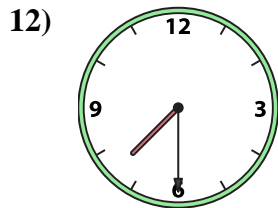
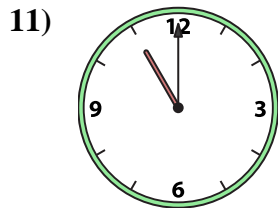
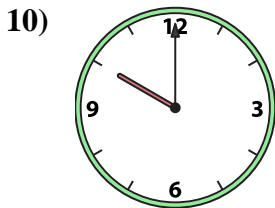

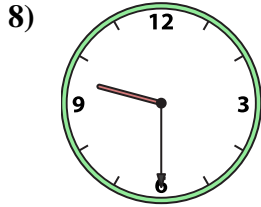
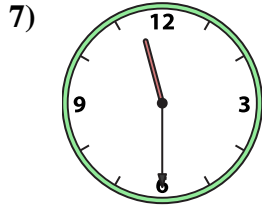
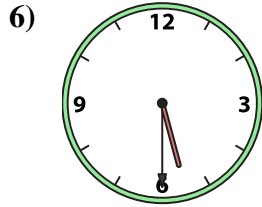

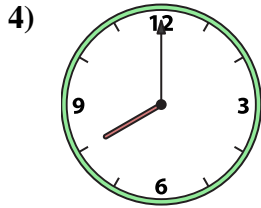
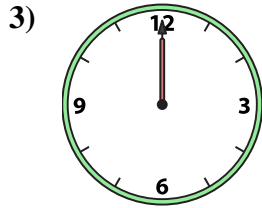
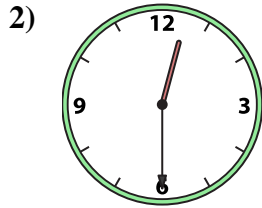
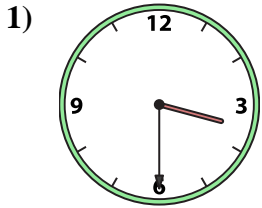




Match the analog clock to the digital clock.

Answers



A. **7:00**

B. **12:00**

C. **7:30**

D. **11:00**

E. **9:30**

F. **6:00**

G. **5:00**

H. **12:30**

I. **8:00**

J. **11:30**

K. **1:00**

L. **1:30**

M. **10:00**

N. **3:30**

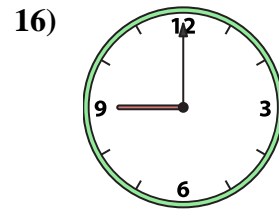
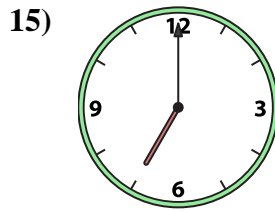
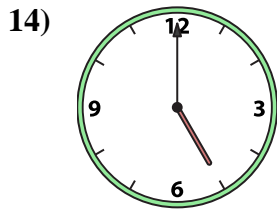
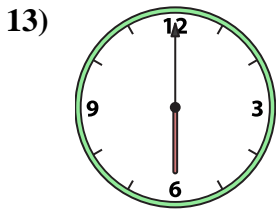
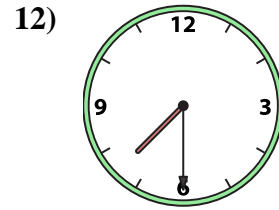
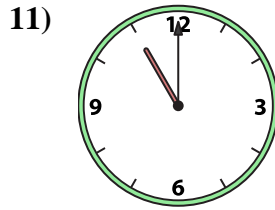
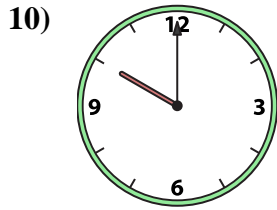
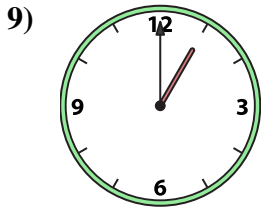
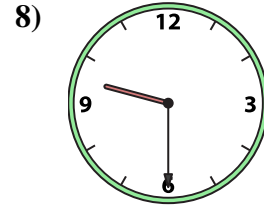
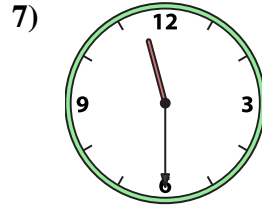
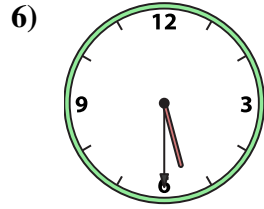
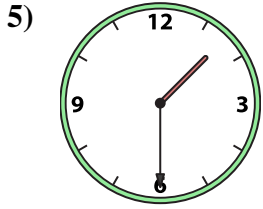
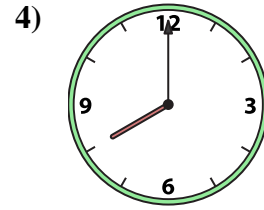
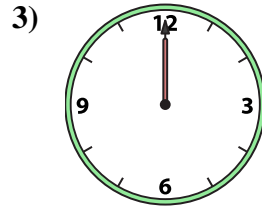
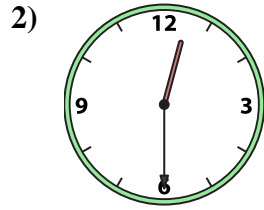
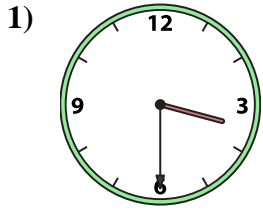
O. **9:00**

P. **5:30**

- 1. _____
- 2. _____
- 3. _____
- 4. _____
- 5. _____
- 6. _____
- 7. _____
- 8. _____
- 9. _____
- 10. _____
- 11. _____
- 12. _____
- 13. _____
- 14. _____
- 15. _____
- 16. _____



Match the analog clock to the digital clock.



A. **7:00**

B. **12:00**

C. **7:30**

D. **11:00**

E. **9:30**

F. **6:00**

G. **5:00**

H. **12:30**

I. **8:00**

J. **11:30**

K. **1:00**

L. **1:30**

M. **10:00**

N. **3:30**

O. **9:00**

P. **5:30**

Answers

1. **N**

2. **H**

3. **B**

4. **I**

5. **L**

6. **P**

7. **J**

8. **E**

9. **K**

10. **M**

11. **D**

12. **C**

13. **F**

14. **G**

15. **A**

16. **O**