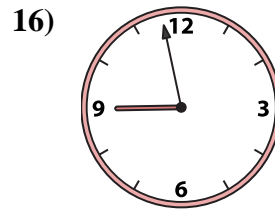
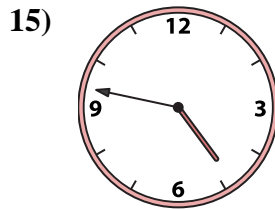
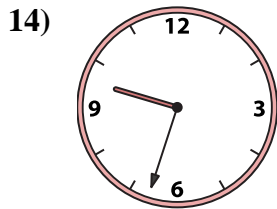
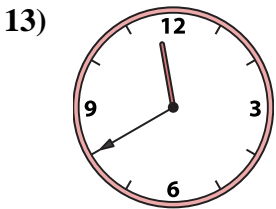
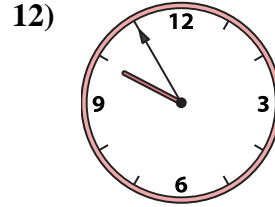
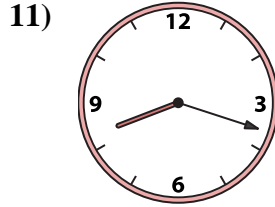
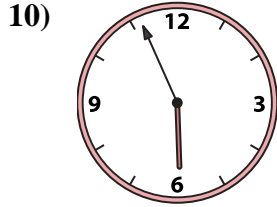

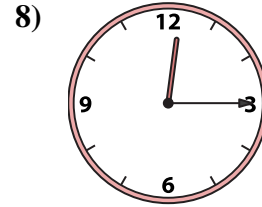
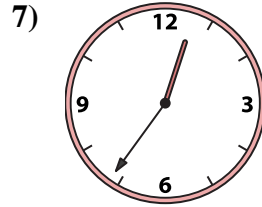
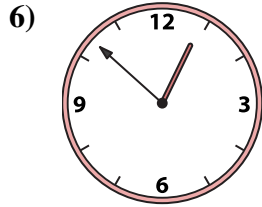

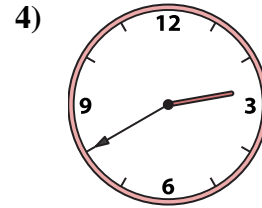
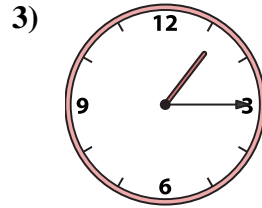






Match the analog clock to the digital clock.

Answers



A. **9:55**

B. **5:56**

C. **4:47**

D. **11:40**

E. **3:51**

F. **1:58**

G. **8:18**

H. **1:15**

I. **6:57**

J. **8:58**

K. **9:33**

L. **12:52**

M. **11:55**

N. **12:15**

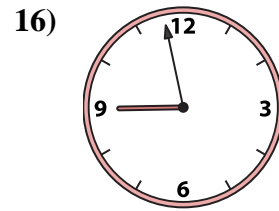
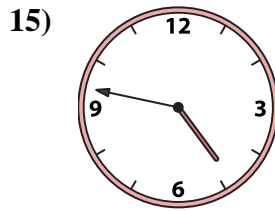
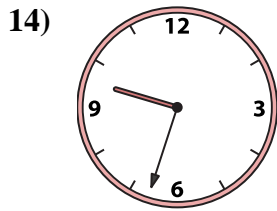
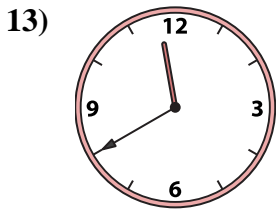
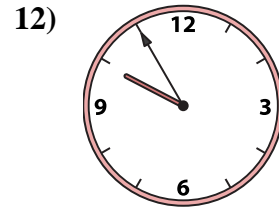
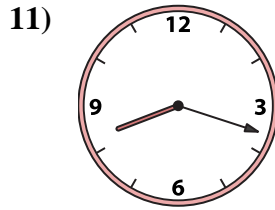
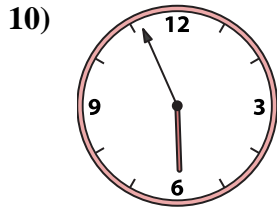
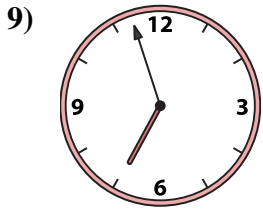
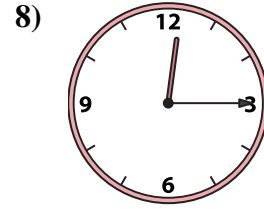
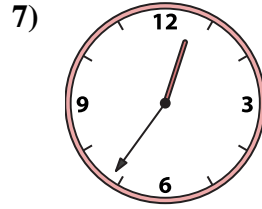
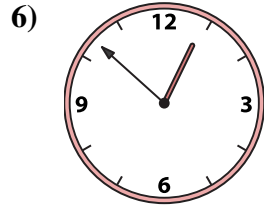

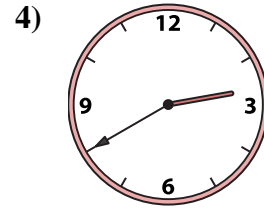
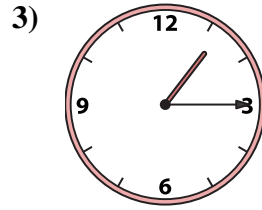
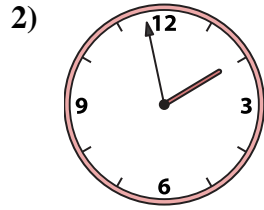
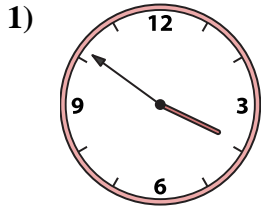
O. **12:36**

P. **2:40**

1. _____
2. _____
3. _____
4. _____
5. _____
6. _____
7. _____
8. _____
9. _____
10. _____
11. _____
12. _____
13. _____
14. _____
15. _____
16. _____



Match the analog clock to the digital clock.



A. **9:55**

B. **5:56**

C. **4:47**

D. **11:40**

E. **3:51**

F. **1:58**

G. **8:18**

H. **1:15**

I. **6:57**

J. **8:58**

K. **9:33**

L. **12:52**

M. **11:55**

N. **12:15**

O. **12:36**

P. **2:40**

Answers

1. **E**

2. **F**

3. **H**

4. **P**

5. **M**

6. **L**

7. **O**

8. **N**

9. **I**

10. **B**

11. **G**

12. **A**

13. **D**

14. **K**

15. **C**

16. **J**