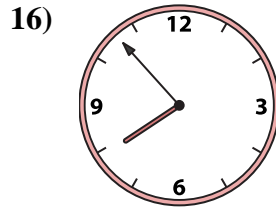
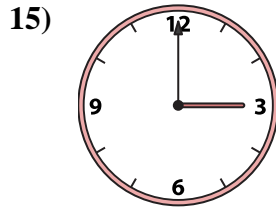
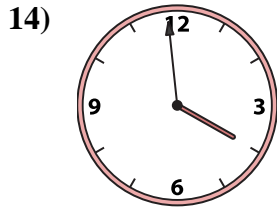
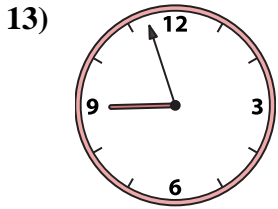
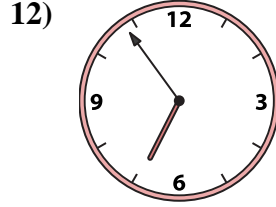
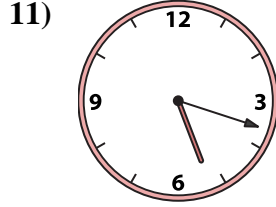
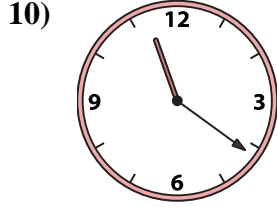

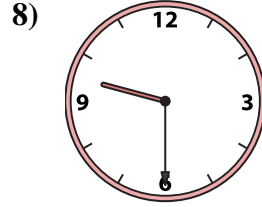
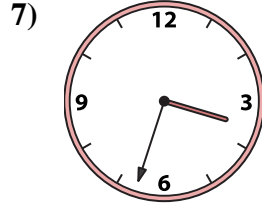
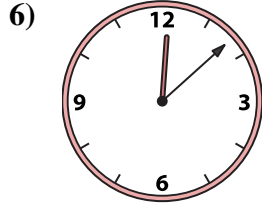

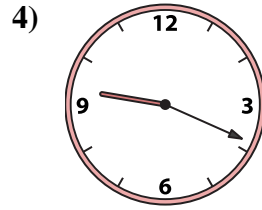
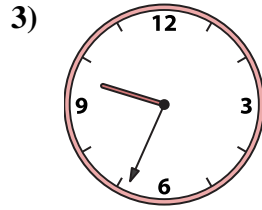
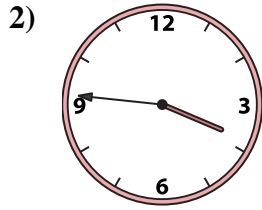
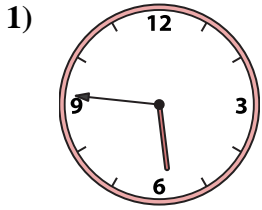




Match the analog clock to the digital clock.

**Answers**



A. **5:46**

B. **3:00**

C. **3:46**

D. **12:08**

E. **3:33**

F. **6:54**

G. **7:53**

H. **12:01**

I. **9:30**

J. **3:59**

K. **4:57**

L. **8:57**

M. **5:18**

N. **9:34**

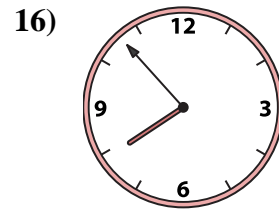
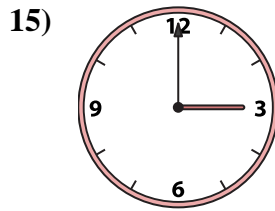
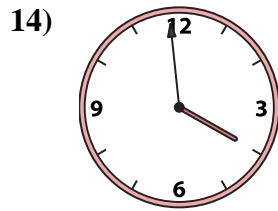
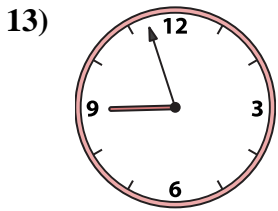
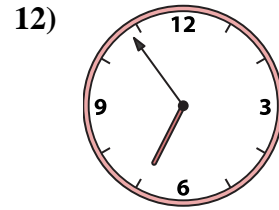
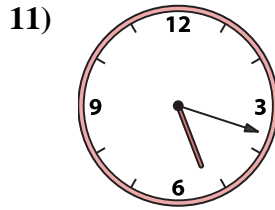
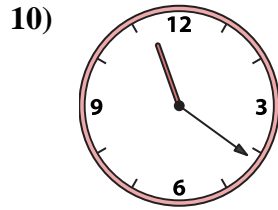

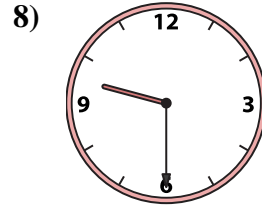
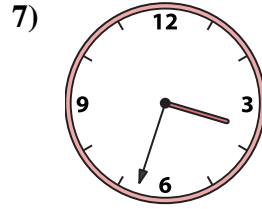
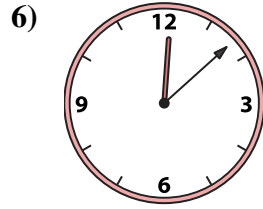
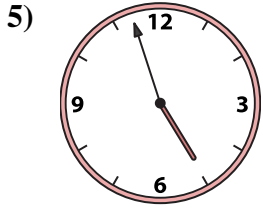
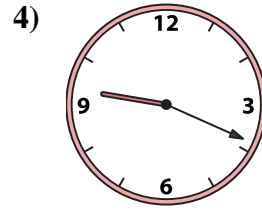
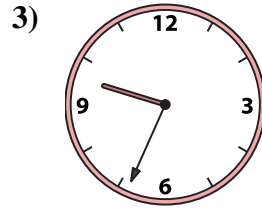
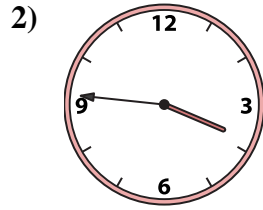
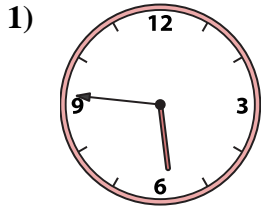
O. **9:19**

P. **11:21**

1. \_\_\_\_\_
2. \_\_\_\_\_
3. \_\_\_\_\_
4. \_\_\_\_\_
5. \_\_\_\_\_
6. \_\_\_\_\_
7. \_\_\_\_\_
8. \_\_\_\_\_
9. \_\_\_\_\_
10. \_\_\_\_\_
11. \_\_\_\_\_
12. \_\_\_\_\_
13. \_\_\_\_\_
14. \_\_\_\_\_
15. \_\_\_\_\_
16. \_\_\_\_\_



Match the analog clock to the digital clock.



A. **5:46**

B. **3:00**

C. **3:46**

D. **12:08**

E. **3:33**

F. **6:54**

G. **7:53**

H. **12:01**

I. **9:30**

J. **3:59**

K. **4:57**

L. **8:57**

M. **5:18**

N. **9:34**

O. **9:19**

P. **11:21**

**Answers**

1. **A**

2. **C**

3. **N**

4. **O**

5. **K**

6. **D**

7. **E**

8. **I**

9. **H**

10. **P**

11. **M**

12. **F**

13. **L**

14. **J**

15. **B**

16. **G**