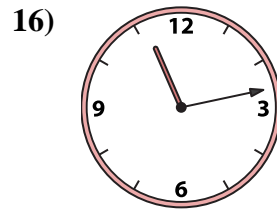
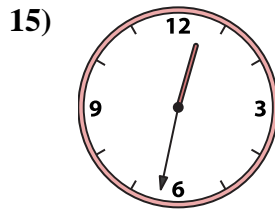
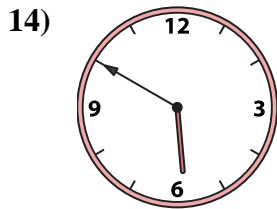
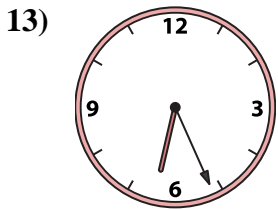
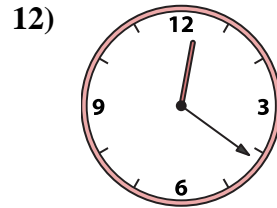
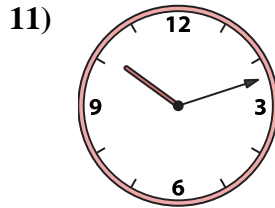
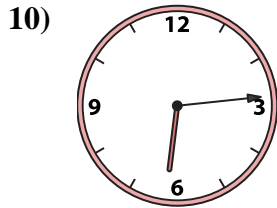
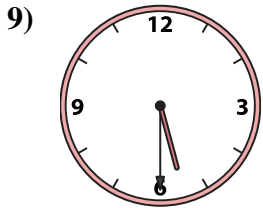
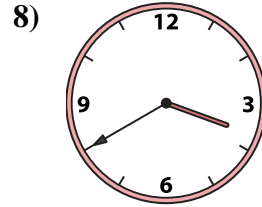
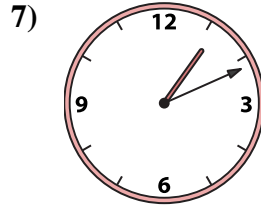

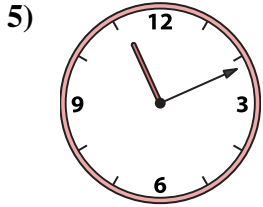
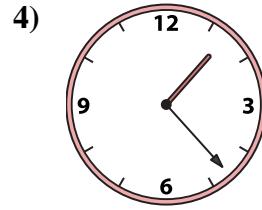
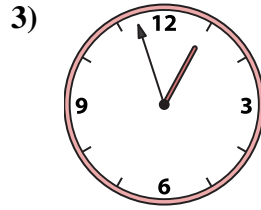
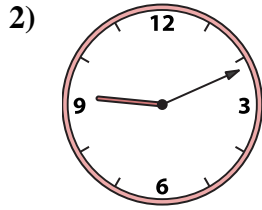
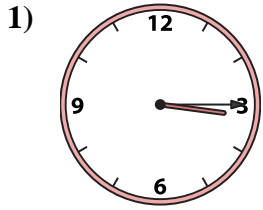




Match the analog clock to the digital clock.

**Answers**



A. 10:12

B. 3:40

C. 1:23

D. 12:32

E. 12:21

F. 3:15

G. 1:11

H. 6:14

I. 5:50

J. 2:02

K. 5:30

L. 6:26

M. 12:57

N. 11:11

O. 11:13

P. 9:11

1. \_\_\_\_\_
2. \_\_\_\_\_
3. \_\_\_\_\_
4. \_\_\_\_\_
5. \_\_\_\_\_
6. \_\_\_\_\_
7. \_\_\_\_\_
8. \_\_\_\_\_
9. \_\_\_\_\_
10. \_\_\_\_\_
11. \_\_\_\_\_
12. \_\_\_\_\_
13. \_\_\_\_\_
14. \_\_\_\_\_
15. \_\_\_\_\_
16. \_\_\_\_\_



Match the analog clock to the digital clock.

1)

2)

3)

4)

5)

6)

7)

8)

9)

10)

11)

12)

13)

14)

15)

16)

A.

B.

C.

D.

E.

F.

G.

H.

I.

J.

K.

L.

M.

N.

O.

P.

**Answers**

1. **F**
2. **P**
3. **M**
4. **C**
5. **N**
6. **J**
7. **G**
8. **B**
9. **K**
10. **H**
11. **A**
12. **E**
13. **L**
14. **I**
15. **D**
16. **O**