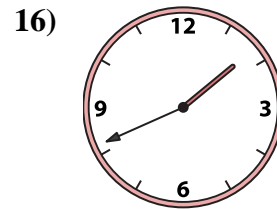
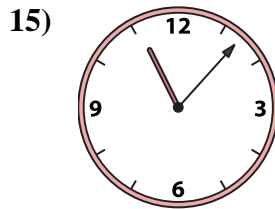
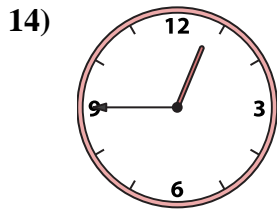
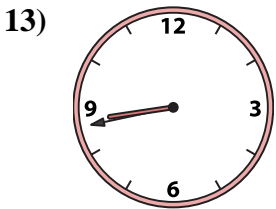
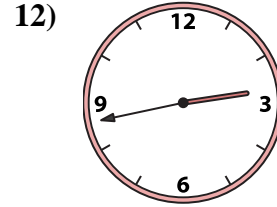
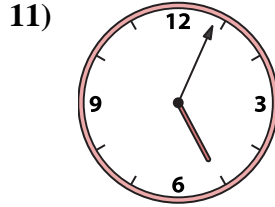
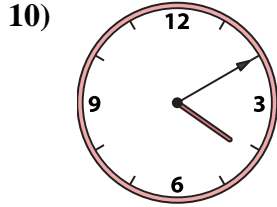

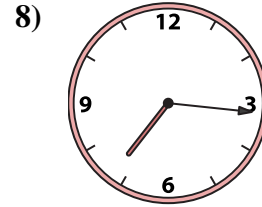
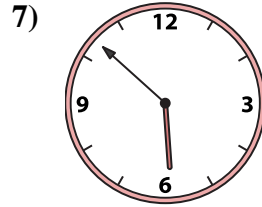

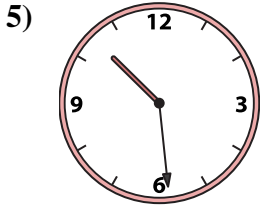
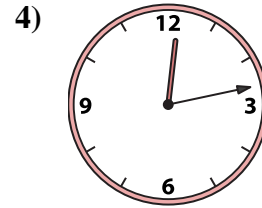
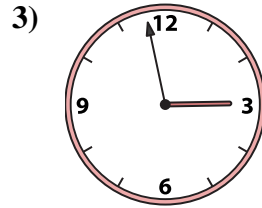
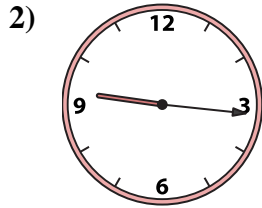
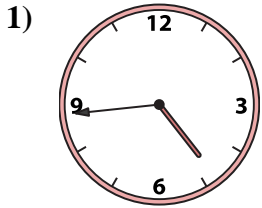




Match the analog clock to the digital clock.

Answers



A. **8:43**

B. **12:13**

C. **2:58**

D. **7:34**

E. **2:43**

F. **9:16**

G. **11:07**

H. **5:04**

I. **12:45**

J. **3:06**

K. **1:41**

L. **10:29**

M. **7:16**

N. **5:52**

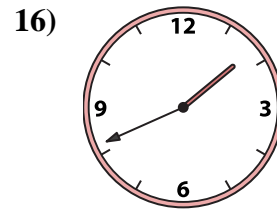
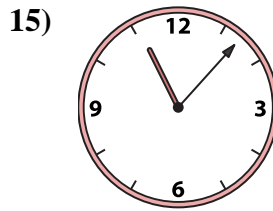
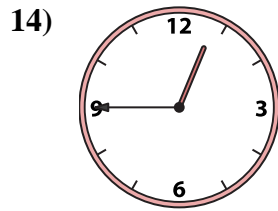
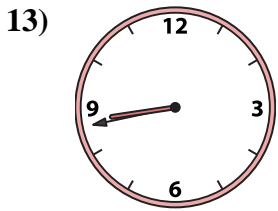
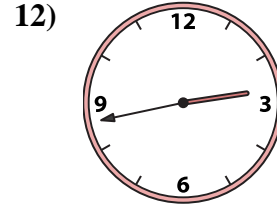
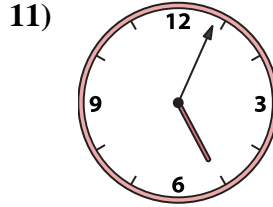
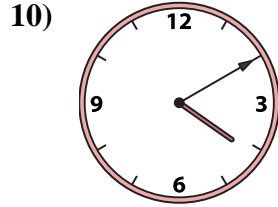
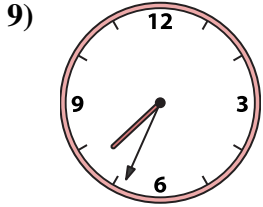
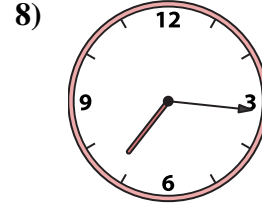
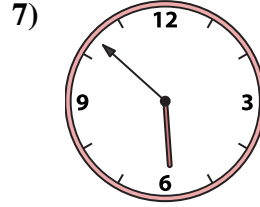
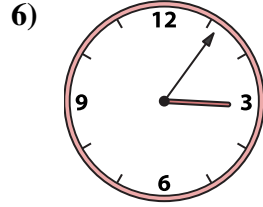
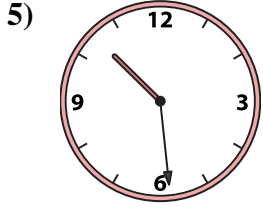
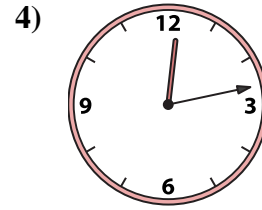
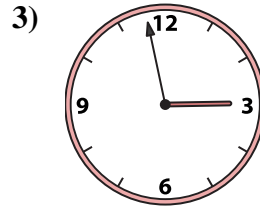
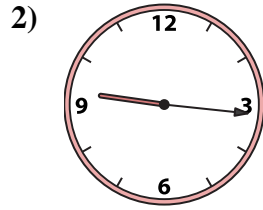
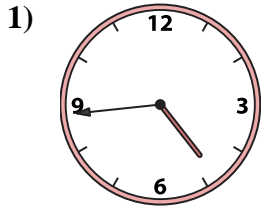
O. **4:10**

P. **4:44**

- 1. _____
- 2. _____
- 3. _____
- 4. _____
- 5. _____
- 6. _____
- 7. _____
- 8. _____
- 9. _____
- 10. _____
- 11. _____
- 12. _____
- 13. _____
- 14. _____
- 15. _____
- 16. _____



Match the analog clock to the digital clock.



A. **8:43**

B. **12:13**

C. **2:58**

D. **7:34**

E. **2:43**

F. **9:16**

G. **11:07**

H. **5:04**

I. **12:45**

J. **3:06**

K. **1:41**

L. **10:29**

M. **7:16**

N. **5:52**

O. **4:10**

P. **4:44**

Answers

1. **P**

2. **F**

3. **C**

4. **B**

5. **L**

6. **J**

7. **N**

8. **M**

9. **D**

10. **O**

11. **H**

12. **E**

13. **A**

14. **I**

15. **G**

16. **K**