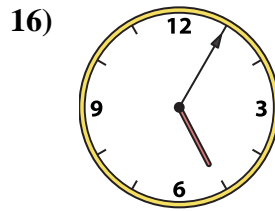
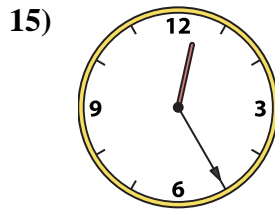
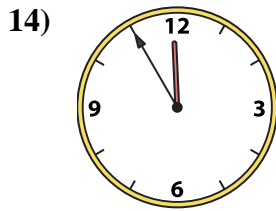
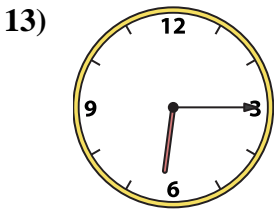
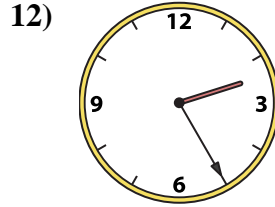
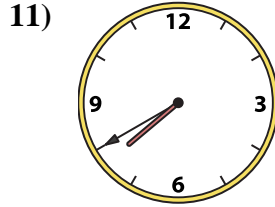
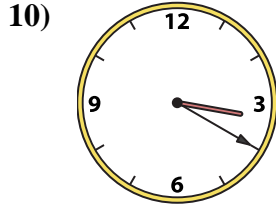
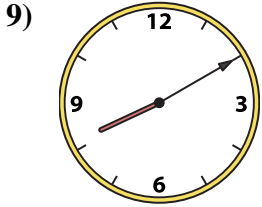
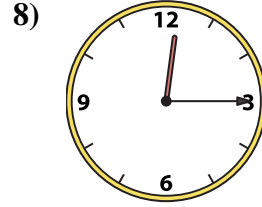
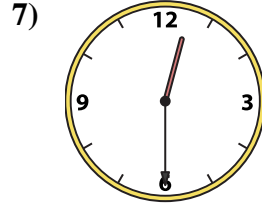


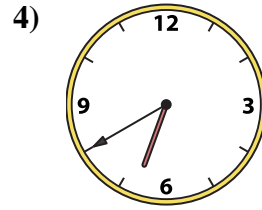
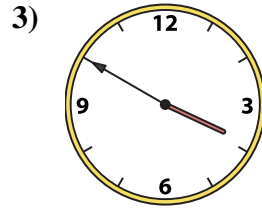
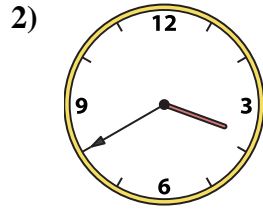
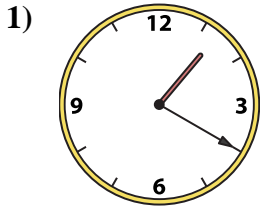




Match the analog clock to the digital clock.

Answers



A. **10:35**

B. **2:25**

C. **7:40**

D. **12:30**

E. **6:40**

F. **1:20**

G. **12:25**

H. **6:15**

I. **3:50**

J. **3:20**

K. **11:55**

L. **5:05**

M. **7:30**

N. **3:40**

O. **8:10**

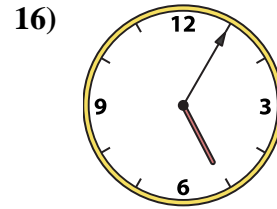
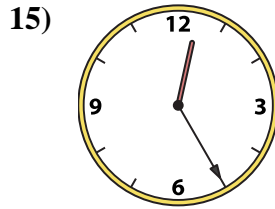
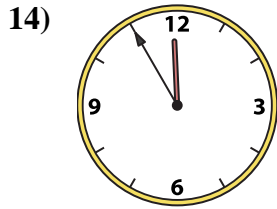
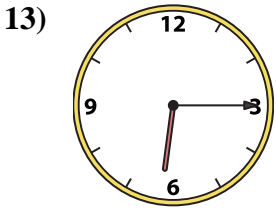
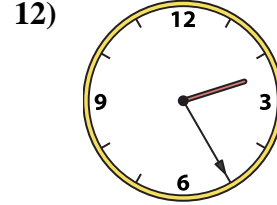
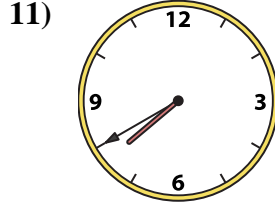
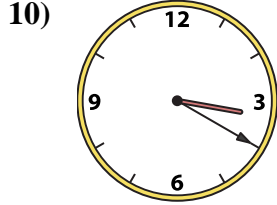
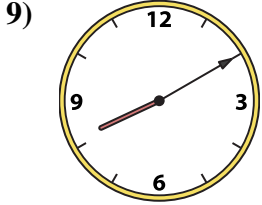
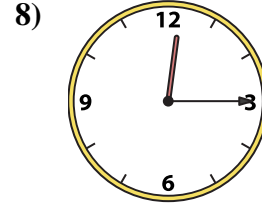
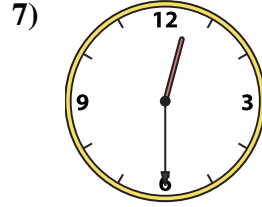
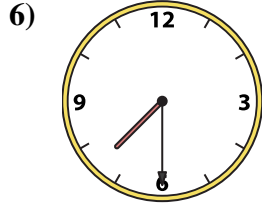

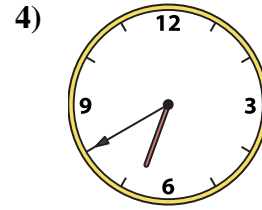
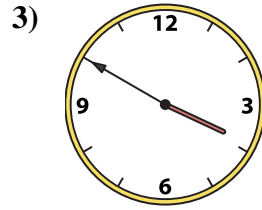
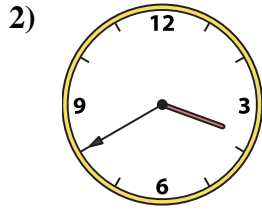
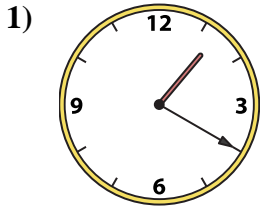
P. **12:15**

1. _____
2. _____
3. _____
4. _____
5. _____
6. _____
7. _____
8. _____
9. _____
10. _____
11. _____
12. _____
13. _____
14. _____
15. _____
16. _____



Match the analog clock to the digital clock.

Answers



A. **10:35**

B. **2:25**

C. **7:40**

D. **12:30**

E. **6:40**

F. **1:20**

G. **12:25**

H. **6:15**

I. **3:50**

J. **3:20**

K. **11:55**

L. **5:05**

M. **7:30**

N. **3:40**

O. **8:10**

P. **12:15**

1. **F**

2. **N**

3. **I**

4. **E**

5. **A**

6. **M**

7. **D**

8. **P**

9. **O**

10. **J**

11. **C**

12. **B**

13. **H**

14. **K**

15. **G**

16. **L**