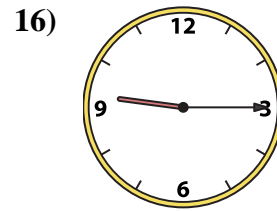
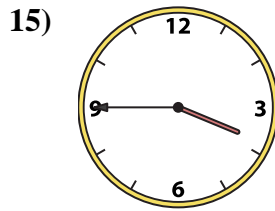
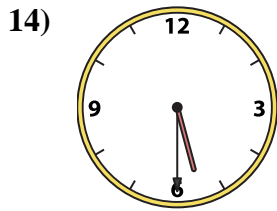
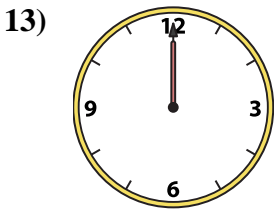
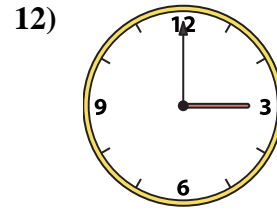
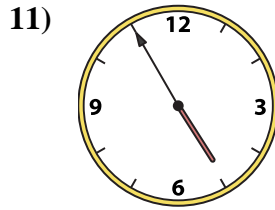
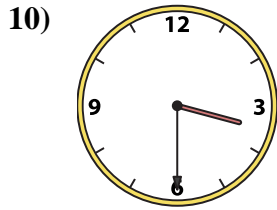
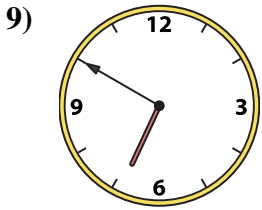
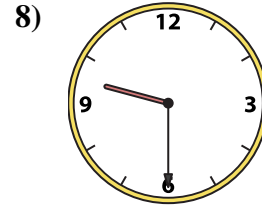
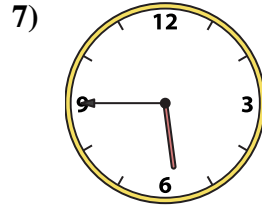
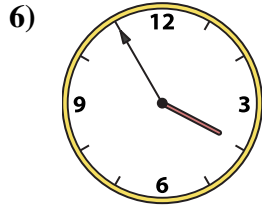
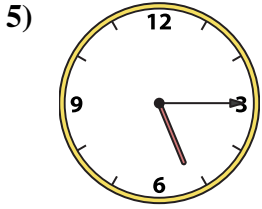
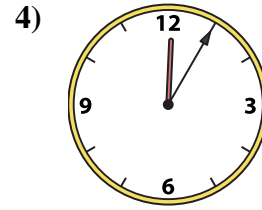
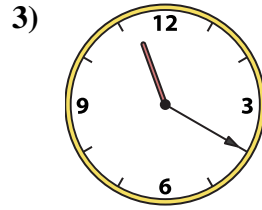
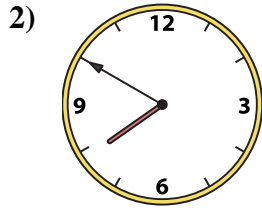





Match the analog clock to the digital clock.

Answers



A. **5:45**

B. **3:00**

C. **3:45**

D. **12:05**

E. **3:30**

F. **6:50**

G. **7:50**

H. **12:00**

I. **9:30**

J. **3:55**

K. **4:55**

L. **8:55**

M. **5:15**

N. **9:15**

O. **11:20**

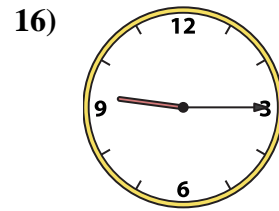
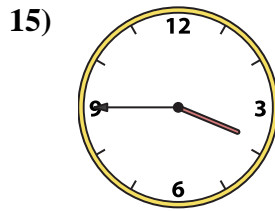
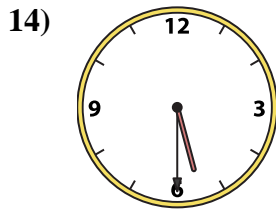
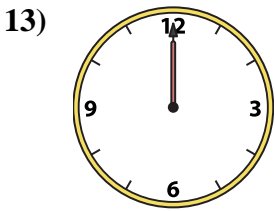
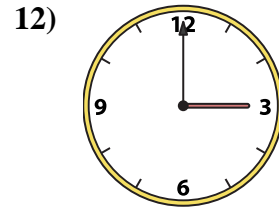
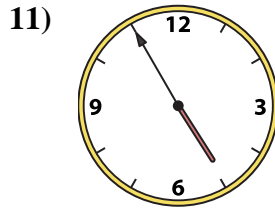
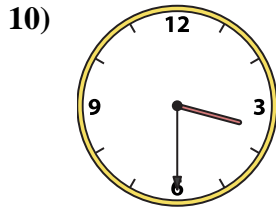
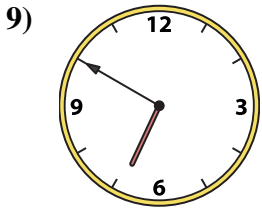
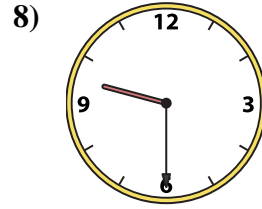
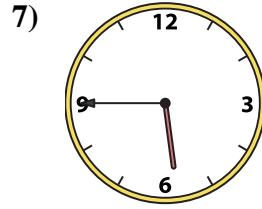
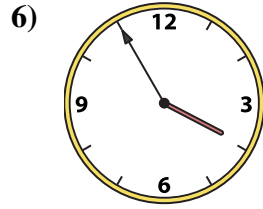
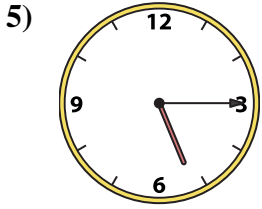
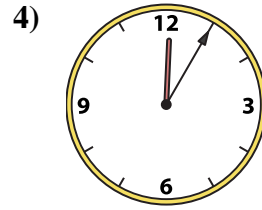
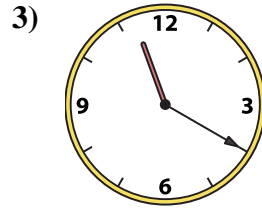
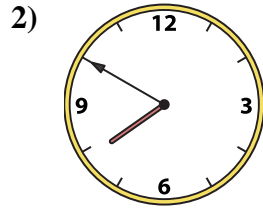

P. **5:30**

- 1. _____
- 2. _____
- 3. _____
- 4. _____
- 5. _____
- 6. _____
- 7. _____
- 8. _____
- 9. _____
- 10. _____
- 11. _____
- 12. _____
- 13. _____
- 14. _____
- 15. _____
- 16. _____



Match the analog clock to the digital clock.

Answers



A. **5:45**

B. **3:00**

C. **3:45**

D. **12:05**

E. **3:30**

F. **6:50**

G. **7:50**

H. **12:00**

I. **9:30**

J. **3:55**

K. **4:55**

L. **8:55**

M. **5:15**

N. **9:15**

O. **11:20**

P. **5:30**

1. **L**

2. **G**

3. **O**

4. **D**

5. **M**

6. **J**

7. **A**

8. **I**

9. **F**

10. **E**

11. **K**

12. **B**

13. **H**

14. **P**

15. **C**

16. **N**